



INFIQ GRADE 1 WORKSHEETS






Advanced Addition - Add Doubles

Name _____

Date _____

Complete the doubles fact.

Count the number of cupcakes for each doubles fact and write the sum.

	+		=	<input type="text"/>
	+		=	<input type="text"/>
	+		=	<input type="text"/>
	+		=	<input type="text"/>
	+		=	<input type="text"/>
	+		=	<input type="text"/>
	+		=	<input type="text"/>

Download the Curriculum-based **INFIQ** Digital Workbook from the App Store for **UNLIMITED QUESTIONS**