




Name _____


Date _____

Find the sum.


$$\begin{array}{r} 13 \\ + 5 \\ \hline \end{array}$$



$$\begin{array}{r} 80 \\ + 9 \\ \hline \end{array}$$


$$\begin{array}{r} 40 \\ + 2 \\ \hline \end{array}$$


$$\begin{array}{r} 15 \\ + 1 \\ \hline \end{array}$$



$$\begin{array}{r} 22 \\ + 6 \\ \hline \end{array}$$



$$\begin{array}{r} 42 \\ + 4 \\ \hline \end{array}$$



$$\begin{array}{r} 61 \\ + 8 \\ \hline \end{array}$$


$$\begin{array}{r} 32 \\ + 3 \\ \hline \end{array}$$


$$\begin{array}{r} 71 \\ + 8 \\ \hline \end{array}$$


$$\begin{array}{r} 15 \\ + 3 \\ \hline \end{array}$$


$$\begin{array}{r} 91 \\ + 7 \\ \hline \end{array}$$


$$\begin{array}{r} 31 \\ + 5 \\ \hline \end{array}$$