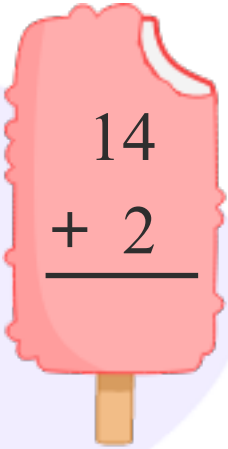


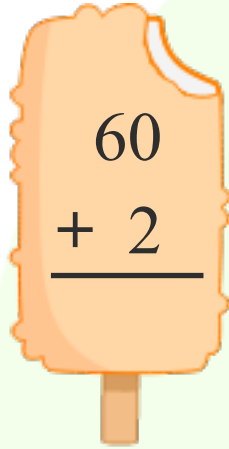


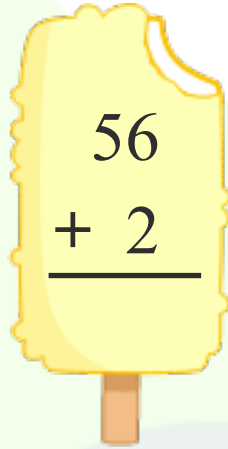
Name \_\_\_\_\_

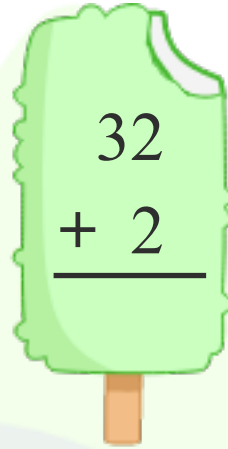
Date \_\_\_\_\_

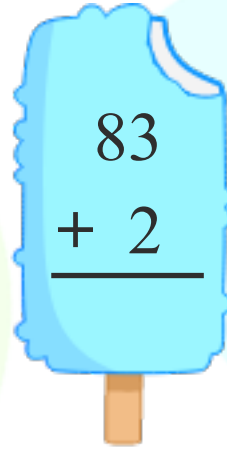
Find the sum.

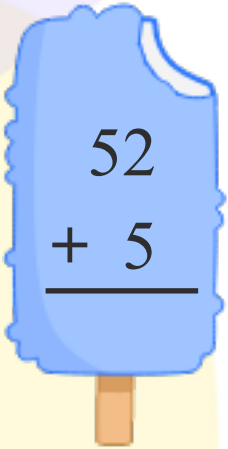

$$\begin{array}{r} 14 \\ + 2 \\ \hline \end{array}$$

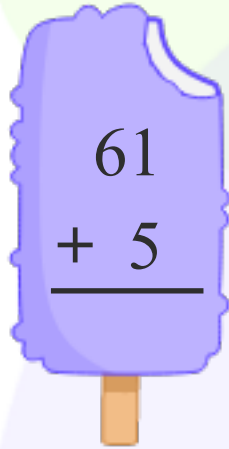

$$\begin{array}{r} 60 \\ + 2 \\ \hline \end{array}$$

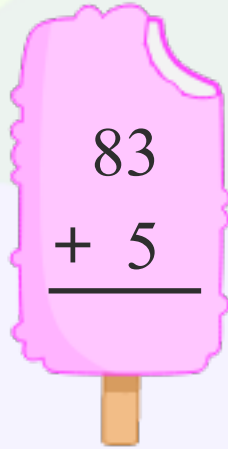

$$\begin{array}{r} 56 \\ + 2 \\ \hline \end{array}$$

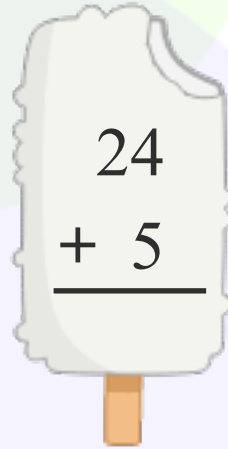

$$\begin{array}{r} 32 \\ + 2 \\ \hline \end{array}$$

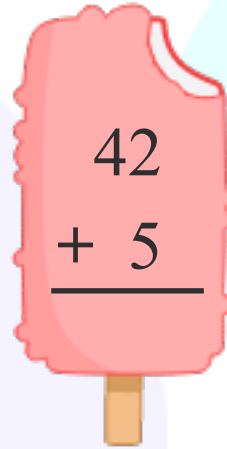

$$\begin{array}{r} 83 \\ + 2 \\ \hline \end{array}$$

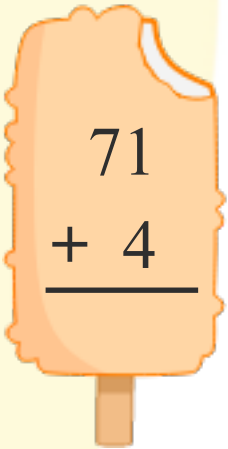

$$\begin{array}{r} 52 \\ + 5 \\ \hline \end{array}$$

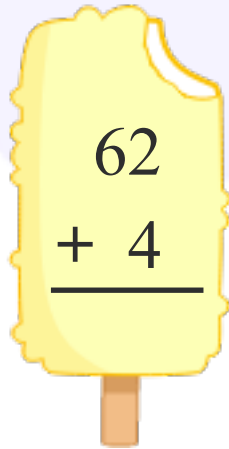

$$\begin{array}{r} 61 \\ + 5 \\ \hline \end{array}$$

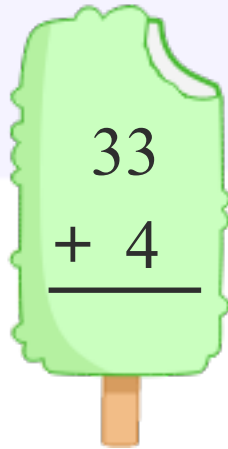

$$\begin{array}{r} 83 \\ + 5 \\ \hline \end{array}$$

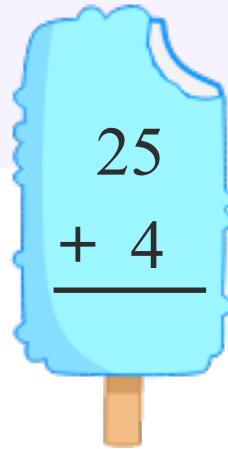

$$\begin{array}{r} 24 \\ + 5 \\ \hline \end{array}$$

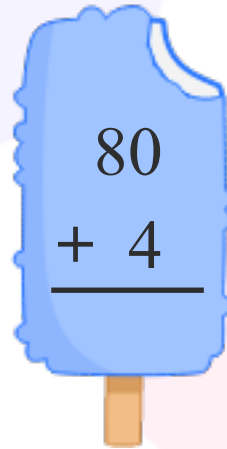

$$\begin{array}{r} 42 \\ + 5 \\ \hline \end{array}$$


$$\begin{array}{r} 71 \\ + 4 \\ \hline \end{array}$$


$$\begin{array}{r} 62 \\ + 4 \\ \hline \end{array}$$


$$\begin{array}{r} 33 \\ + 4 \\ \hline \end{array}$$


$$\begin{array}{r} 25 \\ + 4 \\ \hline \end{array}$$


$$\begin{array}{r} 80 \\ + 4 \\ \hline \end{array}$$