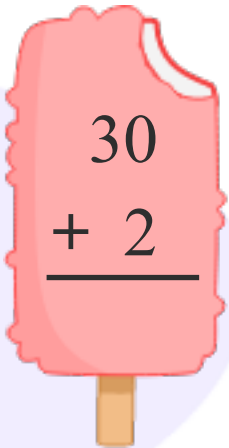


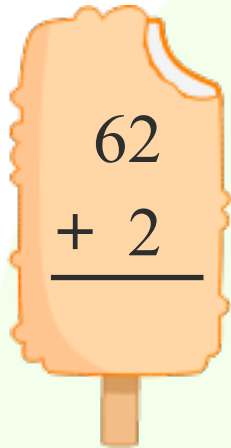
Name _____

Date _____

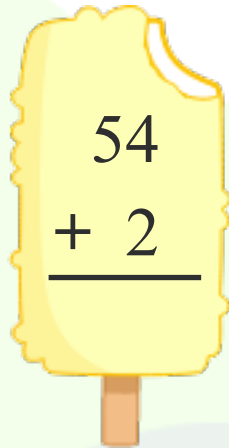
Find the sum.



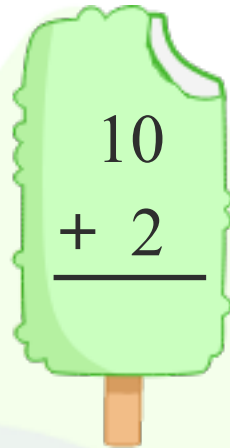
$$\begin{array}{r} 30 \\ + 2 \\ \hline \end{array}$$



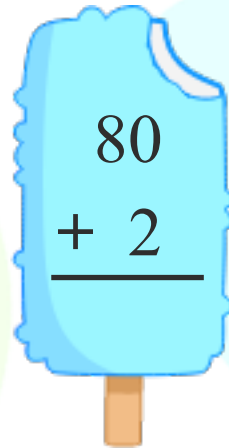
$$\begin{array}{r} 62 \\ + 2 \\ \hline \end{array}$$



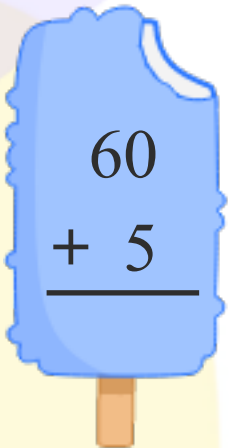
$$\begin{array}{r} 54 \\ + 2 \\ \hline \end{array}$$



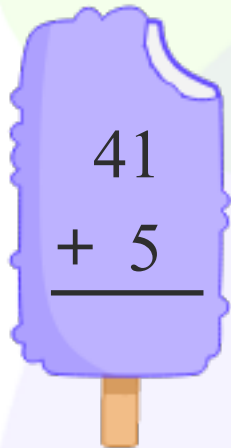
$$\begin{array}{r} 10 \\ + 2 \\ \hline \end{array}$$



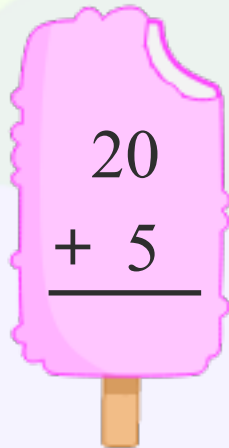
$$\begin{array}{r} 80 \\ + 2 \\ \hline \end{array}$$



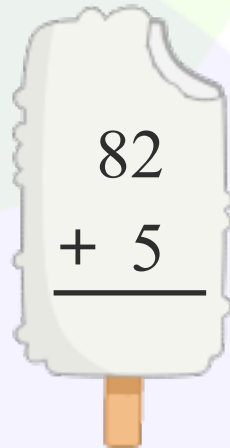
$$\begin{array}{r} 60 \\ + 5 \\ \hline \end{array}$$



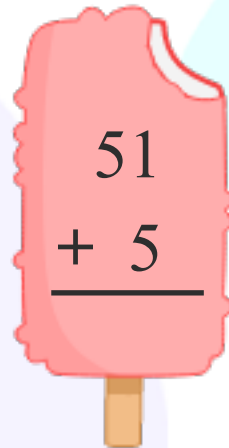
$$\begin{array}{r} 41 \\ + 5 \\ \hline \end{array}$$




$$\begin{array}{r} 20 \\ + 5 \\ \hline \end{array}$$



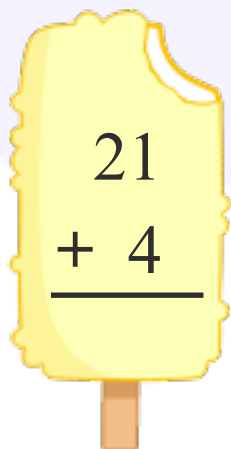
$$\begin{array}{r} 82 \\ + 5 \\ \hline \end{array}$$



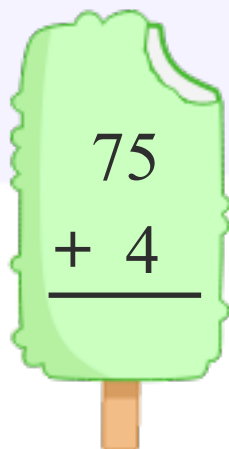
$$\begin{array}{r} 51 \\ + 5 \\ \hline \end{array}$$



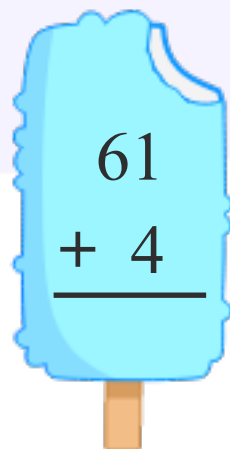
$$\begin{array}{r} 11 \\ + 4 \\ \hline \end{array}$$



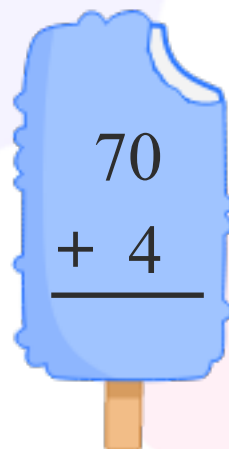
$$\begin{array}{r} 21 \\ + 4 \\ \hline \end{array}$$



$$\begin{array}{r} 75 \\ + 4 \\ \hline \end{array}$$



$$\begin{array}{r} 61 \\ + 4 \\ \hline \end{array}$$



$$\begin{array}{r} 70 \\ + 4 \\ \hline \end{array}$$