



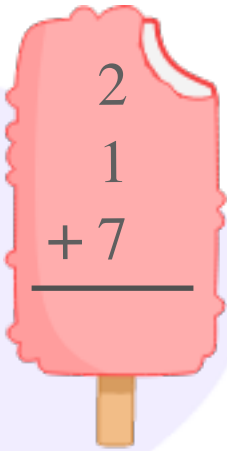
# INFIQ GRADE 1 WORKSHEETS

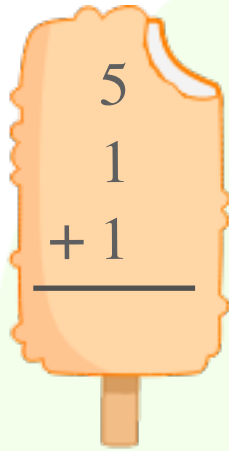
## Advanced Addition - Add Three Numbers

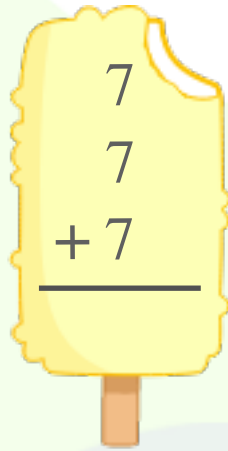
Name \_\_\_\_\_

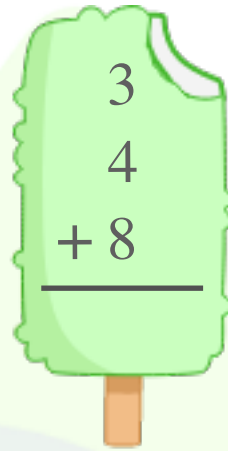
Date \_\_\_\_\_

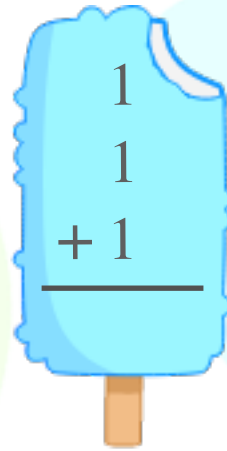
Add the numbers for each group and write the sum.

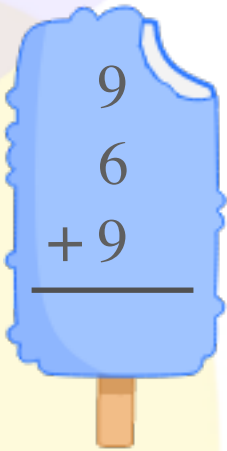

$$\begin{array}{r} 2 \\ 1 \\ +7 \\ \hline \end{array}$$

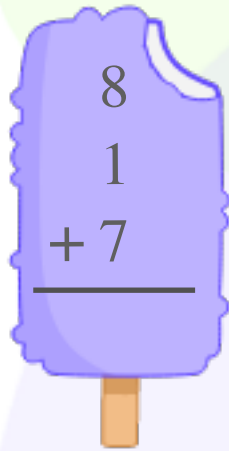

$$\begin{array}{r} 5 \\ 1 \\ +1 \\ \hline \end{array}$$

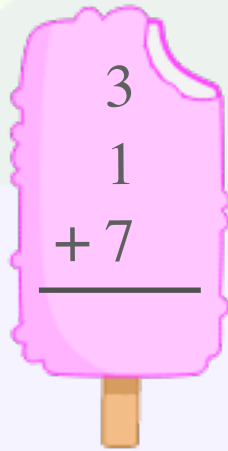

$$\begin{array}{r} 7 \\ 7 \\ +7 \\ \hline \end{array}$$

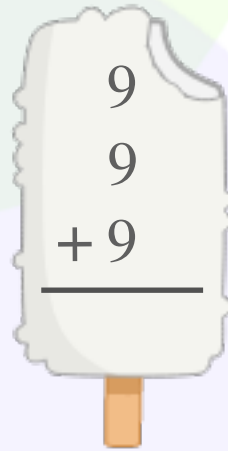

$$\begin{array}{r} 3 \\ 4 \\ +8 \\ \hline \end{array}$$

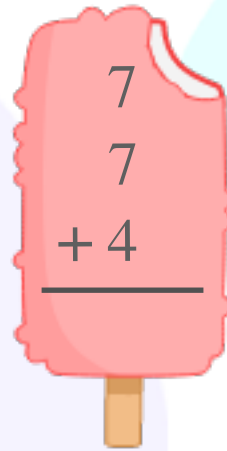

$$\begin{array}{r} 1 \\ 1 \\ +1 \\ \hline \end{array}$$



$$\begin{array}{r} 9 \\ 6 \\ +9 \\ \hline \end{array}$$

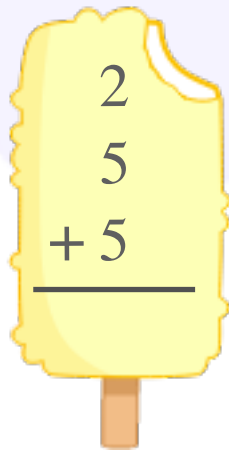

$$\begin{array}{r} 8 \\ 1 \\ +7 \\ \hline \end{array}$$

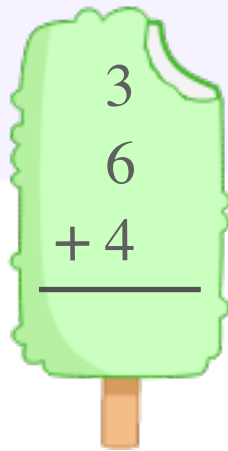

$$\begin{array}{r} 3 \\ 1 \\ +7 \\ \hline \end{array}$$

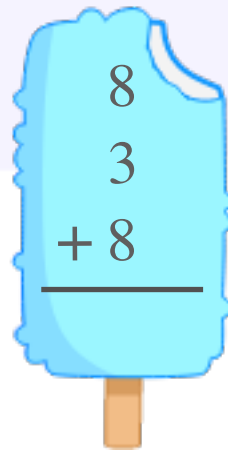

$$\begin{array}{r} 9 \\ 9 \\ +9 \\ \hline \end{array}$$

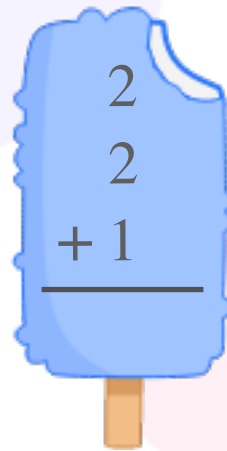

$$\begin{array}{r} 7 \\ 7 \\ +4 \\ \hline \end{array}$$


$$\begin{array}{r} 1 \\ 1 \\ +2 \\ \hline \end{array}$$


$$\begin{array}{r} 2 \\ 5 \\ +5 \\ \hline \end{array}$$


$$\begin{array}{r} 3 \\ 6 \\ +4 \\ \hline \end{array}$$


$$\begin{array}{r} 8 \\ 3 \\ +8 \\ \hline \end{array}$$


$$\begin{array}{r} 2 \\ 2 \\ +1 \\ \hline \end{array}$$

Download the Curriculum-based **INFIQ** Digital Workbook from the App Store for **UNLIMITED QUESTIONS**