

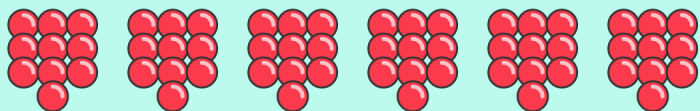


Counting & Number Patterns - Skip Count By 10s

Name _____

Date _____

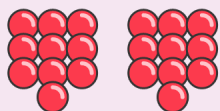
Count by 10s and write how many balls are there in all?



balls



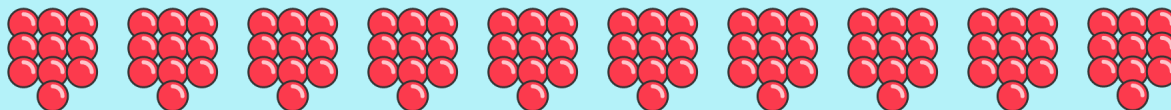
balls



balls



balls



balls



balls