



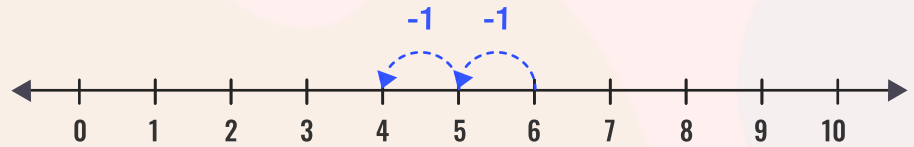
Name _____

Date _____

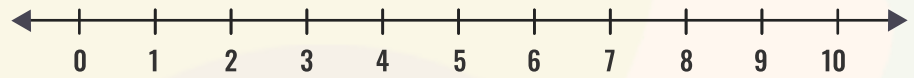
Subtract the numbers by using the number line.

Represent the subtraction on the number line by drawing as in the first example.

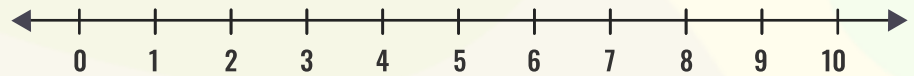
$$6 - 2 = \underline{4}$$



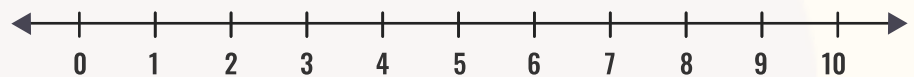
$$5 - 4 = \underline{\quad}$$



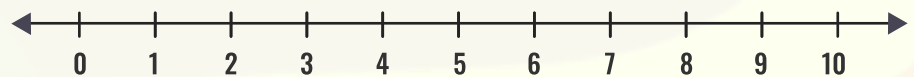
$$10 - 2 = \underline{\quad}$$



$$9 - 2 = \underline{\quad}$$



$$10 - 3 = \underline{\quad}$$



$$5 - 5 = \underline{\quad}$$

