


Subtract Single Digit Numbers - Subtraction Sentences Up To 10

Name \_\_\_\_\_

Date \_\_\_\_\_

**Complete the subtraction sentence**


Count the number of ducks that have not been struck.




$$7 - \underline{\quad} = \underline{\quad}$$




$$\underline{\quad} - 2 = \underline{\quad}$$




$$\underline{\quad} - 4 = \underline{\quad}$$



$$\underline{\quad} - \underline{\quad} = \underline{\quad}$$



$$10 - \underline{\quad} = \underline{\quad}$$



$$\underline{\quad} - \underline{\quad} = \underline{\quad}$$