


Name _____

Date _____

Complete the subtraction sentence

Count the number of dolls that have not been struck.



$\underline{\quad} - 5 = \underline{\quad}$




$\underline{\quad} - 3 = \underline{\quad}$




$\underline{\quad} - \underline{\quad} = \underline{\quad}$



$\underline{\quad} - \underline{\quad} = \underline{\quad}$



$7 - \underline{\quad} = \underline{\quad}$



$3 - \underline{\quad} = \underline{\quad}$