






Name _____

Date _____

Complete the subtraction sentence.




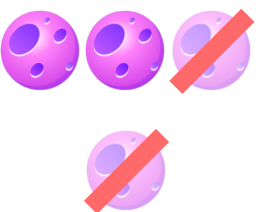
$$\underline{\quad} - \underline{1} = \underline{\quad}$$


$$\underline{\quad} - \underline{2} = \underline{\quad}$$



$$\underline{\quad} - \underline{1} = \underline{\quad}$$


$$\underline{8} - \underline{\quad} = \underline{\quad}$$


$$\underline{9} - \underline{\quad} = \underline{\quad}$$


$$\underline{10} - \underline{\quad} = \underline{\quad}$$


$$\underline{\quad} - \underline{2} = \underline{\quad}$$


$$\underline{5} - \underline{\quad} = \underline{\quad}$$


$$\underline{\quad} - \underline{3} = \underline{\quad}$$