






Name _____


Date _____


Complete the following.



 $8 - 3 = \underline{\quad}$



 $9 - 3 = \underline{\quad}$



 $15 - 3 = \underline{\quad}$


 $18 - 3 = \underline{\quad}$


 $10 - 3 = \underline{\quad}$


 $16 - 3 = \underline{\quad}$


 $17 - 3 = \underline{\quad}$


 $11 - 3 = \underline{\quad}$