






Name _____


Date _____


Complete the following.



 $10 - 4 = \underline{\quad}$



 $8 - 4 = \underline{\quad}$



 $6 - 4 = \underline{\quad}$


 $19 - 4 = \underline{\quad}$


 $18 - 4 = \underline{\quad}$


 $13 - 4 = \underline{\quad}$


 $12 - 4 = \underline{\quad}$


 $16 - 4 = \underline{\quad}$