






Name _____


Date _____


Complete the following.



 $14 - 5 = \underline{\quad}$



 $6 - 5 = \underline{\quad}$



 $11 - 5 = \underline{\quad}$


 $9 - 5 = \underline{\quad}$


 $7 - 5 = \underline{\quad}$


 $18 - 5 = \underline{\quad}$


 $15 - 5 = \underline{\quad}$


 $10 - 5 = \underline{\quad}$