




INFIQ GRADE 1 WORKSHEETS


Subtract Up To 20 - Subtract 7


Name _____


Date _____


Complete the following.



$$20 - 7 = \underline{\quad}$$



$$11 - 7 = \underline{\quad}$$



$$16 - 7 = \underline{\quad}$$


$$14 - 7 = \underline{\quad}$$


$$9 - 7 = \underline{\quad}$$


$$8 - 7 = \underline{\quad}$$


$$15 - 7 = \underline{\quad}$$


$$12 - 7 = \underline{\quad}$$