

Grade 01

DOWNLOAD THE APP FROM THE APP STORE

# MATH WORKBOOK

# INFIQ



DOWNLOAD THE INFIQ APP FOR INFINITE QUIZZES

Because Math Needs Practice

More worksheets at [www.getinfiq.education](http://www.getinfiq.education)

## Subtract up to 20

### Subtract 7

Background filled with various math concepts and formulas:

- $A = L \times b$
- $p = 24 \text{ cm}$
- $f(x)$
- $x/y$
- $\frac{x}{2} = \frac{2}{4}$
- $1 \text{ Mile} = 5,280 \text{ Feet}$
- $(a + b)c = (a + b) + (a + c)$
- $\pi = 3.14$
- $\sqrt{9} = \sqrt{3 \times 3} = 3$
- $a^2 + b^2 = c^2$
- $9678 > 8967 > 7896 > 6789$
- $(a+b)^2 = a^2 + b^2 + 2ab$
- $x = \frac{-b \pm \sqrt{b^2 - 4ac}}{2a}$
- $ax^2 + bx + c = 0$
- $v = \pi r^2 h$
- Area =  $2(1+b)$
- One and Two Tens
- $3 + 2 = 5$



# INFIQ GRADE 1 WORKSHEETS

## Subtract Up To 20 - Subtract 7

Name \_\_\_\_\_

Date \_\_\_\_\_

Find the difference by subtracting 7

| Tens | Ones |
|------|------|
| 1    | 8    |
| -    | 7    |
| —    | —    |

| Tens | Ones |
|------|------|
| 1    | 0    |
| -    | 7    |
| —    | —    |

| Tens | Ones |
|------|------|
| 1    | 9    |
| -    | 7    |
| —    | —    |

| Tens | Ones |
|------|------|
| 1    | 6    |
| -    | 7    |
| —    | —    |

| Tens | Ones |
|------|------|
| 2    | 0    |
| -    | 7    |
| —    | —    |

| Tens | Ones |
|------|------|
| 1    | 5    |
| -    | 7    |
| —    | —    |

Download the Curriculum-based **INFIQ** Digital Workbook from the App Store for **UNLIMITED QUESTIONS**



# INFIQ GRADE 1 WORKSHEETS

## Subtract Up To 20 - Subtract 7

Name \_\_\_\_\_

Date \_\_\_\_\_

Find the difference by subtracting 7

| Tens  | Ones |
|-------|------|
| 1     | 4    |
| -     | 7    |
| _____ |      |

| Tens  | Ones  |
|-------|-------|
| 1     | 9     |
| -     | 7     |
| _____ | _____ |

| Tens  | Ones |
|-------|------|
| 1     | 3    |
| -     | 7    |
| _____ |      |

| Tens  | Ones  |
|-------|-------|
| 1     | 7     |
| -     | 7     |
| _____ | _____ |

| Tens  | Ones  |
|-------|-------|
| 1     | 8     |
| -     | 7     |
| _____ | _____ |

| Tens  | Ones |
|-------|------|
| 1     | 2    |
| -     | 7    |
| _____ |      |

Download the Curriculum-based **INFIQ** Digital Workbook from the App Store for **UNLIMITED QUESTIONS**



# INFIQ GRADE 1 WORKSHEETS

## Subtract Up To 20 - Subtract 7

Name \_\_\_\_\_

Date \_\_\_\_\_

### Subtract 7.

|          |  |   |                                |
|----------|--|---|--------------------------------|
| $13 - 7$ |    | = | <input type="text" value="6"/> |
| $11 - 7$ |    | = | <input type="text"/>           |
| $15 - 7$ |   | = | <input type="text"/>           |
| $16 - 7$ |  | = | <input type="text"/>           |
| $9 - 7$  |  | = | <input type="text"/>           |
| $8 - 7$  |  | = | <input type="text"/>           |
| $10 - 7$ |  | = | <input type="text"/>           |

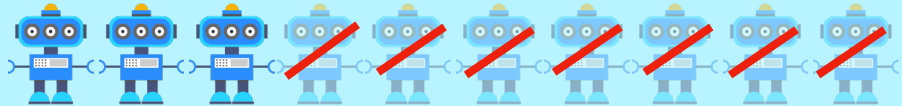






Download the Curriculum-based INFIQ Digital Workbook from the App Store for UNLIMITED QUESTIONS



Name \_\_\_\_\_

Date \_\_\_\_\_

### Subtract 7.

|          |  |   |                                |
|----------|--|---|--------------------------------|
| $10 - 7$ |    | = | <input type="text" value="3"/> |
| $20 - 7$ |    | = | <input type="text"/>           |
| $14 - 7$ |   | = | <input type="text"/>           |
| $8 - 7$  |  | = | <input type="text"/>           |
| $12 - 7$ |  | = | <input type="text"/>           |
| $9 - 7$  |  | = | <input type="text"/>           |
| $11 - 7$ |  | = | <input type="text"/>           |



Name \_\_\_\_\_

Date \_\_\_\_\_

Subtract.

$$\begin{array}{r} 10 \\ - 7 \\ \hline \end{array}$$

$$\begin{array}{r} 17 \\ - 7 \\ \hline \end{array}$$

$$\begin{array}{r} 8 \\ - 7 \\ \hline \end{array}$$

$$\begin{array}{r} 18 \\ - 7 \\ \hline \end{array}$$

$$\begin{array}{r} 16 \\ - 7 \\ \hline \end{array}$$

$$\begin{array}{r} 20 \\ - 7 \\ \hline \end{array}$$

$$\begin{array}{r} 9 \\ - 7 \\ \hline \end{array}$$

$$\begin{array}{r} 11 \\ - 7 \\ \hline \end{array}$$

$$\begin{array}{r} 15 \\ - 7 \\ \hline \end{array}$$



Name \_\_\_\_\_

Date \_\_\_\_\_

**Subtract.**

$$\begin{array}{r} 16 \\ - 7 \\ \hline \end{array}$$

$$\begin{array}{r} 15 \\ - 7 \\ \hline \end{array}$$

$$\begin{array}{r} 20 \\ - 7 \\ \hline \end{array}$$

$$\begin{array}{r} 19 \\ - 7 \\ \hline \end{array}$$

$$\begin{array}{r} 13 \\ - 7 \\ \hline \end{array}$$

$$\begin{array}{r} 11 \\ - 7 \\ \hline \end{array}$$

$$\begin{array}{r} 12 \\ - 7 \\ \hline \end{array}$$

$$\begin{array}{r} 14 \\ - 7 \\ \hline \end{array}$$


$$\begin{array}{r} 18 \\ - 7 \\ \hline \end{array}$$





Name \_\_\_\_\_


Date \_\_\_\_\_


Complete the following.


  
 $20 - 7 = \underline{\quad}$


  
 $11 - 7 = \underline{\quad}$


  
 $16 - 7 = \underline{\quad}$

  
 $14 - 7 = \underline{\quad}$

  
 $9 - 7 = \underline{\quad}$

  
 $8 - 7 = \underline{\quad}$

  
 $15 - 7 = \underline{\quad}$

  
 $12 - 7 = \underline{\quad}$





# INFIQ GRADE 1 WORKSHEETS

## Subtract Up To 20 - Subtract 7

Name \_\_\_\_\_

Date \_\_\_\_\_

Complete the following.

$$8 - 7 = \underline{\quad}$$

$$13 - 7 = \underline{\quad}$$

$$9 - 7 = \underline{\quad}$$

$$11 - 7 = \underline{\quad}$$

$$17 - 7 = \underline{\quad}$$

$$10 - 7 = \underline{\quad}$$

$$20 - 7 = \underline{\quad}$$

$$18 - 7 = \underline{\quad}$$



# INFIQ GRADE 1 WORKSHEETS

## Subtract Up To 20 - Subtract 7

Name \_\_\_\_\_

Date \_\_\_\_\_

Find the difference.

$$\begin{array}{r} 15 \\ - 7 \\ \hline \end{array}$$

$$\begin{array}{r} 18 \\ - 7 \\ \hline \end{array}$$

$$\begin{array}{r} 11 \\ - 7 \\ \hline \end{array}$$

$$\begin{array}{r} 12 \\ - 7 \\ \hline \end{array}$$

$$\begin{array}{r} 19 \\ - 7 \\ \hline \end{array}$$

$$\begin{array}{r} 16 \\ - 7 \\ \hline \end{array}$$

$$\begin{array}{r} 10 \\ - 7 \\ \hline \end{array}$$

$$\begin{array}{r} 8 \\ - 7 \\ \hline \end{array}$$

$$\begin{array}{r} 14 \\ - 7 \\ \hline \end{array}$$

Download the Curriculum-based **INFIQ** Digital Workbook from the App Store for **UNLIMITED QUESTIONS**



# INFIQ GRADE 1 WORKSHEETS

## Subtract Up To 20 - Subtract 7

Name \_\_\_\_\_

Date \_\_\_\_\_

Find the difference.

$$\begin{array}{r} 19 \\ - 7 \\ \hline \end{array}$$

$$\begin{array}{r} 12 \\ - 7 \\ \hline \end{array}$$

$$\begin{array}{r} 14 \\ - 7 \\ \hline \end{array}$$

$$\begin{array}{r} 15 \\ - 7 \\ \hline \end{array}$$

$$\begin{array}{r} 11 \\ - 7 \\ \hline \end{array}$$

$$\begin{array}{r} 18 \\ - 7 \\ \hline \end{array}$$

$$\begin{array}{r} 17 \\ - 7 \\ \hline \end{array}$$

$$\begin{array}{r} 13 \\ - 7 \\ \hline \end{array}$$

$$\begin{array}{r} 16 \\ - 7 \\ \hline \end{array}$$