




Name \_\_\_\_\_

Date \_\_\_\_\_

### Complete the subtraction sentence


Hint: Count the number of dolls that have not been struck.




$$11 - 8 = \underline{\quad}$$




$$13 - 8 = \underline{\quad}$$



$$12 - 8 = \underline{\quad}$$



$$15 - 8 = \underline{\quad}$$



$$16 - 8 = \underline{\quad}$$



$$9 - 8 = \underline{\quad}$$