




INFIQ GRADE 1 WORKSHEETS


Subtract Up To 20 - Subtract 8


Name _____


Date _____


Complete the following.



$$12 - 8 = \underline{\quad}$$



$$15 - 8 = \underline{\quad}$$



$$19 - 8 = \underline{\quad}$$


$$14 - 8 = \underline{\quad}$$


$$10 - 8 = \underline{\quad}$$


$$17 - 8 = \underline{\quad}$$


$$13 - 8 = \underline{\quad}$$


$$11 - 8 = \underline{\quad}$$