

Grade 01

DOWNLOAD THE APP FROM THE APP STORE

MATH WORKBOOK

INFIQ



DOWNLOAD THE INFIQ APP FOR INFINITE QUIZZES

Because Math Needs Practice

More worksheets at www.getinfiq.education

Subtract up to 20

Subtract 8



INFIQ GRADE 1 WORKSHEETS

Subtract Up To 20 - Subtract 8

Name _____

Date _____

Find the difference by subtracting 8.

Tens	Ones
1	0
-	8
—	

Tens	Ones
1	6
-	8
—	

Tens	Ones
1	3
-	8
—	

Tens	Ones
1	5
-	8
—	

Tens	Ones
	9
-	8
—	

Tens	Ones
1	1
-	8
—	

Download the Curriculum-based **INFIQ** Digital Workbook from the App Store for **UNLIMITED QUESTIONS**



Name _____

Date _____

Find the difference by subtracting 8.

Tens	Ones
1	8
-	8
—	—

Tens	Ones
1	7
-	8
—	—

Tens	Ones
1	4
-	8
—	—

Tens	Ones
1	0
-	8
—	—

Tens	Ones
1	9
-	8
—	—

Tens	Ones
1	2
-	8
—	—




Name _____

Date _____

Complete the subtraction sentence

Hint: Count the number of dolls that have not been struck.




$$11 - 8 = \underline{\quad}$$




$$13 - 8 = \underline{\quad}$$



$$12 - 8 = \underline{\quad}$$



$$15 - 8 = \underline{\quad}$$



$$16 - 8 = \underline{\quad}$$



$$9 - 8 = \underline{\quad}$$





Name _____


Date _____


Complete the subtraction sentence

Hint: Count the number of butterflies that have not been struck.

	$\underline{17} - \underline{8} = \underline{\quad}$
--	--

	$\underline{19} - \underline{8} = \underline{\quad}$
---	--

	$\underline{18} - \underline{8} = \underline{\quad}$
--	--

	$\underline{14} - \underline{8} = \underline{\quad}$
--	--



Name _____

Date _____

Subtract.

$$\begin{array}{r} 9 \\ - 8 \\ \hline \end{array}$$

$$\begin{array}{r} 18 \\ - 8 \\ \hline \end{array}$$

$$\begin{array}{r} 11 \\ - 8 \\ \hline \end{array}$$

$$\begin{array}{r} 17 \\ - 8 \\ \hline \end{array}$$

$$\begin{array}{r} 12 \\ - 8 \\ \hline \end{array}$$

$$\begin{array}{r} 16 \\ - 8 \\ \hline \end{array}$$

$$\begin{array}{r} 13 \\ - 8 \\ \hline \end{array}$$

$$\begin{array}{r} 10 \\ - 8 \\ \hline \end{array}$$

$$\begin{array}{r} 19 \\ - 8 \\ \hline \end{array}$$



INFIQ GRADE 1 WORKSHEETS

Subtract Up To 20 - Subtract 8

Name _____

Date _____

Subtract.

$$\begin{array}{r} 14 \\ - 8 \\ \hline \end{array}$$

$$\begin{array}{r} 10 \\ - 8 \\ \hline \end{array}$$

$$\begin{array}{r} 15 \\ - 8 \\ \hline \end{array}$$

$$\begin{array}{r} 11 \\ - 8 \\ \hline \end{array}$$

$$\begin{array}{r} 18 \\ - 8 \\ \hline \end{array}$$

$$\begin{array}{r} 9 \\ - 8 \\ \hline \end{array}$$

$$\begin{array}{r} 17 \\ - 8 \\ \hline \end{array}$$

$$\begin{array}{r} 16 \\ - 8 \\ \hline \end{array}$$

$$\begin{array}{r} 13 \\ - 8 \\ \hline \end{array}$$

Download the Curriculum-based **INFIQ** Digital Workbook from the App Store for **UNLIMITED QUESTIONS**




INFIQ GRADE 1 WORKSHEETS


Subtract Up To 20 - Subtract 8


Name _____


Date _____


Complete the following.



 $12 - 8 = \underline{\quad}$



 $15 - 8 = \underline{\quad}$



 $19 - 8 = \underline{\quad}$


 $14 - 8 = \underline{\quad}$


 $10 - 8 = \underline{\quad}$


 $17 - 8 = \underline{\quad}$


 $13 - 8 = \underline{\quad}$


 $11 - 8 = \underline{\quad}$



INFIQ GRADE 1 WORKSHEETS

Subtract Up To 20 - Subtract 8

Name _____

Date _____

Complete the following.

$$15 - 8 = \underline{\quad}$$

$$19 - 8 = \underline{\quad}$$

$$12 - 8 = \underline{\quad}$$

$$16 - 8 = \underline{\quad}$$

$$9 - 8 = \underline{\quad}$$

$$14 - 8 = \underline{\quad}$$

$$18 - 8 = \underline{\quad}$$

$$10 - 8 = \underline{\quad}$$



INFIQ GRADE 1 WORKSHEETS

Subtract Up To 20 - Subtract 8

Name _____

Date _____

Find the difference.

$$\begin{array}{r} 19 \\ - 8 \\ \hline \end{array}$$

$$\begin{array}{r} 14 \\ - 8 \\ \hline \end{array}$$

$$\begin{array}{r} 10 \\ - 8 \\ \hline \end{array}$$

$$\begin{array}{r} 9 \\ - 8 \\ \hline \end{array}$$

$$\begin{array}{r} 15 \\ - 8 \\ \hline \end{array}$$

$$\begin{array}{r} 11 \\ - 8 \\ \hline \end{array}$$

$$\begin{array}{r} 16 \\ - 8 \\ \hline \end{array}$$

$$\begin{array}{r} 13 \\ - 8 \\ \hline \end{array}$$

$$\begin{array}{r} 18 \\ - 8 \\ \hline \end{array}$$

Download the Curriculum-based **INFIQ** Digital Workbook from the App Store for **UNLIMITED QUESTIONS**



INFIQ GRADE 1 WORKSHEETS

Subtract Up To 20 - Subtract 8

Name _____

Date _____

Find the difference.

$$\begin{array}{r} 10 \\ - 8 \\ \hline \end{array}$$

$$\begin{array}{r} 12 \\ - 8 \\ \hline \end{array}$$

$$\begin{array}{r} 17 \\ - 8 \\ \hline \end{array}$$

$$\begin{array}{r} 16 \\ - 8 \\ \hline \end{array}$$

$$\begin{array}{r} 9 \\ - 8 \\ \hline \end{array}$$

$$\begin{array}{r} 14 \\ - 8 \\ \hline \end{array}$$

$$\begin{array}{r} 11 \\ - 8 \\ \hline \end{array}$$

$$\begin{array}{r} 18 \\ - 8 \\ \hline \end{array}$$

$$\begin{array}{r} 15 \\ - 8 \\ \hline \end{array}$$

Download the Curriculum-based **INFIQ** Digital Workbook from the App Store for **UNLIMITED QUESTIONS**