

Grade 01

DOWNLOAD THE APP FROM THE APP STORE

MATH WORKBOOK

INFIQ



DOWNLOAD THE INFIQ APP FOR INFINITE QUIZZES

Because Math Needs Practice

More worksheets at www.getinfiq.education

Subtract up to 20

Subtract 9

Background filled with various math concepts and formulas:

- $A = L \times b$
- $p = 24 \text{ cm}$
- $f(x)$
- x/y
- $\frac{x}{2} = \frac{2}{4}$
- $1 \text{ Mile} = 5,280 \text{ Feet}$
- $(a + b)c = (a + b) + (a + c)$
- $\pi = 3.14$
- $\sqrt{9} = \sqrt{3 \times 3} = 3$
- $a^2 + b^2 = c^2$
- $9678 > 8967 > 7896 > 6789$
- $(a+b)^2 = a^2 + b^2 + 2ab$
- $x = \frac{-b \pm \sqrt{b^2 - 4ac}}{2a}$
- $ax^2 + bx + c = 0$
- $v = \pi r^2 h$
- $3 + 2 = 5$
- $5x + 5 \sin x$



INFIQ GRADE 1 WORKSHEETS

Subtract Up To 20 - Subtract 9

Name _____

Date _____

Find the difference by subtracting 9

Tens	Ones
1	5
-	9
—	

Tens	Ones
1	3
-	9
—	

Tens	Ones
1	1
-	9
—	

Tens	Ones
1	7
-	9
—	

Tens	Ones
1	8
-	9
—	

Tens	Ones
1	9
-	9
—	—

Download the Curriculum-based **INFIQ** Digital Workbook from the App Store for **UNLIMITED QUESTIONS**



Name _____

Date _____

Find the difference by subtracting 9

Tens	Ones
1	4
-	9
—	

Tens	Ones
1	0
-	9
—	

Tens	Ones
1	5
-	9
—	

Tens	Ones
1	6
-	9
—	

Tens	Ones
2	0
-	9
—	—

Tens	Ones
1	2
-	9
—	



INFIQ GRADE 1 WORKSHEETS

Subtract Up To 20 - Subtract 9

Name _____

Date _____

Subtract 9.

	$18 - 9 = \underline{\quad}$
--	------------------------------

	$17 - 9 = \underline{\quad}$
--	------------------------------

	$14 - 9 = \underline{\quad}$
--	------------------------------

	$11 - 9 = \underline{\quad}$
--	------------------------------


Download the Curriculum-based **INFIQ** Digital Workbook from the App Store for **UNLIMITED QUESTIONS**




Name _____


Date _____

Subtract 9.

	$12 - 9 = \underline{\quad}$
--	------------------------------

	$13 - 9 = \underline{\quad}$
---	------------------------------

	$16 - 9 = \underline{\quad}$
--	------------------------------

	$15 - 9 = \underline{\quad}$
--	------------------------------



Name _____

Date _____

Subtract.

$$\begin{array}{r} 16 \\ - 9 \\ \hline \end{array}$$

$$\begin{array}{r} 17 \\ - 9 \\ \hline \end{array}$$

$$\begin{array}{r} 10 \\ - 9 \\ \hline \end{array}$$

$$\begin{array}{r} 14 \\ - 9 \\ \hline \end{array}$$

$$\begin{array}{r} 12 \\ - 9 \\ \hline \end{array}$$

$$\begin{array}{r} 18 \\ - 9 \\ \hline \end{array}$$

$$\begin{array}{r} 11 \\ - 9 \\ \hline \end{array}$$

$$\begin{array}{r} 19 \\ - 9 \\ \hline \end{array}$$

$$\begin{array}{r} 13 \\ - 9 \\ \hline \end{array}$$



Name _____

Date _____

Subtract.

$$\begin{array}{r} 20 \\ - 9 \\ \hline \end{array}$$

$$\begin{array}{r} 18 \\ - 9 \\ \hline \end{array}$$

$$\begin{array}{r} 14 \\ - 9 \\ \hline \end{array}$$

$$\begin{array}{r} 13 \\ - 9 \\ \hline \end{array}$$

$$\begin{array}{r} 17 \\ - 9 \\ \hline \end{array}$$

$$\begin{array}{r} 10 \\ - 9 \\ \hline \end{array}$$

$$\begin{array}{r} 12 \\ - 9 \\ \hline \end{array}$$

$$\begin{array}{r} 16 \\ - 9 \\ \hline \end{array}$$

$$\begin{array}{r} 19 \\ - 9 \\ \hline \end{array}$$



Name _____

Date _____

Subtract

$11 - 9 =$

$19 - 9 =$

$17 - 9 =$

$12 - 9 =$

$16 - 9 =$

$13 - 9 =$

$18 - 9 =$

$14 - 9 =$

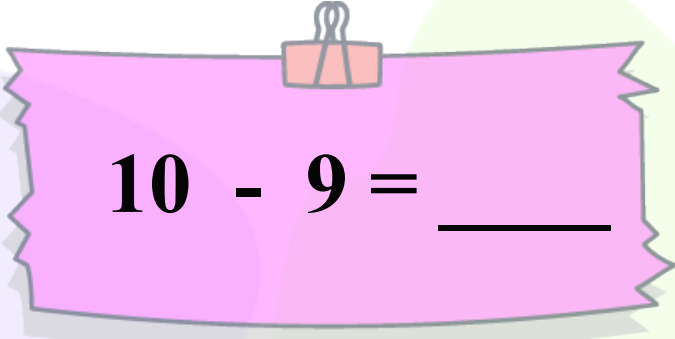
$20 - 9 =$




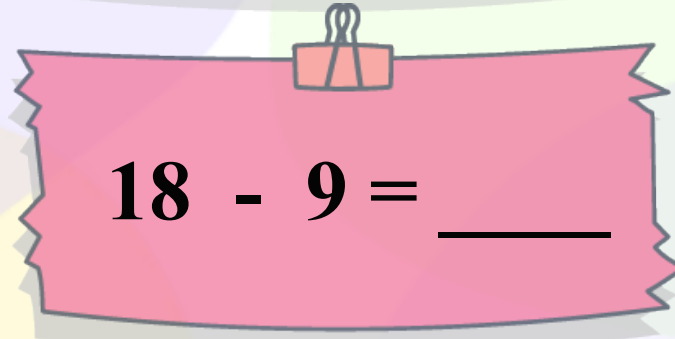
Name _____


Date _____

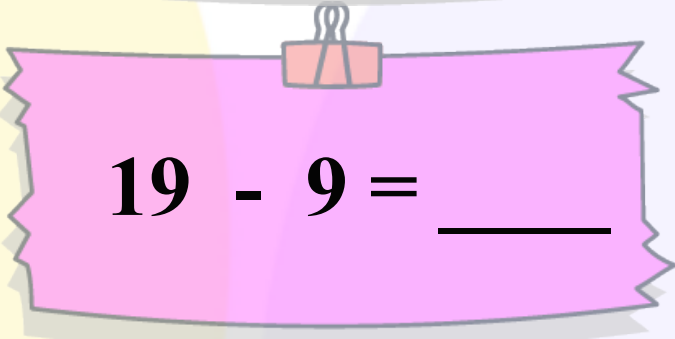
Complete the following.



 $10 - 9 = \underline{\quad}$

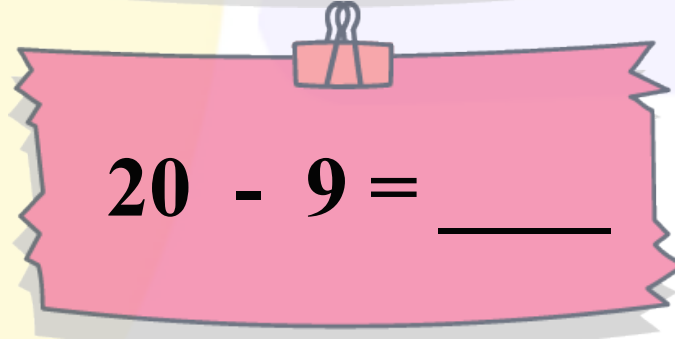

 $14 - 9 = \underline{\quad}$



 $18 - 9 = \underline{\quad}$


 $15 - 9 = \underline{\quad}$


 $19 - 9 = \underline{\quad}$


 $11 - 9 = \underline{\quad}$


 $20 - 9 = \underline{\quad}$


 $13 - 9 = \underline{\quad}$



Name _____

Date _____

Find the difference.

$$\begin{array}{r} 19 \\ - 9 \\ \hline \end{array}$$

$$\begin{array}{r} 15 \\ - 9 \\ \hline \end{array}$$

$$\begin{array}{r} 20 \\ - 9 \\ \hline \end{array}$$

$$\begin{array}{r} 18 \\ - 9 \\ \hline \end{array}$$

$$\begin{array}{r} 13 \\ - 9 \\ \hline \end{array}$$

$$\begin{array}{r} 14 \\ - 9 \\ \hline \end{array}$$

$$\begin{array}{r} 10 \\ - 9 \\ \hline \end{array}$$

$$\begin{array}{r} 11 \\ - 9 \\ \hline \end{array}$$

$$\begin{array}{r} 16 \\ - 9 \\ \hline \end{array}$$



Name _____

Date _____

Find the difference.

$$\begin{array}{r} 17 \\ - 9 \\ \hline \end{array}$$

$$\begin{array}{r} 12 \\ - 9 \\ \hline \end{array}$$

$$\begin{array}{r} 19 \\ - 9 \\ \hline \end{array}$$

$$\begin{array}{r} 10 \\ - 9 \\ \hline \end{array}$$

$$\begin{array}{r} 11 \\ - 9 \\ \hline \end{array}$$

$$\begin{array}{r} 15 \\ - 9 \\ \hline \end{array}$$

$$\begin{array}{r} 13 \\ - 9 \\ \hline \end{array}$$

$$\begin{array}{r} 16 \\ - 9 \\ \hline \end{array}$$

$$\begin{array}{r} 18 \\ - 9 \\ \hline \end{array}$$