



INFIQ GRADE 1 WORKSHEETS

Add Single Digit Numbers - Add 0

Name _____

Date _____

How many carrots?

The first group shows the example that has been solved for you.

Example



+



$$\underline{8} + \underline{0} = \underline{8}$$



+




$$\underline{\quad} + \underline{\quad} = \underline{\quad}$$




+



$$\underline{\quad} + \underline{\quad} = \underline{\quad}$$



+




$$\underline{\quad} + \underline{\quad} = \underline{\quad}$$




+



$$\underline{\quad} + \underline{\quad} = \underline{\quad}$$



+



$$\underline{\quad} + \underline{\quad} = \underline{\quad}$$