



Because Math Needs Practice

**INFIQ**  
Infinite Quizzes



Also available,  
Comprehensive  
Digital Math Workbook  
For Grades 1-5



A lot more curriculum-based worksheets at [www.infiq.education](http://www.infiq.education)

# Grade 01

# Add Single Digit Numbers

Add 0



# INFIQ GRADE 1 WORKSHEETS








## Add Single Digit Numbers - Add 0

Name \_\_\_\_\_

Date \_\_\_\_\_

### How many cupcakes?

The first group shows the example that has been solved for you.

	+	<input type="text"/>	=	<input type="text" value="5"/>
	+	<input type="text"/>	=	<input type="text"/>
<input type="text"/>	+		=	<input type="text"/>
	+	<input type="text"/>	=	<input type="text"/>
	+	<input type="text"/>	=	<input type="text"/>
<input type="text"/>	+		=	<input type="text"/>
	+	<input type="text"/>	=	<input type="text"/>

Download the Curriculum-based **INFIQ** Digital Workbook from the App Store for **UNLIMITED QUESTIONS**



# INFIQ GRADE 1 WORKSHEETS






















## Add Single Digit Numbers - Add 0

Name \_\_\_\_\_

Date \_\_\_\_\_

### How many cars?

The first group shows the example that has been solved for you.

	+		=	
	+		=	
	+		=	
	+		=	
	+		=	
	+		=	
	+		=	

Download the Curriculum-based **INFIQ** Digital Workbook from the App Store for **UNLIMITED QUESTIONS**



# INFIQ GRADE 1 WORKSHEETS








## Add Single Digit Numbers - Add 0

Name \_\_\_\_\_

Date \_\_\_\_\_

### How many donuts?

The first group shows the example that has been solved for you.

	+	<input type="text"/>	=	<input type="text" value="4"/>
<input type="text"/>	+		=	<input type="text"/>
<input type="text"/>	+		=	<input type="text"/>
	+	<input type="text"/>	=	<input type="text"/>
<input type="text"/>	+		=	<input type="text"/>
	+	<input type="text"/>	=	<input type="text"/>
	+	<input type="text"/>	=	<input type="text"/>

Download the Curriculum-based **INFIQ** Digital Workbook from the App Store for **UNLIMITED QUESTIONS**



# INFIQ GRADE 1 WORKSHEETS

## Add Single Digit Numbers - Add 0


Name \_\_\_\_\_

Date \_\_\_\_\_

### How many trees?

The first group shows the example that has been solved for you.

Example




+



$$\underline{7} + \underline{0} = \underline{7}$$



+



$$\underline{\quad} + \underline{\quad} = \underline{\quad}$$



+



$$\underline{\quad} + \underline{\quad} = \underline{\quad}$$



+




$$\underline{\quad} + \underline{\quad} = \underline{\quad}$$



+



$$\underline{\quad} + \underline{\quad} = \underline{\quad}$$



+



$$\underline{\quad} + \underline{\quad} = \underline{\quad}$$

Download the Curriculum-based **INFIQ** Digital Workbook from the App Store for **UNLIMITED QUESTIONS**



# INFIQ GRADE 1 WORKSHEETS

## Add Single Digit Numbers - Add 0

Name \_\_\_\_\_

Date \_\_\_\_\_

### How many carrots?

The first group shows the example that has been solved for you.

Example



+



$$\underline{8} + \underline{0} = \underline{8}$$



+




$$\underline{\quad} + \underline{\quad} = \underline{\quad}$$




+



$$\underline{\quad} + \underline{\quad} = \underline{\quad}$$



+




$$\underline{\quad} + \underline{\quad} = \underline{\quad}$$



+



$$\underline{\quad} + \underline{\quad} = \underline{\quad}$$



+



$$\underline{\quad} + \underline{\quad} = \underline{\quad}$$

Download the Curriculum-based **INFIQ** Digital Workbook from the App Store for **UNLIMITED QUESTIONS**



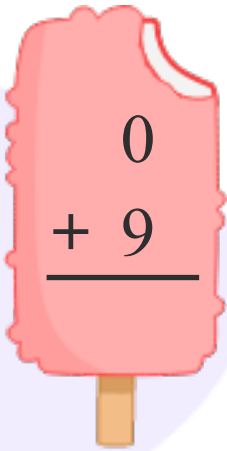
# INFIQ GRADE 1 WORKSHEETS

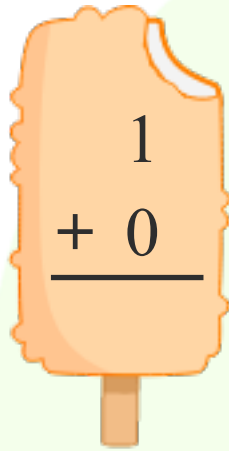
## Add Single Digit Numbers - Add 0

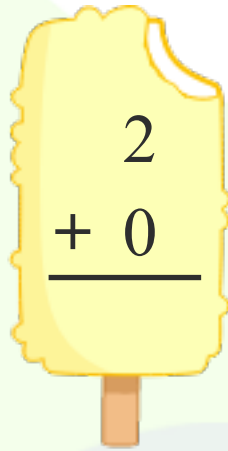
Name \_\_\_\_\_

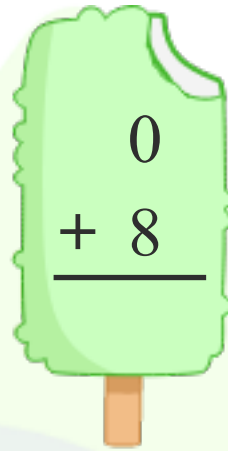
Date \_\_\_\_\_

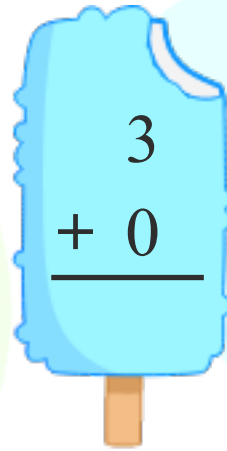
Add 0 to find the sum.

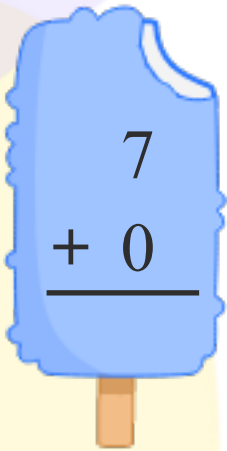

$$\begin{array}{r} 0 \\ + 9 \\ \hline \end{array}$$

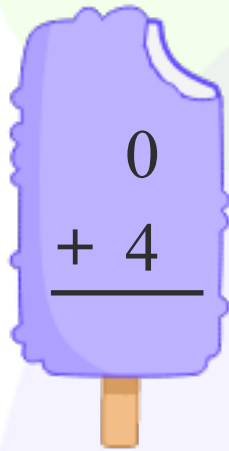

$$\begin{array}{r} 1 \\ + 0 \\ \hline \end{array}$$

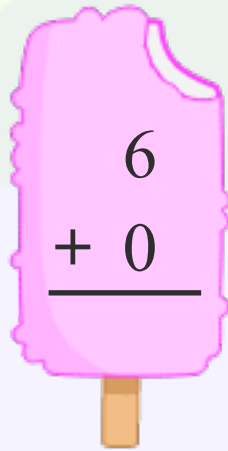

$$\begin{array}{r} 2 \\ + 0 \\ \hline \end{array}$$

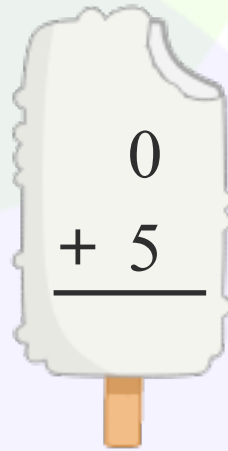

$$\begin{array}{r} 0 \\ + 8 \\ \hline \end{array}$$

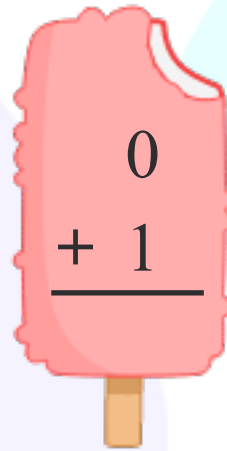

$$\begin{array}{r} 3 \\ + 0 \\ \hline \end{array}$$

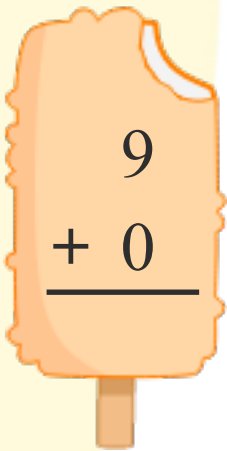

$$\begin{array}{r} 7 \\ + 0 \\ \hline \end{array}$$

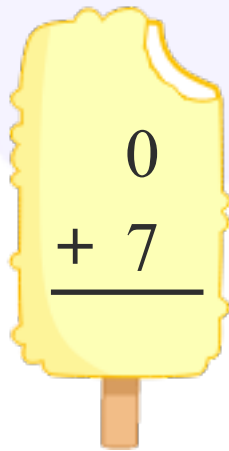

$$\begin{array}{r} 0 \\ + 4 \\ \hline \end{array}$$

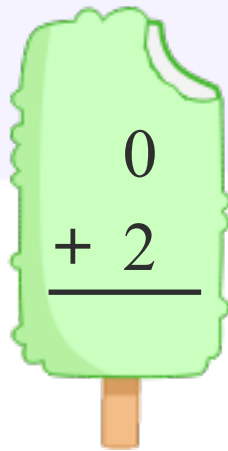

$$\begin{array}{r} 6 \\ + 0 \\ \hline \end{array}$$

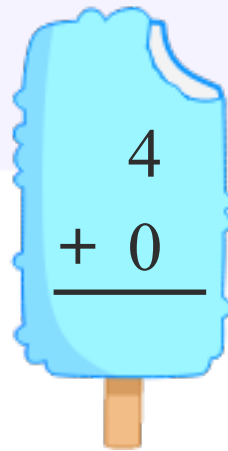

$$\begin{array}{r} 0 \\ + 5 \\ \hline \end{array}$$

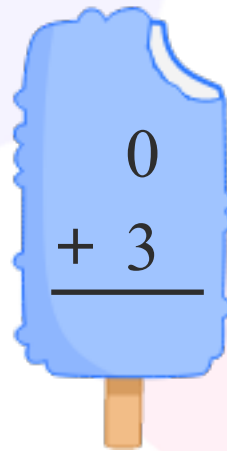

$$\begin{array}{r} 0 \\ + 1 \\ \hline \end{array}$$


$$\begin{array}{r} 9 \\ + 0 \\ \hline \end{array}$$


$$\begin{array}{r} 0 \\ + 7 \\ \hline \end{array}$$


$$\begin{array}{r} 0 \\ + 2 \\ \hline \end{array}$$


$$\begin{array}{r} 4 \\ + 0 \\ \hline \end{array}$$


$$\begin{array}{r} 0 \\ + 3 \\ \hline \end{array}$$

Download the Curriculum-based INFIQ Digital Workbook from the App Store for UNLIMITED QUESTIONS



# INFIQ GRADE 1 WORKSHEETS

## Add Single Digit Numbers - Add 0

Name \_\_\_\_\_

Date \_\_\_\_\_

Add 0 to a number.

$4 + 0 = \square$

$0 + 5 = \square$

$3 + 0 = \square$

$0 + 9 = \square$

$8 + 0 = \square$

$0 + 2 = \square$

$0 + 7 = \square$

$1 + 0 = \square$

$6 + 0 = \square$

$0 + 8 = \square$

Download the Curriculum-based **INFIQ** Digital Workbook from the App Store for **UNLIMITED QUESTIONS**





# INFIQ GRADE 1 WORKSHEETS

## Add Single Digit Numbers - Add 0

Name \_\_\_\_\_

Date \_\_\_\_\_

Add 0 to a number.

$$\begin{array}{r} 0 \\ +1 \\ \hline \end{array}$$

$$\begin{array}{r} 2 \\ +0 \\ \hline \end{array}$$

$$\begin{array}{r} 4 \\ +0 \\ \hline \end{array}$$

$$\begin{array}{r} 0 \\ +8 \\ \hline \end{array}$$

$$\begin{array}{r} 0 \\ +2 \\ \hline \end{array}$$

$$\begin{array}{r} 7 \\ +0 \\ \hline \end{array}$$

$$\begin{array}{r} 0 \\ +4 \\ \hline \end{array}$$

$$\begin{array}{r} 0 \\ +6 \\ \hline \end{array}$$

$$\begin{array}{r} 5 \\ +0 \\ \hline \end{array}$$

$$\begin{array}{r} 3 \\ +0 \\ \hline \end{array}$$

$$\begin{array}{r} 9 \\ +0 \\ \hline \end{array}$$

$$\begin{array}{r} 1 \\ +0 \\ \hline \end{array}$$

Download the Curriculum-based INFIQ Digital Workbook from the App Store for UNLIMITED QUESTIONS



# INFIQ GRADE 1 WORKSHEETS

## Add Single Digit Numbers - Add 0

Name \_\_\_\_\_

Date \_\_\_\_\_

Add the numbers and write the sum.

$$\begin{array}{r} 0 \\ + 4 \\ \hline \end{array}$$

$$\begin{array}{r} 3 \\ + 0 \\ \hline \end{array}$$

$$\begin{array}{r} 0 \\ + 2 \\ \hline \end{array}$$

$$\begin{array}{r} 1 \\ + 0 \\ \hline \end{array}$$

$$\begin{array}{r} 7 \\ + 0 \\ \hline \end{array}$$

$$\begin{array}{r} 5 \\ + 0 \\ \hline \end{array}$$

$$\begin{array}{r} 4 \\ + 0 \\ \hline \end{array}$$

$$\begin{array}{r} 6 \\ + 0 \\ \hline \end{array}$$

$$\begin{array}{r} 8 \\ + 0 \\ \hline \end{array}$$

$$\begin{array}{r} 9 \\ + 0 \\ \hline \end{array}$$

$$\begin{array}{r} 4 \\ + 0 \\ \hline \end{array}$$

$$\begin{array}{r} 2 \\ + 0 \\ \hline \end{array}$$

Download the Curriculum-based **INFIQ** Digital Workbook from the App Store for **UNLIMITED QUESTIONS**



# INFIQ GRADE 1 WORKSHEETS

## Add Single Digit Numbers - Add 0

Name \_\_\_\_\_

Date \_\_\_\_\_

Add 0 to a number.

$$\begin{array}{r} 9 \\ + 0 \\ \hline \\ \hline \end{array}$$

$$\begin{array}{r} 0 \\ + 7 \\ \hline \\ \hline \end{array}$$

$$\begin{array}{r} 5 \\ + 0 \\ \hline \\ \hline \end{array}$$

$$\begin{array}{r} 0 \\ + 3 \\ \hline \\ \hline \end{array}$$

$$\begin{array}{r} 3 \\ + 0 \\ \hline \\ \hline \end{array}$$

$$\begin{array}{r} 4 \\ + 0 \\ \hline \\ \hline \end{array}$$

$$\begin{array}{r} 2 \\ + 0 \\ \hline \\ \hline \end{array}$$

$$\begin{array}{r} 6 \\ + 0 \\ \hline \\ \hline \end{array}$$

$$\begin{array}{r} 0 \\ + 1 \\ \hline \\ \hline \end{array}$$

$$\begin{array}{r} 0 \\ + 8 \\ \hline \\ \hline \end{array}$$

$$\begin{array}{r} 0 \\ + 4 \\ \hline \\ \hline \end{array}$$

$$\begin{array}{r} 0 \\ + 2 \\ \hline \\ \hline \end{array}$$

Download the Curriculum-based **INFIQ** Digital Workbook from the App Store for **UNLIMITED QUESTIONS**