

INFIQ GRADE 1 WORKSHEETS

Add Single Digit Numbers - Add 1

Name _____

Date _____

How many butterflies?

Count the number of butterflies for each group and write the sum.




1




$$\underline{\quad} + \underline{\quad} = \underline{\quad}$$

2



$$\underline{\quad} + \underline{\quad} = \underline{\quad}$$

3




$$\underline{\quad} + \underline{\quad} = \underline{\quad}$$

4




$$\underline{\quad} + \underline{\quad} = \underline{\quad}$$

5



$$\underline{\quad} + \underline{\quad} = \underline{\quad}$$

6



$$\underline{\quad} + \underline{\quad} = \underline{\quad}$$

Download the Curriculum-based **INFIQ** Digital Workbook from the App Store for **UNLIMITED QUESTIONS**