



Because Math Needs Practice

INFIQ
Infinite Quizzes



Also available,
Comprehensive
Digital Math Workbook
For Grades 1-5



A lot more curriculum-based worksheets at www.infiq.education

Grade 01

Add Single Digit Numbers

Add 1





INFIQ GRADE 1 WORKSHEETS


Add Single Digit Numbers - Add 1



Name _____



Date _____



How many teddy bears? (Count the number of teddy bears for each group for the sum)



 +  _____ + _____ = _____



 +  _____ + _____ = _____

 +  _____ + _____ = _____

 +  _____ + _____ = _____

 +  _____ + _____ = _____

 +  _____ + _____ = _____

 +  _____ + _____ = _____

Download the Curriculum-based **INFIQ** Digital Workbook from the App Store for **UNLIMITED QUESTIONS**

INFIQ GRADE 1 WORKSHEETS

Add Single Digit Numbers - Add 1


Name _____

Date _____

How many butterflies?


Count the number of butterflies for each group and write the sum.

1




$$\underline{\quad} + \underline{\quad} = \underline{\quad}$$

2



$$\underline{\quad} + \underline{\quad} = \underline{\quad}$$

3




$$\underline{\quad} + \underline{\quad} = \underline{\quad}$$

4




$$\underline{\quad} + \underline{\quad} = \underline{\quad}$$

5



$$\underline{\quad} + \underline{\quad} = \underline{\quad}$$

6



$$\underline{\quad} + \underline{\quad} = \underline{\quad}$$



INFIQ GRADE 1 WORKSHEETS

Add Single Digit Numbers - Add 1

Name _____

Date _____

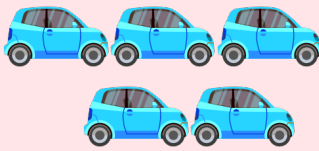
How many cars? (Count the number of cars for each group and write the sum)



+



_____ + _____ = _____



+



_____ + _____ = _____



+



_____ + _____ = _____



+



_____ + _____ = _____



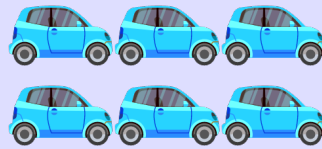
+



_____ + _____ = _____



+



_____ + _____ = _____



+



_____ + _____ = _____

Download the Curriculum-based **INFIQ** Digital Workbook from the App Store for **UNLIMITED QUESTIONS**



INFIQ GRADE 1 WORKSHEETS

Add Single Digit Numbers - Add 1


Name _____

Date _____

How many balloons?


Count the number of balloons in each group and write the sum.

1




_____ + _____ =

2




_____ + _____ =

3




_____ + _____ =

4




_____ + _____ =

5



_____ + _____ =

6



_____ + _____ =

Download the Curriculum-based **INFIQ** Digital Workbook from the App Store for **UNLIMITED QUESTIONS**



INFIQ GRADE 1 WORKSHEETS


Add Single Digit Numbers - Add 1

Name _____


Date _____

Complete the addition sentence


Count the number of fruits in each group and complete the addition sentence.




$$\underline{\quad} + \underline{\quad} = \underline{\quad}$$



$$\underline{\quad} + \underline{\quad} = \underline{\quad}$$




$$\underline{\quad} + \underline{\quad} = \underline{\quad}$$



$$\underline{\quad} + \underline{\quad} = \underline{\quad}$$



$$\underline{\quad} + \underline{\quad} = \underline{\quad}$$



$$\underline{\quad} + \underline{\quad} = \underline{\quad}$$

Download the Curriculum-based **INFIQ** Digital Workbook from the App Store for **UNLIMITED QUESTIONS**



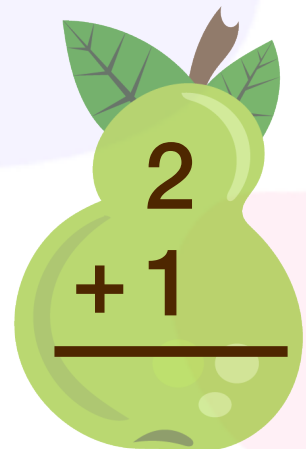





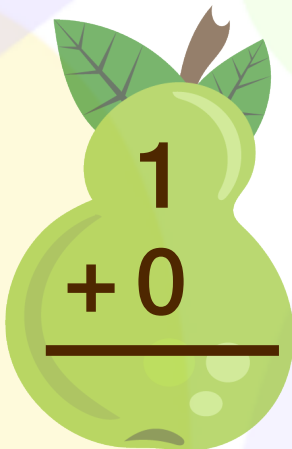

INFIQ GRADE 1 WORKSHEETS

Add Single Digit Numbers - Add 1

Name _____

Date _____

Add your pears.



Download the Curriculum-based **INFIQ** Digital Workbook from the App Store for **UNLIMITED QUESTIONS**



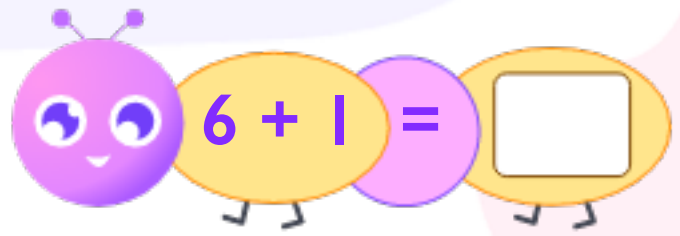
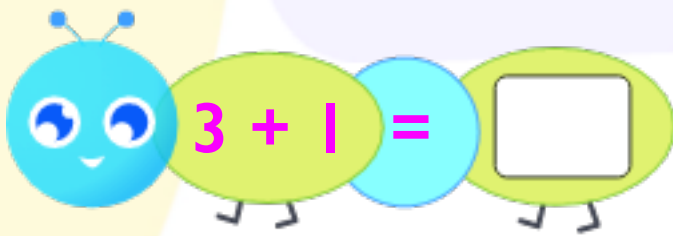
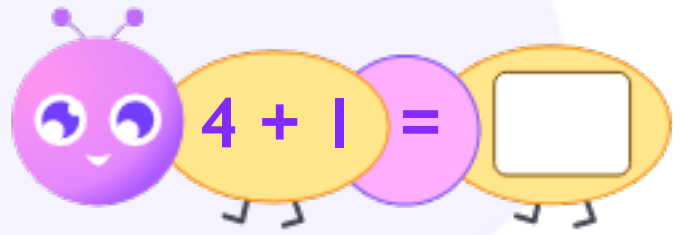
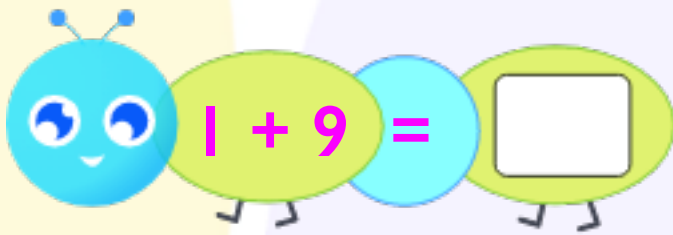
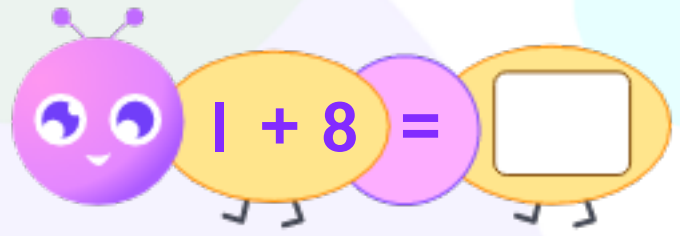
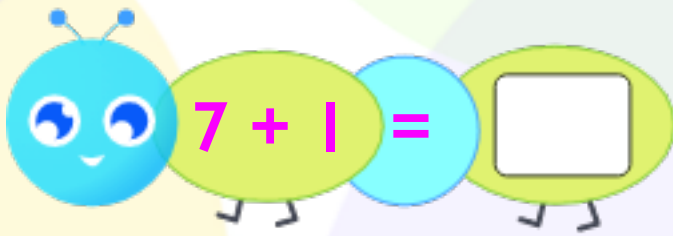
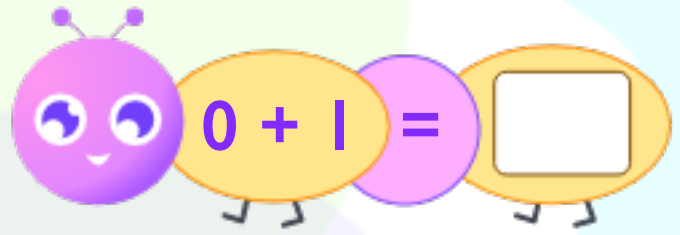
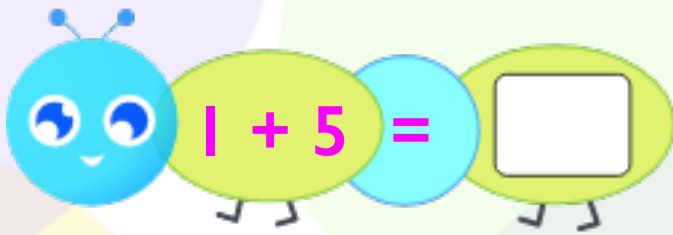
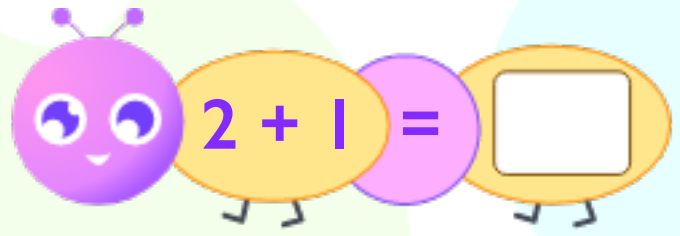
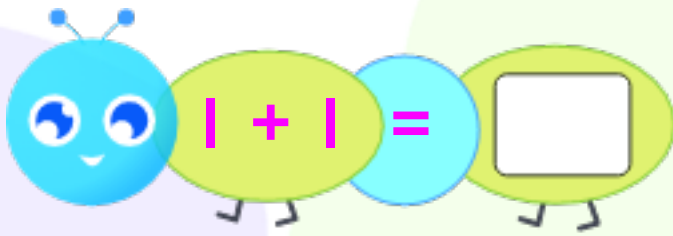
INFIQ GRADE 1 WORKSHEETS

Add Single Digit Numbers - Add 1

Name _____

Date _____

Add **1** to a number.





INFIQ GRADE 1 WORKSHEETS

Add Single Digit Numbers - Add 1

Name _____

Date _____

Add the numbers and write the sum.

$$\begin{array}{r} 4 \\ + 1 \\ \hline \end{array}$$

$$\begin{array}{r} 5 \\ + 1 \\ \hline \end{array}$$

$$\begin{array}{r} 1 \\ + 0 \\ \hline \end{array}$$

$$\begin{array}{r} 3 \\ + 1 \\ \hline \end{array}$$

$$\begin{array}{r} 1 \\ + 2 \\ \hline \end{array}$$

$$\begin{array}{r} 1 \\ + 7 \\ \hline \end{array}$$

$$\begin{array}{r} 1 \\ + 1 \\ \hline \end{array}$$

$$\begin{array}{r} 8 \\ + 1 \\ \hline \end{array}$$

$$\begin{array}{r} 9 \\ + 1 \\ \hline \end{array}$$

$$\begin{array}{r} 0 \\ + 1 \\ \hline \end{array}$$

$$\begin{array}{r} 2 \\ + 1 \\ \hline \end{array}$$

$$\begin{array}{r} 1 \\ + 4 \\ \hline \end{array}$$



INFIQ GRADE 1 WORKSHEETS

Add Single Digit Numbers - Add 1

Name _____

Date _____

Add **1** to a number.

$$\begin{array}{r} 1 \\ +2 \\ \hline \end{array}$$

$$\begin{array}{r} 3 \\ +1 \\ \hline \end{array}$$

$$\begin{array}{r} 6 \\ +1 \\ \hline \end{array}$$

$$\begin{array}{r} 1 \\ +1 \\ \hline \end{array}$$

$$\begin{array}{r} 4 \\ +1 \\ \hline \end{array}$$

$$\begin{array}{r} 5 \\ +1 \\ \hline \end{array}$$

$$\begin{array}{r} 1 \\ +7 \\ \hline \end{array}$$

$$\begin{array}{r} 2 \\ +1 \\ \hline \end{array}$$

$$\begin{array}{r} 0 \\ +1 \\ \hline \end{array}$$

$$\begin{array}{r} 8 \\ +1 \\ \hline \end{array}$$

$$\begin{array}{r} 1 \\ +3 \\ \hline \end{array}$$

$$\begin{array}{r} 9 \\ +1 \\ \hline \end{array}$$

Download the Curriculum-based **INFIQ** Digital Workbook from the App Store for **UNLIMITED QUESTIONS**



INFIQ GRADE 1 WORKSHEETS

Add Single Digit Numbers - Add 1

Name _____

Date _____

Add 1 to a number

$$\begin{array}{r} 1 \\ + 7 \\ \hline \\ \hline \end{array}$$

$$\begin{array}{r} 1 \\ + 0 \\ \hline \\ \hline \end{array}$$

$$\begin{array}{r} 1 \\ + 3 \\ \hline \\ \hline \end{array}$$

$$\begin{array}{r} 2 \\ + 1 \\ \hline \\ \hline \end{array}$$

$$\begin{array}{r} 1 \\ + 1 \\ \hline \\ \hline \end{array}$$

$$\begin{array}{r} 6 \\ + 1 \\ \hline \\ \hline \end{array}$$

$$\begin{array}{r} 1 \\ + 9 \\ \hline \\ \hline \end{array}$$

$$\begin{array}{r} 3 \\ + 1 \\ \hline \\ \hline \end{array}$$

$$\begin{array}{r} 1 \\ + 8 \\ \hline \\ \hline \end{array}$$

$$\begin{array}{r} 1 \\ + 4 \\ \hline \\ \hline \end{array}$$

$$\begin{array}{r} 2 \\ + 1 \\ \hline \\ \hline \end{array}$$

$$\begin{array}{r} 1 \\ + 5 \\ \hline \\ \hline \end{array}$$

Download the Curriculum-based **INFIQ** Digital Workbook from the App Store for **UNLIMITED QUESTIONS**