



# INFIQ GRADE 1 WORKSHEETS














## Add Single Digit Numbers - Add 2

Name \_\_\_\_\_

Date \_\_\_\_\_

### Find the total number of cupcakes

Count the number of cupcakes for each addition statement and write the sum.

	+		=	<input type="text"/>
	+		=	<input type="text"/>
	+		=	<input type="text"/>
	+		=	<input type="text"/>
	+		=	<input type="text"/>
	+		=	<input type="text"/>
	+		=	<input type="text"/>

Download the Curriculum-based **INFIQ** Digital Workbook from the App Store for **UNLIMITED QUESTIONS**