



Because Math Needs Practice

**INFIQ**  
Infinite Quizzes



Also available,  
Comprehensive  
Digital Math Workbook  
For Grades 1-5



A lot more curriculum-based worksheets at [www.infiq.education](http://www.infiq.education)

# Grade 01

# Add Single Digit Numbers

## Add 2



# INFIQ GRADE 1 WORKSHEETS















## Add Single Digit Numbers - Add 2

Name \_\_\_\_\_

Date \_\_\_\_\_

### Find the total number of cupcakes

Count the number of cupcakes for each addition statement and write the sum.

	+		=	<input type="text"/>
	+		=	<input type="text"/>
	+		=	<input type="text"/>
	+		=	<input type="text"/>
	+		=	<input type="text"/>
	+		=	<input type="text"/>
	+		=	<input type="text"/>

Download the Curriculum-based **INFIQ** Digital Workbook from the App Store for **UNLIMITED QUESTIONS**



# INFIQ GRADE 1 WORKSHEETS

## Add Single Digit Numbers - Add 2


Name \_\_\_\_\_

Date \_\_\_\_\_

### Add to find the total number of starfish


Count the number of starfish in each group and write the sum.

1




\_\_\_\_\_ + \_\_\_\_\_ =

2




\_\_\_\_\_ + \_\_\_\_\_ =

3




\_\_\_\_\_ + \_\_\_\_\_ =

4




\_\_\_\_\_ + \_\_\_\_\_ =

5



\_\_\_\_\_ + \_\_\_\_\_ =

6



\_\_\_\_\_ + \_\_\_\_\_ =

Download the Curriculum-based **INFIQ** Digital Workbook from the App Store for **UNLIMITED QUESTIONS**



# INFIQ GRADE 1 WORKSHEETS

## Add Single Digit Numbers - Add 2

Name \_\_\_\_\_

Date \_\_\_\_\_

### Complete the addition sentence

Count the number of owls in each group and complete the addition sentence.



$$\underline{\quad} + \underline{\quad} = \underline{\quad}$$



$$\underline{\quad} + \underline{\quad} = \underline{\quad}$$



$$\underline{\quad} + \underline{\quad} = \underline{\quad}$$



$$\underline{\quad} + \underline{\quad} = \underline{\quad}$$



$$\underline{\quad} + \underline{\quad} = \underline{\quad}$$



$$\underline{\quad} + \underline{\quad} = \underline{\quad}$$

Download the Curriculum-based **INFIQ** Digital Workbook from the App Store for **UNLIMITED QUESTIONS**



# INFIQ GRADE 1 WORKSHEETS

## Add Single Digit Numbers - Add 2


Name \_\_\_\_\_

Date \_\_\_\_\_

### Find the total number of umbrellas


Count the number of umbrellas in each group and write the sum.

1




\_\_\_\_\_ + \_\_\_\_\_ =

2




\_\_\_\_\_ + \_\_\_\_\_ =

3




\_\_\_\_\_ + \_\_\_\_\_ =

4




\_\_\_\_\_ + \_\_\_\_\_ =

5



\_\_\_\_\_ + \_\_\_\_\_ =

6



\_\_\_\_\_ + \_\_\_\_\_ =

Download the Curriculum-based **INFIQ** Digital Workbook from the App Store for **UNLIMITED QUESTIONS**



# INFIQ GRADE 1 WORKSHEETS


## Add Single Digit Numbers - Add 2

Name \_\_\_\_\_


Date \_\_\_\_\_

### Complete the addition sentence


Count the number of trees in each group and complete the addition sentence.




\_\_\_\_\_ + \_\_\_\_\_ = \_\_\_\_\_




\_\_\_\_\_ + \_\_\_\_\_ = \_\_\_\_\_




\_\_\_\_\_ + \_\_\_\_\_ = \_\_\_\_\_



\_\_\_\_\_ + \_\_\_\_\_ = \_\_\_\_\_



\_\_\_\_\_ + \_\_\_\_\_ = \_\_\_\_\_



\_\_\_\_\_ + \_\_\_\_\_ = \_\_\_\_\_

Download the Curriculum-based **INFIQ** Digital Workbook from the App Store for **UNLIMITED QUESTIONS**



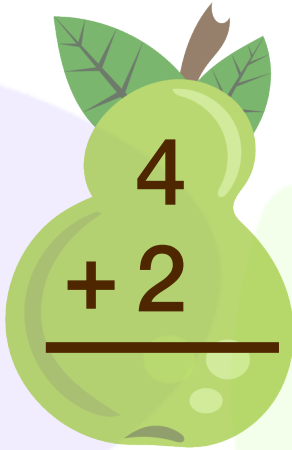
# INFIQ GRADE 1 WORKSHEETS


## Add Single Digit Numbers - Add 2


Name \_\_\_\_\_

Date \_\_\_\_\_

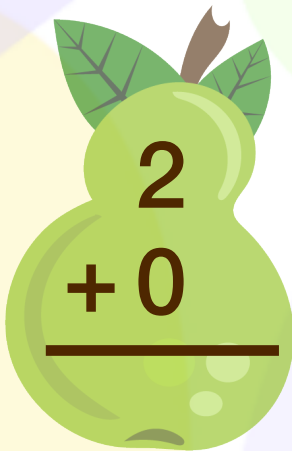
Find the sum



$$\begin{array}{r} 4 \\ + 2 \\ \hline \end{array}$$



$$\begin{array}{r} 3 \\ + 2 \\ \hline \end{array}$$



$$\begin{array}{r} 2 \\ + 2 \\ \hline \end{array}$$



$$\begin{array}{r} 1 \\ + 2 \\ \hline \end{array}$$



$$\begin{array}{r} 2 \\ + 0 \\ \hline \end{array}$$



$$\begin{array}{r} 8 \\ + 2 \\ \hline \end{array}$$



$$\begin{array}{r} 2 \\ + 4 \\ \hline \end{array}$$


$$\begin{array}{r} 7 \\ + 2 \\ \hline \end{array}$$


$$\begin{array}{r} 5 \\ + 2 \\ \hline \end{array}$$


$$\begin{array}{r} 9 \\ + 2 \\ \hline \end{array}$$


$$\begin{array}{r} 2 \\ + 5 \\ \hline \end{array}$$


$$\begin{array}{r} 2 \\ + 6 \\ \hline \end{array}$$

Download the Curriculum-based **INFIQ** Digital Workbook from the App Store for **UNLIMITED QUESTIONS**



# INFIQ GRADE 1 WORKSHEETS

## Add Single Digit Numbers - Add 2

Name \_\_\_\_\_

Date \_\_\_\_\_

Find the sum

$$\begin{array}{r} 4 \\ + 2 \\ \hline \end{array}$$

$$\begin{array}{r} 2 \\ + 7 \\ \hline \end{array}$$

$$\begin{array}{r} 1 \\ + 2 \\ \hline \end{array}$$

$$\begin{array}{r} 2 \\ + 5 \\ \hline \end{array}$$

$$\begin{array}{r} 6 \\ + 2 \\ \hline \end{array}$$

$$\begin{array}{r} 2 \\ + 4 \\ \hline \end{array}$$

$$\begin{array}{r} 3 \\ + 2 \\ \hline \end{array}$$

$$\begin{array}{r} 9 \\ + 2 \\ \hline \end{array}$$

$$\begin{array}{r} 2 \\ + 3 \\ \hline \end{array}$$

$$\begin{array}{r} 2 \\ + 0 \\ \hline \end{array}$$

$$\begin{array}{r} 2 \\ + 8 \\ \hline \end{array}$$

$$\begin{array}{r} 2 \\ + 2 \\ \hline \end{array}$$

Download the Curriculum-based **INFIQ** Digital Workbook from the App Store for **UNLIMITED QUESTIONS**





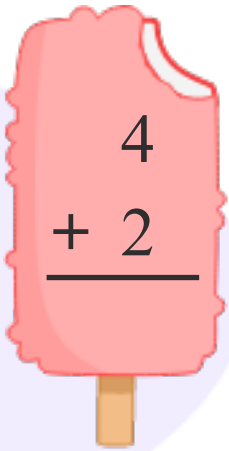
# INFIQ GRADE 1 WORKSHEETS

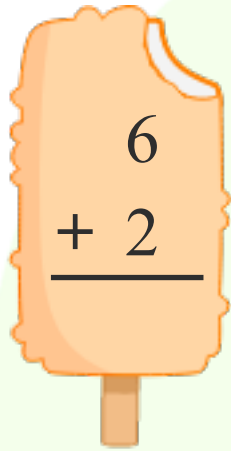
## Add Single Digit Numbers - Add 2

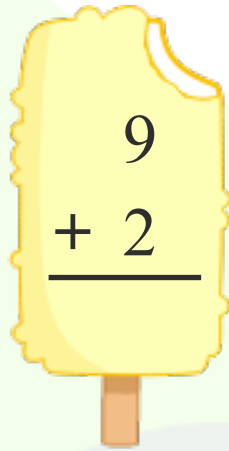
Name \_\_\_\_\_

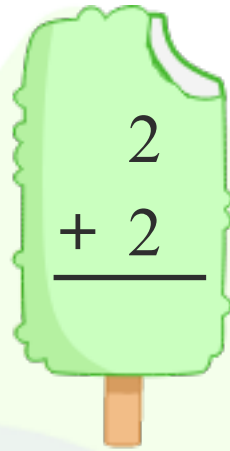
Date \_\_\_\_\_

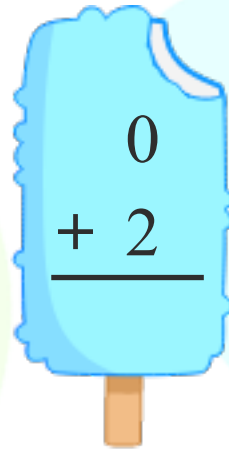
Add **2** to find the sum.

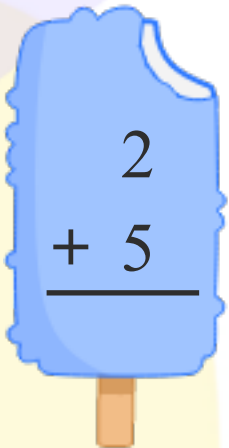

$$\begin{array}{r} 4 \\ + 2 \\ \hline \end{array}$$

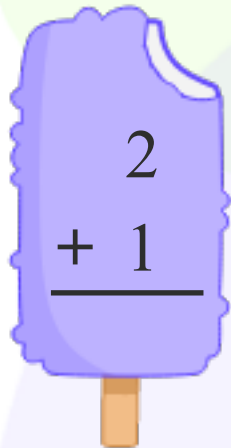

$$\begin{array}{r} 6 \\ + 2 \\ \hline \end{array}$$

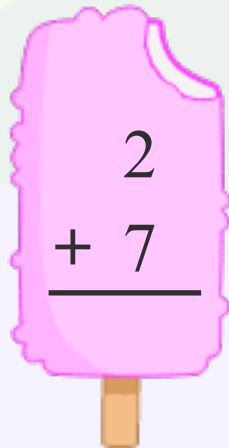

$$\begin{array}{r} 9 \\ + 2 \\ \hline \end{array}$$

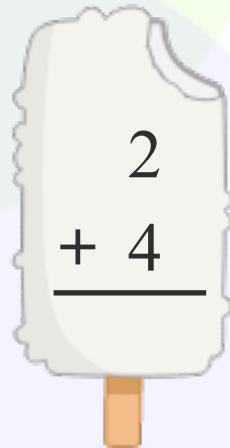

$$\begin{array}{r} 2 \\ + 2 \\ \hline \end{array}$$

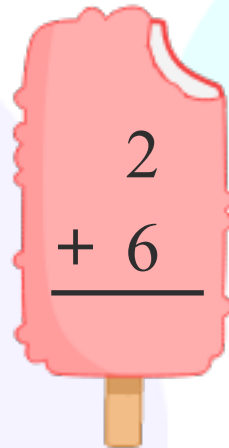

$$\begin{array}{r} 0 \\ + 2 \\ \hline \end{array}$$

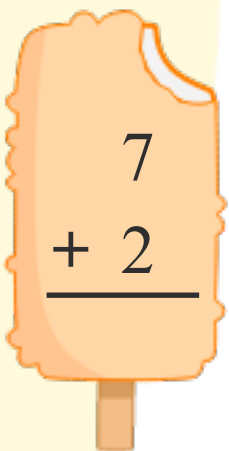

$$\begin{array}{r} 2 \\ + 5 \\ \hline \end{array}$$

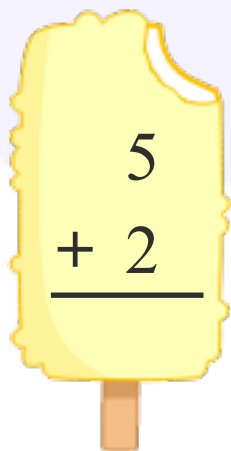

$$\begin{array}{r} 2 \\ + 1 \\ \hline \end{array}$$

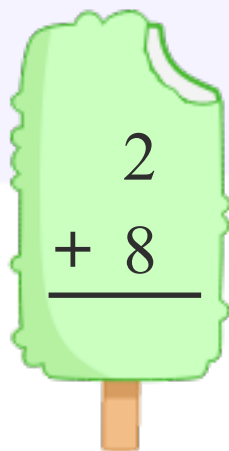

$$\begin{array}{r} 2 \\ + 7 \\ \hline \end{array}$$

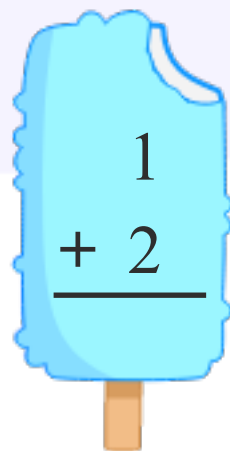

$$\begin{array}{r} 2 \\ + 4 \\ \hline \end{array}$$

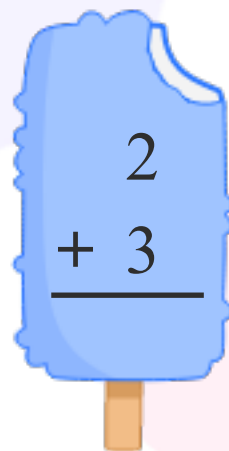

$$\begin{array}{r} 2 \\ + 6 \\ \hline \end{array}$$


$$\begin{array}{r} 7 \\ + 2 \\ \hline \end{array}$$


$$\begin{array}{r} 5 \\ + 2 \\ \hline \end{array}$$


$$\begin{array}{r} 2 \\ + 8 \\ \hline \end{array}$$


$$\begin{array}{r} 1 \\ + 2 \\ \hline \end{array}$$


$$\begin{array}{r} 2 \\ + 3 \\ \hline \end{array}$$

Download the Curriculum-based **INFIQ** Digital Workbook from the App Store for **UNLIMITED QUESTIONS**



# INFIQ GRADE 1 WORKSHEETS

## Add Single Digit Numbers - Add 2

Name \_\_\_\_\_

Date \_\_\_\_\_

Add **2** to a number.

$4 + 2 = \square$

$2 + 9 = \square$

$2 + 5 = \square$

$0 + 2 = \square$

$7 + 2 = \square$

$1 + 2 = \square$

$2 + 2 = \square$

$6 + 2 = \square$

$3 + 2 = \square$

$8 + 2 = \square$

Download the Curriculum-based **INFIQ** Digital Workbook from the App Store for **UNLIMITED QUESTIONS**



# INFIQ GRADE 1 WORKSHEETS

## Add Single Digit Numbers - Add 2

Name \_\_\_\_\_

Date \_\_\_\_\_

Add the numbers to find the sum

$$\begin{array}{r} 4 \\ + 2 \\ \hline \end{array}$$

$$\begin{array}{r} 5 \\ + 2 \\ \hline \end{array}$$

$$\begin{array}{r} 6 \\ + 2 \\ \hline \end{array}$$

$$\begin{array}{r} 7 \\ + 2 \\ \hline \end{array}$$

$$\begin{array}{r} 1 \\ + 2 \\ \hline \end{array}$$

$$\begin{array}{r} 2 \\ + 2 \\ \hline \end{array}$$

$$\begin{array}{r} 3 \\ + 2 \\ \hline \end{array}$$

$$\begin{array}{r} 2 \\ + 4 \\ \hline \end{array}$$

$$\begin{array}{r} 2 \\ + 3 \\ \hline \end{array}$$

$$\begin{array}{r} 2 \\ + 5 \\ \hline \end{array}$$

$$\begin{array}{r} 2 \\ + 6 \\ \hline \end{array}$$

$$\begin{array}{r} 2 \\ + 7 \\ \hline \end{array}$$

Download the Curriculum-based **INFIQ** Digital Workbook from the App Store for **UNLIMITED QUESTIONS**