



Because Math Needs Practice

INFIQ
Infinite Quizzes



Also available,
Comprehensive
Digital Math Workbook
For Grades 1-5



A lot more curriculum-based worksheets at www.infiq.education

Grade 01

Add Single Digit Numbers

Add 4

INFIQ GRADE 1 WORKSHEETS

Add Single Digit Numbers - Add 4

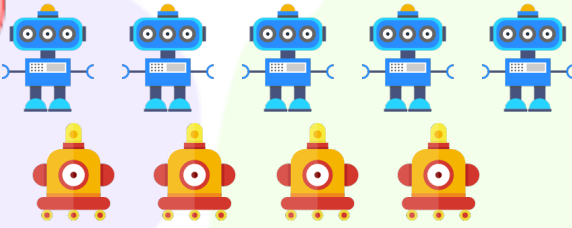
Name _____

Date _____

Add the number of robots to find the total for each group


Count the number of robots in each group and write the sum.

1



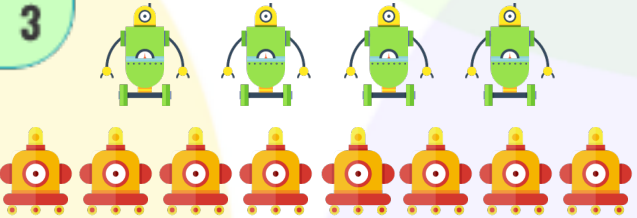
_____ + _____ =

2




_____ + _____ =

3




_____ + _____ =

4




_____ + _____ =

5



_____ + _____ =

6



_____ + _____ =

Download the Curriculum-based **INFIQ** Digital Workbook from the App Store for **UNLIMITED QUESTIONS**



INFIQ GRADE 1 WORKSHEETS















Add Single Digit Numbers - Add 4

Name _____

Date _____

Add the number of burgers to find the total for each group

Count the number of burgers for each addition statement and write the sum.

	+		=	<input type="text"/>
	+		=	<input type="text"/>
	+		=	<input type="text"/>
	+		=	<input type="text"/>
	+		=	<input type="text"/>
	+		=	<input type="text"/>
	+		=	<input type="text"/>

Download the Curriculum-based **INFIQ** Digital Workbook from the App Store for **UNLIMITED QUESTIONS**



INFIQ GRADE 1 WORKSHEETS

Add Single Digit Numbers - Add 4

Name _____

Date _____


Complete the addition sentence

Count the number of bow-ties in each group and complete the addition sentence.


$$\underline{\quad} + \underline{\quad} = \underline{\quad}$$

$$\underline{\quad} + \underline{\quad} = \underline{\quad}$$

$$\underline{\quad} + \underline{\quad} = \underline{\quad}$$

$$\underline{\quad} + \underline{\quad} = \underline{\quad}$$

$$\underline{\quad} + \underline{\quad} = \underline{\quad}$$

$$\underline{\quad} + \underline{\quad} = \underline{\quad}$$

Download the Curriculum-based **INFIQ** Digital Workbook from the App Store for **UNLIMITED QUESTIONS**



INFIQ GRADE 1 WORKSHEETS

Add Single Digit Numbers - Add 4



Name _____

Date _____

Add the number of rockets to find the total for each group



Count the number of rockets in each group and write the sum.

1





_____ + _____ =

2





_____ + _____ =

3





_____ + _____ =

4





_____ + _____ =

5



_____ + _____ =

6



_____ + _____ =

Download the Curriculum-based **INFIQ** Digital Workbook from the App Store for **UNLIMITED QUESTIONS**

INFIQ GRADE 1 WORKSHEETS


Add Single Digit Numbers - Add 4

Name _____


Date _____

Complete the addition sentence


Count the number of bees in each group and complete the addition sentence.




$$\underline{\quad} + \underline{\quad} = \underline{\quad}$$




$$\underline{\quad} + \underline{\quad} = \underline{\quad}$$




$$\underline{\quad} + \underline{\quad} = \underline{\quad}$$



$$\underline{\quad} + \underline{\quad} = \underline{\quad}$$



$$\underline{\quad} + \underline{\quad} = \underline{\quad}$$



$$\underline{\quad} + \underline{\quad} = \underline{\quad}$$

Download the Curriculum-based **INFIQ** Digital Workbook from the App Store for **UNLIMITED QUESTIONS**



INFIQ GRADE 1 WORKSHEETS

Add Single Digit Numbers - Add 4

Name _____

Date _____

Add 4 to a number.

$$\begin{array}{r} 4 \\ + 1 \\ \hline \end{array}$$

$$\begin{array}{r} 9 \\ + 4 \\ \hline \end{array}$$

$$\begin{array}{r} 4 \\ + 2 \\ \hline \end{array}$$

$$\begin{array}{r} 4 \\ + 8 \\ \hline \end{array}$$

$$\begin{array}{r} 3 \\ + 4 \\ \hline \end{array}$$

$$\begin{array}{r} 7 \\ + 4 \\ \hline \end{array}$$

$$\begin{array}{r} 4 \\ + 4 \\ \hline \end{array}$$

$$\begin{array}{r} 4 \\ + 6 \\ \hline \end{array}$$

$$\begin{array}{r} 5 \\ + 4 \\ \hline \end{array}$$

$$\begin{array}{r} 4 \\ + 0 \\ \hline \end{array}$$

$$\begin{array}{r} 4 \\ + 5 \\ \hline \end{array}$$

$$\begin{array}{r} 4 \\ + 3 \\ \hline \end{array}$$

Download the Curriculum-based INFIQ Digital Workbook from the App Store for UNLIMITED QUESTIONS



INFIQ GRADE 1 WORKSHEETS


Add Single Digit Numbers - Add 4


Name _____


Date _____

Find the sum


$$\begin{array}{r} 1 \\ + 4 \\ \hline \end{array}$$


$$\begin{array}{r} 2 \\ + 4 \\ \hline \end{array}$$



$$\begin{array}{r} 4 \\ + 3 \\ \hline \end{array}$$


$$\begin{array}{r} 4 \\ + 4 \\ \hline \end{array}$$

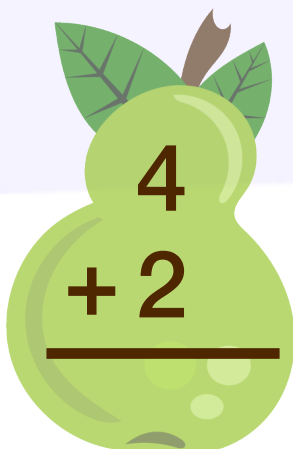

$$\begin{array}{r} 5 \\ + 4 \\ \hline \end{array}$$

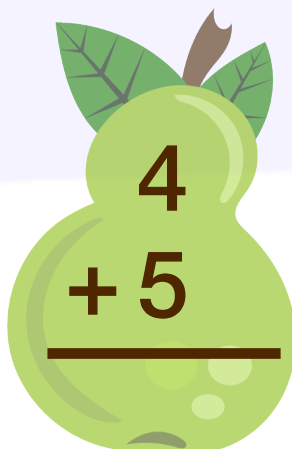

$$\begin{array}{r} 4 \\ + 6 \\ \hline \end{array}$$



$$\begin{array}{r} 7 \\ + 4 \\ \hline \end{array}$$


$$\begin{array}{r} 4 \\ + 8 \\ \hline \end{array}$$


$$\begin{array}{r} 9 \\ + 4 \\ \hline \end{array}$$


$$\begin{array}{r} 4 \\ + 2 \\ \hline \end{array}$$


$$\begin{array}{r} 4 \\ + 5 \\ \hline \end{array}$$


$$\begin{array}{r} 0 \\ + 4 \\ \hline \end{array}$$

Download the Curriculum-based **INFIQ** Digital Workbook from the App Store for **UNLIMITED QUESTIONS**



INFIQ GRADE 1 WORKSHEETS

Add Single Digit Numbers - Add 4

Name _____

Date _____

Add the numbers and write the sum.

$$\begin{array}{r} 7 \\ + 4 \\ \hline \end{array}$$

$$\begin{array}{r} 1 \\ + 4 \\ \hline \end{array}$$

$$\begin{array}{r} 0 \\ + 4 \\ \hline \end{array}$$

$$\begin{array}{r} 2 \\ + 4 \\ \hline \end{array}$$

$$\begin{array}{r} 3 \\ + 4 \\ \hline \end{array}$$

$$\begin{array}{r} 4 \\ + 4 \\ \hline \end{array}$$

$$\begin{array}{r} 4 \\ + 9 \\ \hline \end{array}$$

$$\begin{array}{r} 6 \\ + 4 \\ \hline \end{array}$$

$$\begin{array}{r} 5 \\ + 4 \\ \hline \end{array}$$

$$\begin{array}{r} 9 \\ + 4 \\ \hline \end{array}$$

$$\begin{array}{r} 8 \\ + 4 \\ \hline \end{array}$$

$$\begin{array}{r} 4 \\ + 0 \\ \hline \end{array}$$

Download the Curriculum-based **INFIQ** Digital Workbook from the App Store for **UNLIMITED QUESTIONS**



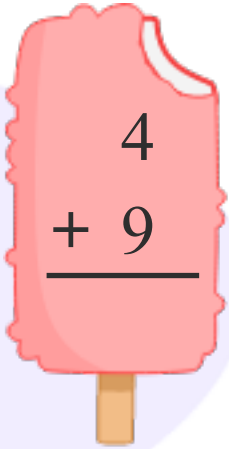
INFIQ GRADE 1 WORKSHEETS

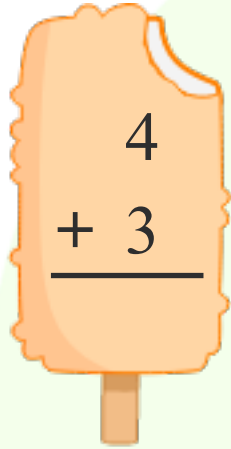
Add Single Digit Numbers - Add 4

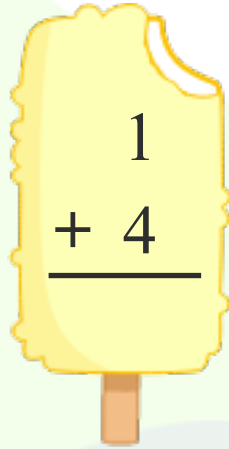
Name _____

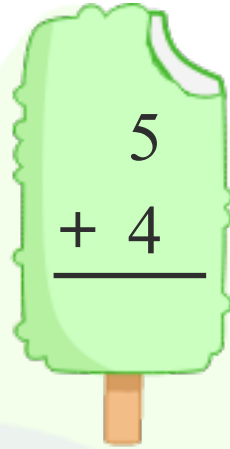
Date _____

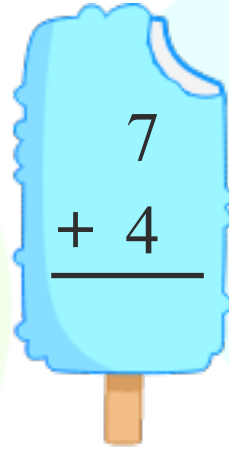
Add 4 to find the sum.

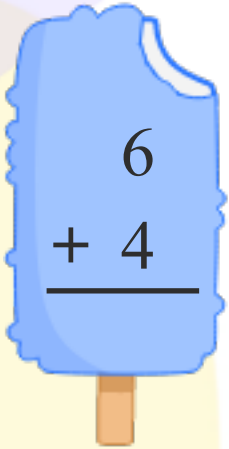

$$\begin{array}{r} 4 \\ + 9 \\ \hline \end{array}$$

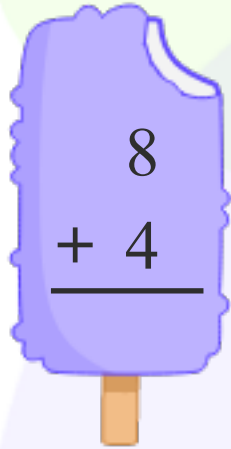

$$\begin{array}{r} 4 \\ + 3 \\ \hline \end{array}$$

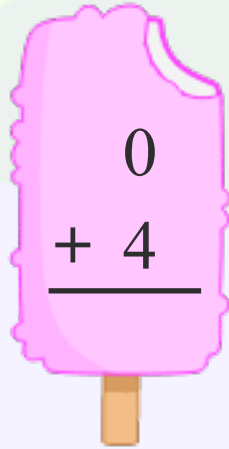

$$\begin{array}{r} 1 \\ + 4 \\ \hline \end{array}$$

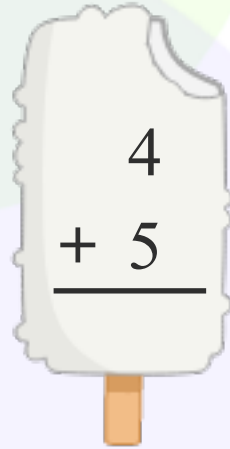

$$\begin{array}{r} 5 \\ + 4 \\ \hline \end{array}$$

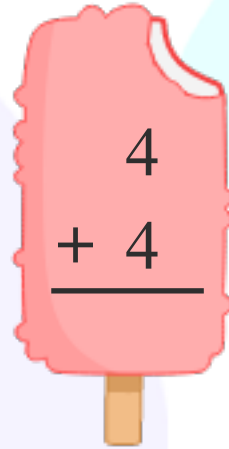

$$\begin{array}{r} 7 \\ + 4 \\ \hline \end{array}$$

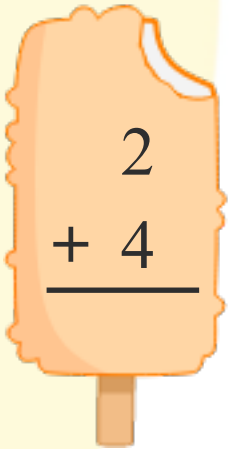

$$\begin{array}{r} 6 \\ + 4 \\ \hline \end{array}$$

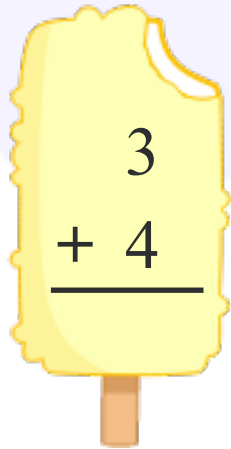

$$\begin{array}{r} 8 \\ + 4 \\ \hline \end{array}$$

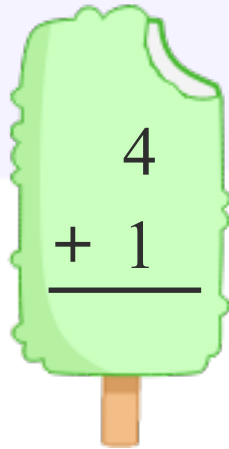

$$\begin{array}{r} 0 \\ + 4 \\ \hline \end{array}$$

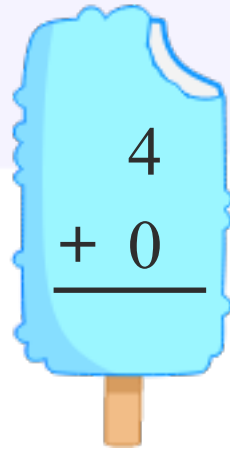

$$\begin{array}{r} 4 \\ + 5 \\ \hline \end{array}$$

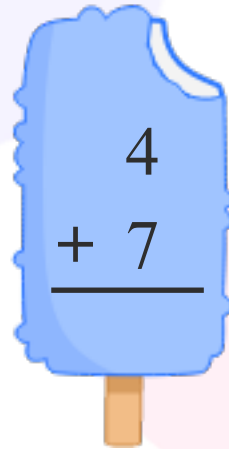

$$\begin{array}{r} 4 \\ + 4 \\ \hline \end{array}$$


$$\begin{array}{r} 2 \\ + 4 \\ \hline \end{array}$$


$$\begin{array}{r} 3 \\ + 4 \\ \hline \end{array}$$


$$\begin{array}{r} 4 \\ + 1 \\ \hline \end{array}$$


$$\begin{array}{r} 4 \\ + 0 \\ \hline \end{array}$$


$$\begin{array}{r} 4 \\ + 7 \\ \hline \end{array}$$

Download the Curriculum-based INFIQ Digital Workbook from the App Store for UNLIMITED QUESTIONS



INFIQ GRADE 1 WORKSHEETS

Add Single Digit Numbers - Add 4

Name _____

Date _____

Add 4 to a number.

$4 + 4 = \square$

$4 + 0 = \square$

$1 + 4 = \square$

$8 + 4 = \square$

$4 + 2 = \square$

$3 + 4 = \square$

$9 + 4 = \square$

$7 + 4 = \square$

$6 + 4 = \square$

$5 + 4 = \square$