



# INFIQ GRADE 1 WORKSHEETS















## Add Single Digit Numbers - Add 5

Name \_\_\_\_\_

Date \_\_\_\_\_

### Find the total number of fish for each group

Count the number of fish for each addition statement and write the sum.

	+		=	<input type="text"/>
	+		=	<input type="text"/>
	+		=	<input type="text"/>
	+		=	<input type="text"/>
	+		=	<input type="text"/>
	+		=	<input type="text"/>
	+		=	<input type="text"/>

Download the Curriculum-based **INFIQ** Digital Workbook from the App Store for **UNLIMITED QUESTIONS**