



INFIQ GRADE 1 WORKSHEETS


Add Single Digit Numbers - Add 5

Name _____


Date _____

Complete the addition sentence


Count the number of insects in each group and complete the addition sentence.



$$\underline{\quad} + \underline{\quad} = \underline{\quad}$$




$$\underline{\quad} + \underline{\quad} = \underline{\quad}$$




$$\underline{\quad} + \underline{\quad} = \underline{\quad}$$



$$\underline{\quad} + \underline{\quad} = \underline{\quad}$$



$$\underline{\quad} + \underline{\quad} = \underline{\quad}$$



$$\underline{\quad} + \underline{\quad} = \underline{\quad}$$

Download the Curriculum-based **INFIQ** Digital Workbook from the App Store for **UNLIMITED QUESTIONS**