



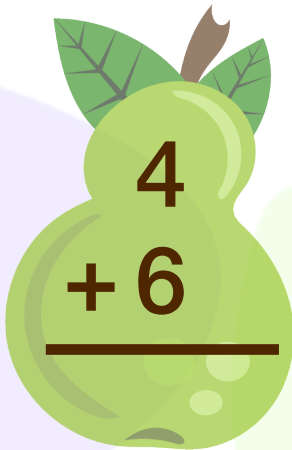
INFIQ GRADE 1 WORKSHEETS


Add Single Digit Numbers - Add 6


Name _____

Date _____


Find the sum



$$\begin{array}{r} 4 \\ + 6 \\ \hline \end{array}$$



$$\begin{array}{r} 3 \\ + 6 \\ \hline \end{array}$$



$$\begin{array}{r} 6 \\ + 2 \\ \hline \end{array}$$

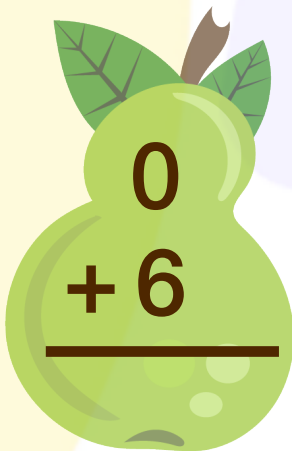

$$\begin{array}{r} 1 \\ + 6 \\ \hline \end{array}$$



$$\begin{array}{r} 5 \\ + 6 \\ \hline \end{array}$$



$$\begin{array}{r} 6 \\ + 0 \\ \hline \end{array}$$



$$\begin{array}{r} 6 \\ + 8 \\ \hline \end{array}$$


$$\begin{array}{r} 7 \\ + 6 \\ \hline \end{array}$$


$$\begin{array}{r} 0 \\ + 6 \\ \hline \end{array}$$


$$\begin{array}{r} 6 \\ + 9 \\ \hline \end{array}$$


$$\begin{array}{r} 6 \\ + 6 \\ \hline \end{array}$$


$$\begin{array}{r} 8 \\ + 6 \\ \hline \end{array}$$

Download the Curriculum-based **INFIQ** Digital Workbook from the App Store for **UNLIMITED QUESTIONS**