



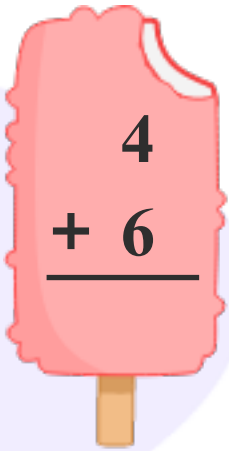
INFIQ GRADE 1 WORKSHEETS

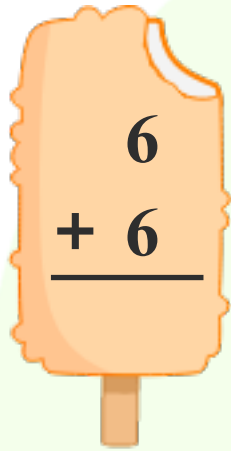
Add Single Digit Numbers - Add 6

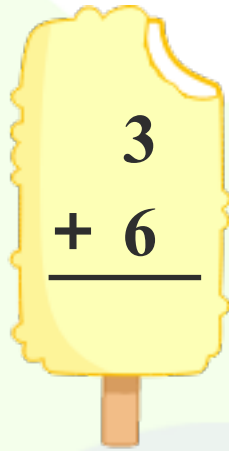
Name _____

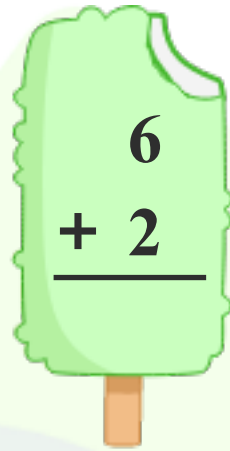
Date _____

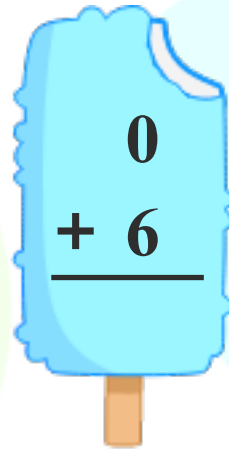
Add **6** to find the sum.

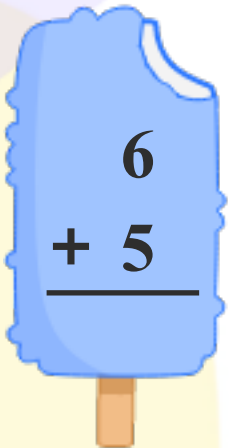

$$\begin{array}{r} 4 \\ + 6 \\ \hline \end{array}$$

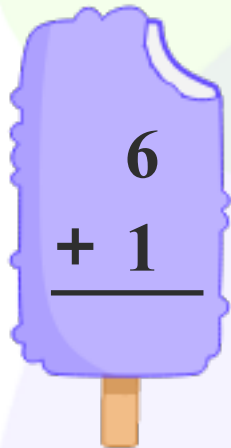

$$\begin{array}{r} 6 \\ + 6 \\ \hline \end{array}$$

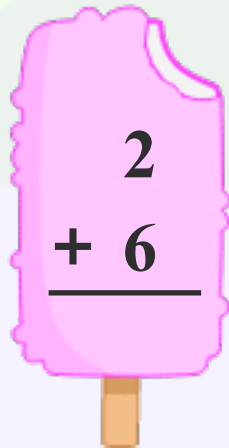

$$\begin{array}{r} 3 \\ + 6 \\ \hline \end{array}$$

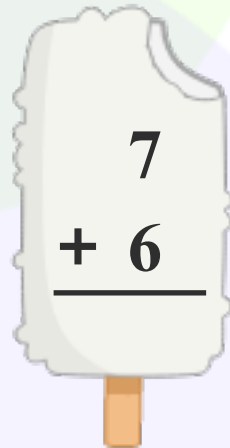

$$\begin{array}{r} 6 \\ + 2 \\ \hline \end{array}$$

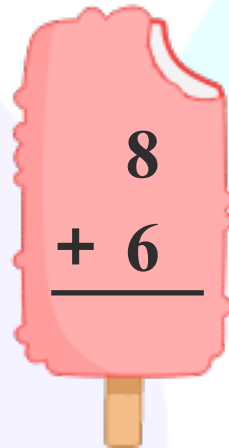

$$\begin{array}{r} 0 \\ + 6 \\ \hline \end{array}$$



$$\begin{array}{r} 6 \\ + 5 \\ \hline \end{array}$$

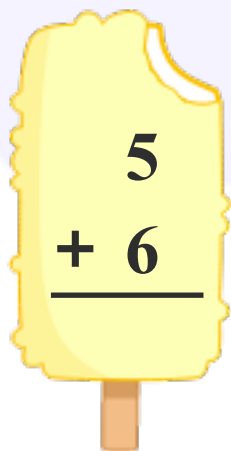

$$\begin{array}{r} 6 \\ + 1 \\ \hline \end{array}$$

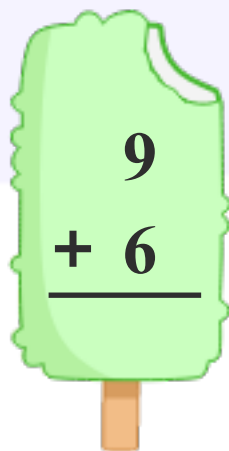

$$\begin{array}{r} 2 \\ + 6 \\ \hline \end{array}$$

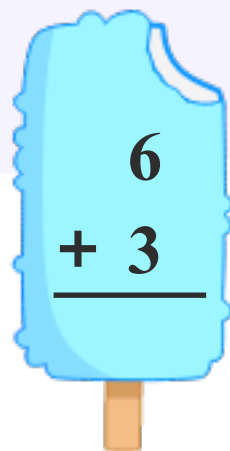

$$\begin{array}{r} 7 \\ + 6 \\ \hline \end{array}$$

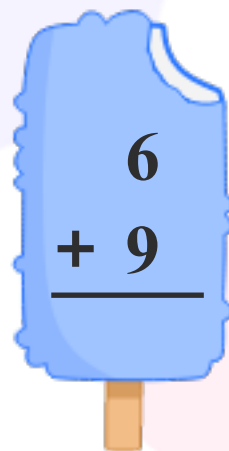

$$\begin{array}{r} 8 \\ + 6 \\ \hline \end{array}$$


$$\begin{array}{r} 6 \\ + 8 \\ \hline \end{array}$$


$$\begin{array}{r} 5 \\ + 6 \\ \hline \end{array}$$


$$\begin{array}{r} 9 \\ + 6 \\ \hline \end{array}$$


$$\begin{array}{r} 6 \\ + 3 \\ \hline \end{array}$$


$$\begin{array}{r} 6 \\ + 9 \\ \hline \end{array}$$

Download the Curriculum-based **INFIQ** Digital Workbook from the App Store for **UNLIMITED QUESTIONS**