



Because Math Needs Practice

INFIQ
Infinite Quizzes



*Also available,
Comprehensive
Digital Math Workbook
For Grades 1-5*



A lot more curriculum-based worksheets at www.infiq.education

Grade 01

Add Single Digit Numbers

Add 9



INFIQ GRADE 1 WORKSHEETS

Add Single Digit Numbers - Add 9

Name _____

Date _____

Find the total number of stars (Count the number of stars for each group and write the sum)


 +
 
 _____ + _____ = _____


 +
 
 _____ + _____ = _____


 +
 
 _____ + _____ = _____


 +
 
 _____ + _____ = _____


 +
 
 _____ + _____ = _____


 +
 
 _____ + _____ = _____


 +
 
 _____ + _____ = _____



INFIQ GRADE 1 WORKSHEETS

Add Single Digit Numbers - Add 9

Name _____


Date _____

Find the total number of umbrellas



 +  _____ + _____ = _____



 +  _____ + _____ = _____

 +  _____ + _____ = _____

 +  _____ + _____ = _____

 +  _____ + _____ = _____

 +  _____ + _____ = _____

 +  _____ + _____ = _____

Download the Curriculum-based **INFIQ** Digital Workbook from the App Store for **UNLIMITED QUESTIONS**



INFIQ GRADE 1 WORKSHEETS















Add Single Digit Numbers - Add 9

Name _____

Date _____

Find the total number of cupcakes

Count the number of cupcakes for each addition statement and write the sum.

	+		=	<input type="text"/>
	+		=	<input type="text"/>
	+		=	<input type="text"/>
	+		=	<input type="text"/>
	+		=	<input type="text"/>
	+		=	<input type="text"/>
	+		=	<input type="text"/>

Download the Curriculum-based **INFIQ** Digital Workbook from the App Store for **UNLIMITED QUESTIONS**



INFIQ GRADE 1 WORKSHEETS

Add Single Digit Numbers - Add 9

Name _____

Date _____

Find the sum

Count the number of items for each addition statement and write the sum.

	+		=	<input type="text"/>
	+		=	<input type="text"/>
	+		=	<input type="text"/>
	+		=	<input type="text"/>
	+		=	<input type="text"/>
	+		=	<input type="text"/>
	+		=	<input type="text"/>

Download the Curriculum-based **INFIQ** Digital Workbook from the App Store for **UNLIMITED QUESTIONS**



INFIQ GRADE 1 WORKSHEETS

Add Single Digit Numbers - Add 9

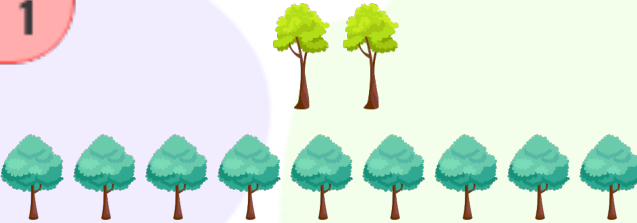
Name _____

Date _____

Find the total number of trees


Count the number of trees in each group and write the sum.

1




_____ + _____ =

2




_____ + _____ =

3




_____ + _____ =

4




_____ + _____ =

5



_____ + _____ =

6



_____ + _____ =

Download the Curriculum-based **INFIQ** Digital Workbook from the App Store for **UNLIMITED QUESTIONS**




INFIQ GRADE 1 WORKSHEETS


Add Single Digit Numbers - Add 9


Name _____


Date _____


Find the sum



$$\begin{array}{r} 9 \\ + 2 \\ \hline \end{array}$$



$$\begin{array}{r} 3 \\ + 9 \\ \hline \end{array}$$



$$\begin{array}{r} 9 \\ + 9 \\ \hline \end{array}$$



$$\begin{array}{r} 9 \\ + 8 \\ \hline \end{array}$$



$$\begin{array}{r} 9 \\ + 1 \\ \hline \end{array}$$

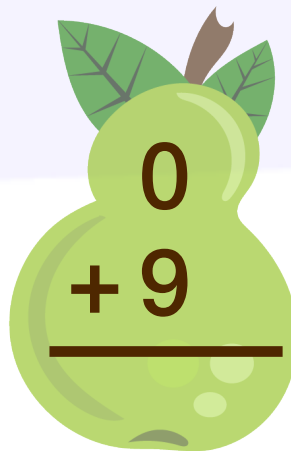

$$\begin{array}{r} 2 \\ + 9 \\ \hline \end{array}$$



$$\begin{array}{r} 4 \\ + 9 \\ \hline \end{array}$$


$$\begin{array}{r} 9 \\ + 6 \\ \hline \end{array}$$


$$\begin{array}{r} 6 \\ + 9 \\ \hline \end{array}$$


$$\begin{array}{r} 9 \\ + 5 \\ \hline \end{array}$$


$$\begin{array}{r} 0 \\ + 9 \\ \hline \end{array}$$


$$\begin{array}{r} 7 \\ + 9 \\ \hline \end{array}$$

Download the Curriculum-based **INFIQ** Digital Workbook from the App Store for **UNLIMITED QUESTIONS**



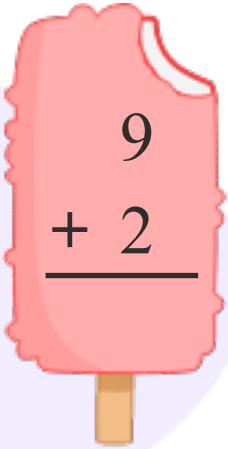
INFIQ GRADE 1 WORKSHEETS

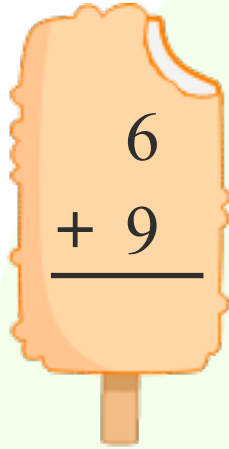
Add Single Digit Numbers - Add 9

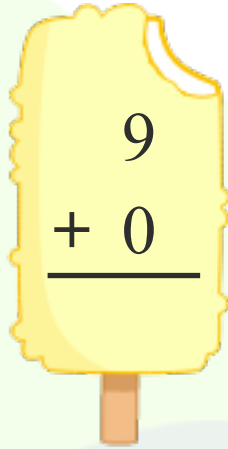
Name _____

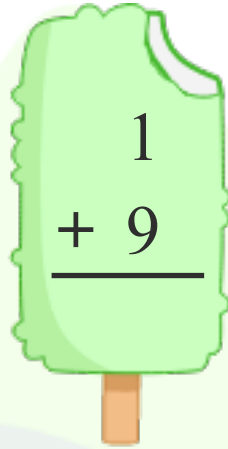
Date _____

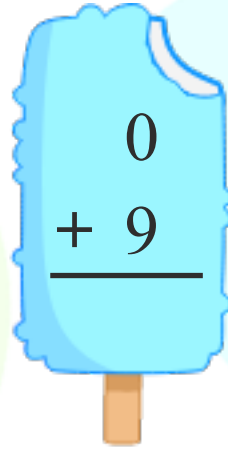
Add **9** to find the sum.

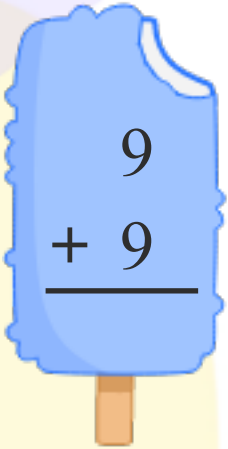

$$\begin{array}{r} 9 \\ + 2 \\ \hline \end{array}$$

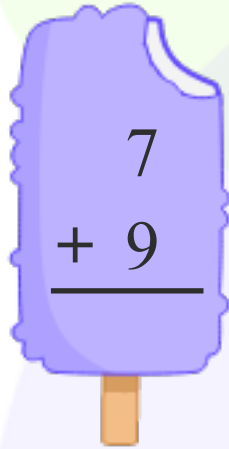

$$\begin{array}{r} 6 \\ + 9 \\ \hline \end{array}$$

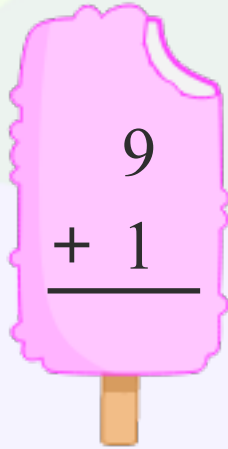

$$\begin{array}{r} 9 \\ + 0 \\ \hline \end{array}$$

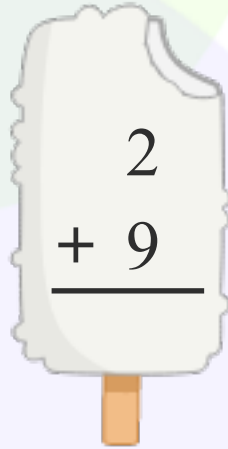

$$\begin{array}{r} 1 \\ + 9 \\ \hline \end{array}$$

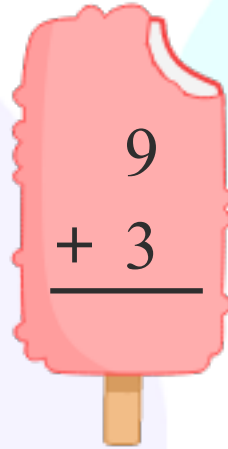

$$\begin{array}{r} 0 \\ + 9 \\ \hline \end{array}$$

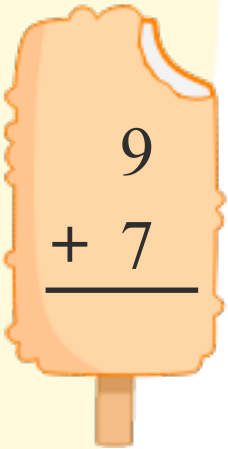

$$\begin{array}{r} 9 \\ + 9 \\ \hline \end{array}$$

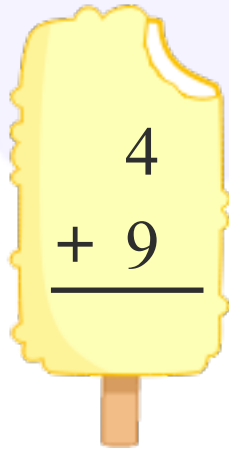

$$\begin{array}{r} 7 \\ + 9 \\ \hline \end{array}$$

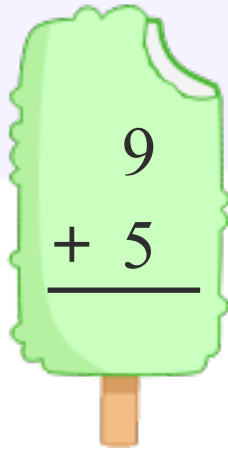

$$\begin{array}{r} 9 \\ + 1 \\ \hline \end{array}$$

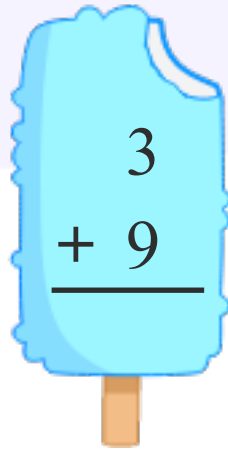

$$\begin{array}{r} 2 \\ + 9 \\ \hline \end{array}$$

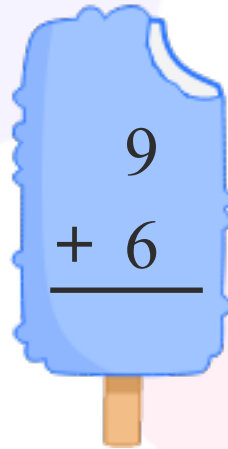

$$\begin{array}{r} 9 \\ + 3 \\ \hline \end{array}$$


$$\begin{array}{r} 9 \\ + 7 \\ \hline \end{array}$$


$$\begin{array}{r} 4 \\ + 9 \\ \hline \end{array}$$


$$\begin{array}{r} 9 \\ + 5 \\ \hline \end{array}$$


$$\begin{array}{r} 3 \\ + 9 \\ \hline \end{array}$$


$$\begin{array}{r} 9 \\ + 6 \\ \hline \end{array}$$

Download the Curriculum-based **INFIQ** Digital Workbook from the App Store for **UNLIMITED QUESTIONS**



INFIQ GRADE 1 WORKSHEETS

Add Single Digit Numbers - Add 9

Name _____

Date _____

Add **9** to a number.

$9 + 4 = \square$

$6 + 9 = \square$

$0 + 9 = \square$

$9 + 7 = \square$

$9 + 9 = \square$

$3 + 9 = \square$

$1 + 9 = \square$

$8 + 9 = \square$

$9 + 2 = \square$

$9 + 5 = \square$



INFIQ GRADE 1 WORKSHEETS

Add Single Digit Numbers - Add 9

Name _____

Date _____

Add **9** to a number.

$$\begin{array}{r} 9 \\ + 0 \\ \hline \end{array}$$

$$\begin{array}{r} 8 \\ + 9 \\ \hline \end{array}$$

$$\begin{array}{r} 6 \\ + 9 \\ \hline \end{array}$$

$$\begin{array}{r} 9 \\ + 2 \\ \hline \end{array}$$

$$\begin{array}{r} 9 \\ + 5 \\ \hline \end{array}$$

$$\begin{array}{r} 0 \\ + 9 \\ \hline \end{array}$$

$$\begin{array}{r} 9 \\ + 3 \\ \hline \end{array}$$

$$\begin{array}{r} 1 \\ + 9 \\ \hline \end{array}$$

$$\begin{array}{r} 9 \\ + 4 \\ \hline \end{array}$$

$$\begin{array}{r} 3 \\ + 9 \\ \hline \end{array}$$

$$\begin{array}{r} 7 \\ + 9 \\ \hline \end{array}$$

$$\begin{array}{r} 9 \\ + 9 \\ \hline \end{array}$$

Download the Curriculum-based **INFIQ** Digital Workbook from the App Store for **UNLIMITED QUESTIONS**



INFIQ GRADE 1 WORKSHEETS

Add Single Digit Numbers - Add 9

Name _____

Date _____

Add **9** to a number.

$$\begin{array}{r} 9 \\ + 5 \\ \hline \\ \hline \end{array}$$

$$\begin{array}{r} 4 \\ + 9 \\ \hline \\ \hline \end{array}$$

$$\begin{array}{r} 9 \\ + 9 \\ \hline \\ \hline \end{array}$$

$$\begin{array}{r} 7 \\ + 9 \\ \hline \\ \hline \end{array}$$

$$\begin{array}{r} 9 \\ + 2 \\ \hline \\ \hline \end{array}$$

$$\begin{array}{r} 6 \\ + 9 \\ \hline \\ \hline \end{array}$$

$$\begin{array}{r} 9 \\ + 7 \\ \hline \\ \hline \end{array}$$

$$\begin{array}{r} 0 \\ + 9 \\ \hline \\ \hline \end{array}$$

$$\begin{array}{r} 8 \\ + 9 \\ \hline \\ \hline \end{array}$$

$$\begin{array}{r} 5 \\ + 9 \\ \hline \\ \hline \end{array}$$

$$\begin{array}{r} 3 \\ + 9 \\ \hline \\ \hline \end{array}$$

$$\begin{array}{r} 9 \\ + 8 \\ \hline \\ \hline \end{array}$$

Download the Curriculum-based **INFIQ** Digital Workbook from the App Store for **UNLIMITED QUESTIONS**