



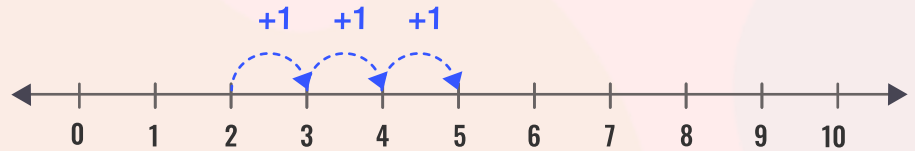
Name _____

Date _____


Add the numbers by using the number line.

(First one is done for you)

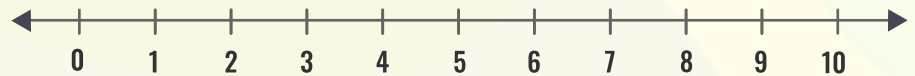
$$2 + 3 = \underline{5}$$



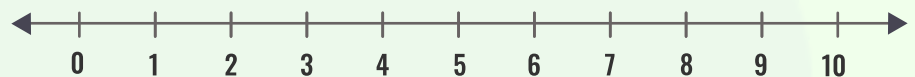
$$8 + 1 = \underline{\quad}$$



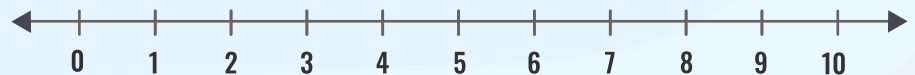
$$4 + 5 = \underline{\quad}$$



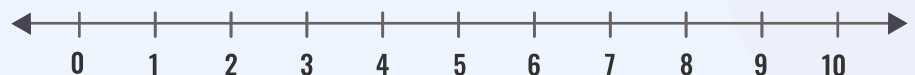
$$6 + 4 = \underline{\quad}$$



$$2 + 8 = \underline{\quad}$$



$$3 + 7 = \underline{\quad}$$



Download the Curriculum-based **INFIQ** Digital Workbook from the App Store for **UNLIMITED QUESTIONS**