



Because Math Needs Practice



Also available,
Comprehensive
Digital Math Workbook
For Grades 1-5



A lot more curriculum-based worksheets at www.infiq.education

Grade 01

Add Single Digit Numbers

Adding with Number Line (up to 10)



Name _____

Date _____

Complete the addition sentences using the number line

_____ + _____ = _____

_____ + _____ = _____

_____ + _____ = _____

_____ + _____ = _____

_____ + _____ = _____

_____ + _____ = _____

Download the Curriculum-based **INFIQ** Digital Workbook from the App Store for **UNLIMITED QUESTIONS**



Name _____

Date _____

Complete the addition sentences using the number line

$4 + 4 = 8$

$2 + 1 = 3$

$3 + 3 = 6$

$7 + 2 = 9$

$0 + 8 = 8$

$1 + 6 = 7$

Download the Curriculum-based INFIQ Digital Workbook from the App Store for **UNLIMITED QUESTIONS**



Name _____

Date _____

Complete the addition sentences using the number line

Number line from 0 to 10 with a dashed arrow from 9 to 10 labeled +1. To the right is an addition sentence: $\underline{\quad} + \underline{\quad} = \underline{\quad}$

Number line from 0 to 10 with a dashed arrow from 5 to 6 labeled +1. To the right is an addition sentence: $\underline{\quad} + \underline{\quad} = \underline{\quad}$

Number line from 0 to 10 with a dashed arrow from 6 to 8 labeled +2. To the right is an addition sentence: $\underline{\quad} + \underline{\quad} = \underline{\quad}$

Number line from 0 to 10 with dashed arrows from 6 to 7, 7 to 8, and 8 to 9, each labeled +1. To the right is an addition sentence: $\underline{\quad} + \underline{\quad} = \underline{\quad}$

Number line from 0 to 10 with dashed arrows from 5 to 6, 6 to 7, and 7 to 8, each labeled +1. To the right is an addition sentence: $\underline{\quad} + \underline{\quad} = \underline{\quad}$

Number line from 0 to 10 with dashed arrows from 3 to 4 and 4 to 5, each labeled +1. To the right is an addition sentence: $\underline{\quad} + \underline{\quad} = \underline{\quad}$

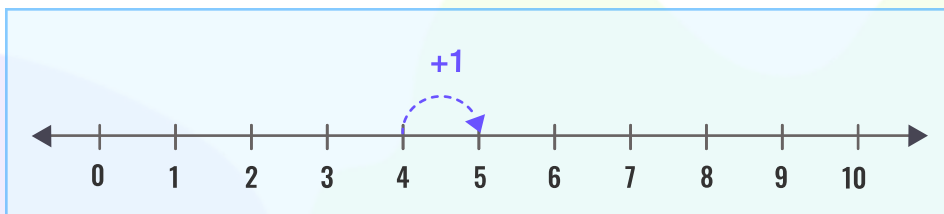
Download the Curriculum-based INFIQ Digital Workbook from the App Store for **UNLIMITED QUESTIONS**



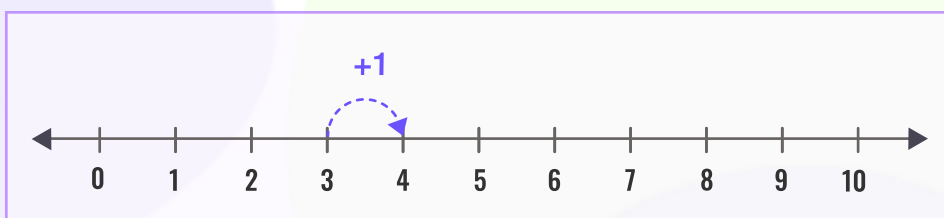
Name _____

Date _____

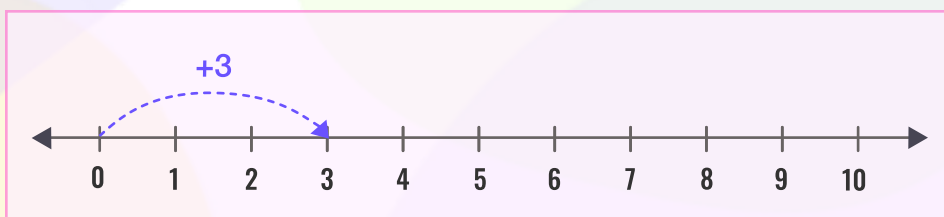
Complete the addition sentences using the number line



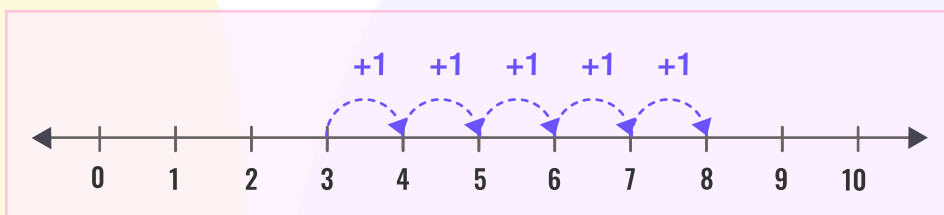
$$4 + 1 = \underline{\quad}$$



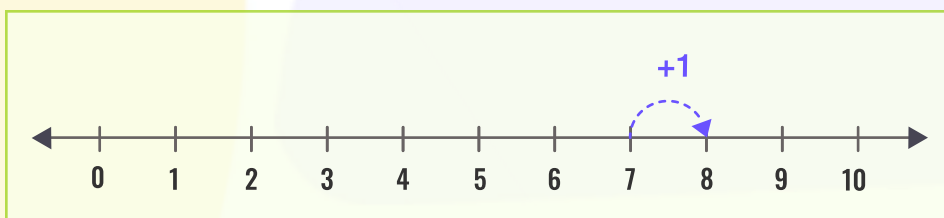
$$3 + \underline{\quad} = 4$$



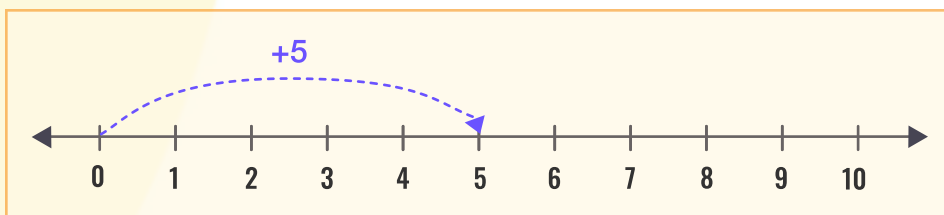
$$\underline{\quad} + 3 = 3$$



$$3 + \underline{\quad} = 8$$



$$7 + 1 = \underline{\quad}$$



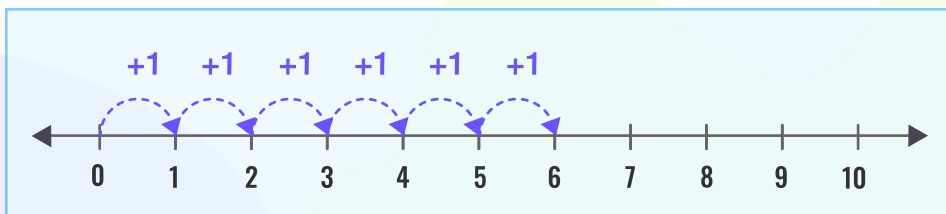
$$0 + 5 = \underline{\quad}$$



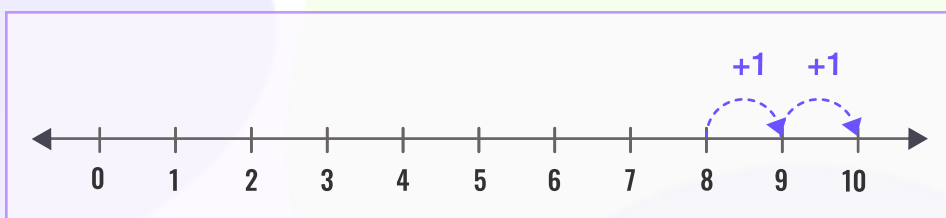
Name _____

Date _____

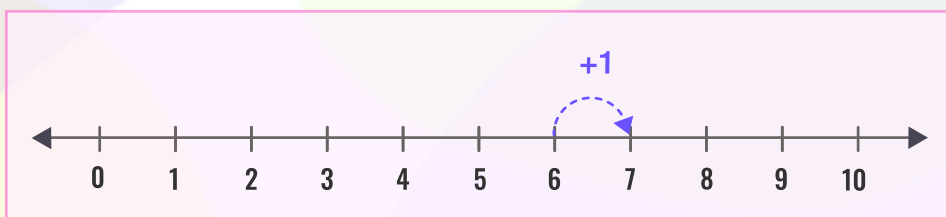
Complete the addition sentences using the number line



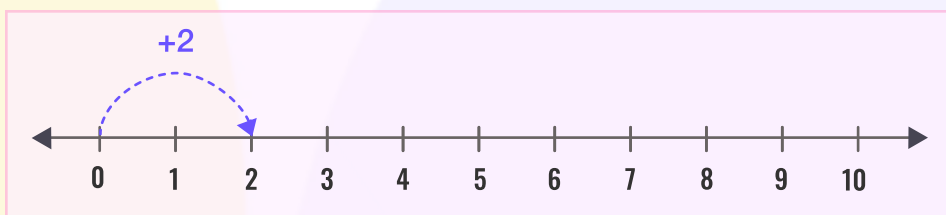
$$0 + 6 = \underline{\quad}$$



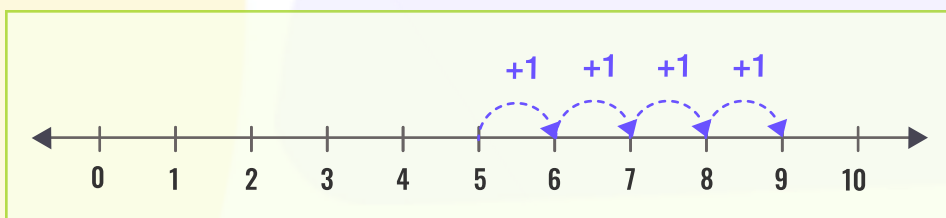
$$8 + 2 = \underline{\quad}$$



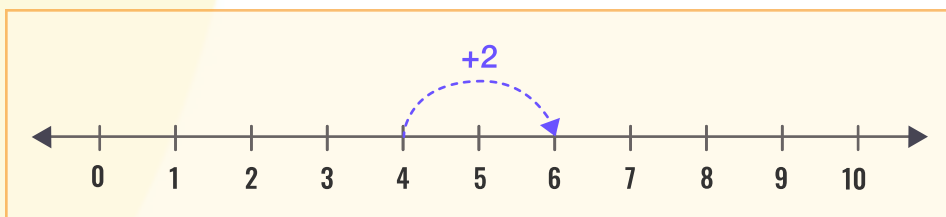
$$\underline{\quad} + 1 = 7$$



$$0 + \underline{\quad} = 2$$



$$5 + 4 = \underline{\quad}$$



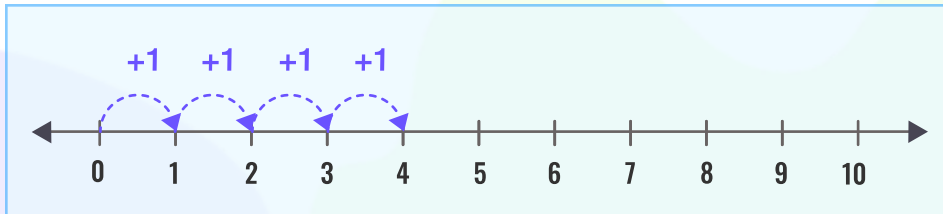
$$4 + \underline{\quad} = 6$$



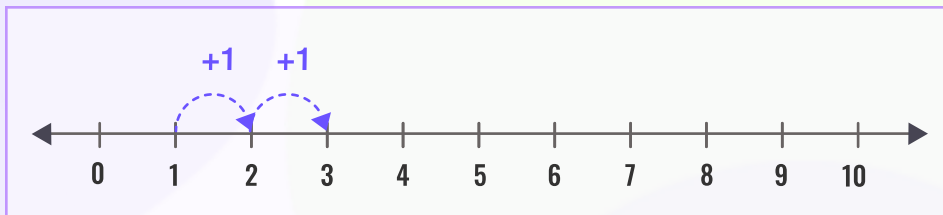
Name _____

Date _____

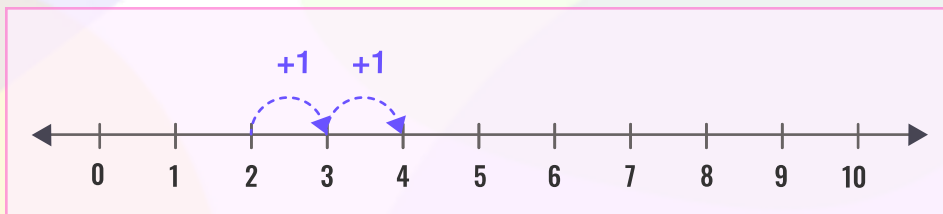
Complete the addition sentences using the number line



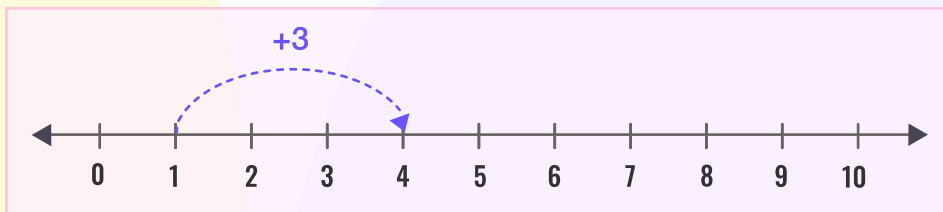
$$\underline{\quad} + 4 = 4$$



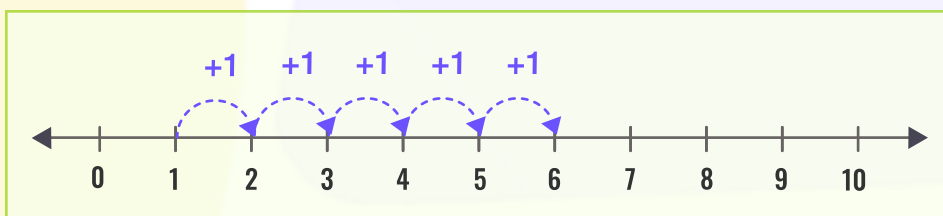
$$1 + 2 = \underline{\quad}$$



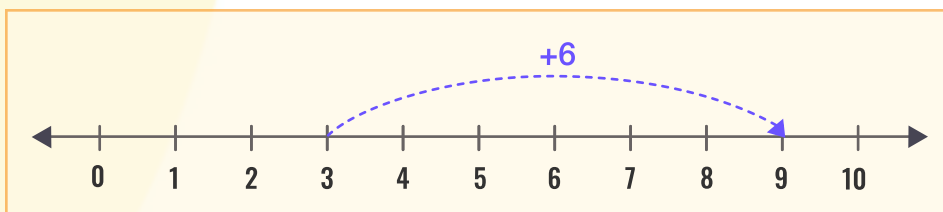
$$\underline{\quad} + 2 = 4$$



$$1 + \underline{\quad} = 4$$



$$1 + 5 = \underline{\quad}$$



$$3 + \underline{\quad} = 9$$

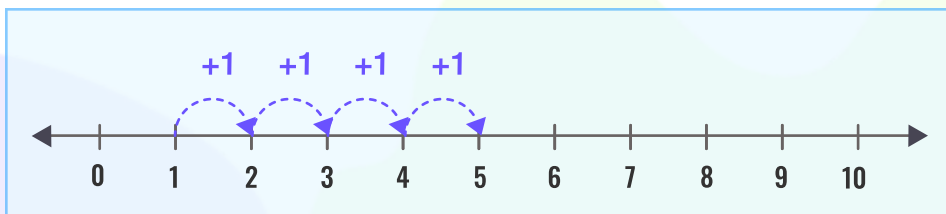
Download the Curriculum-based INFIQ Digital Workbook from the App Store for UNLIMITED QUESTIONS



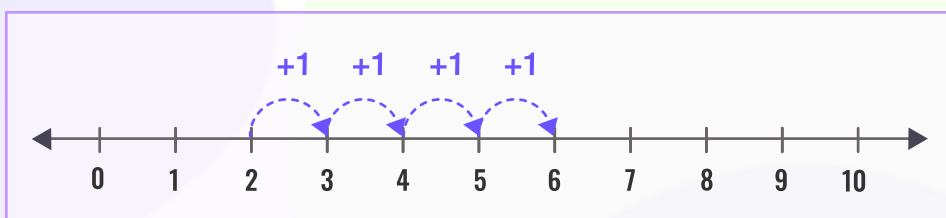
Name _____

Date _____

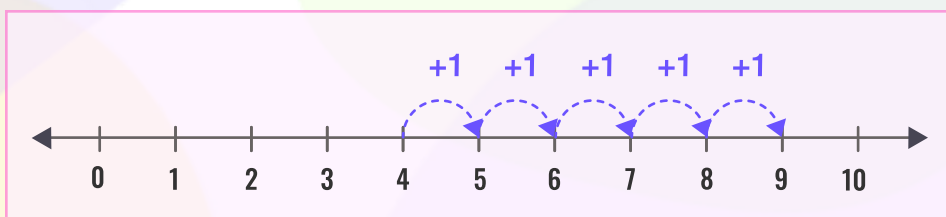
Complete the addition sentences using the number line



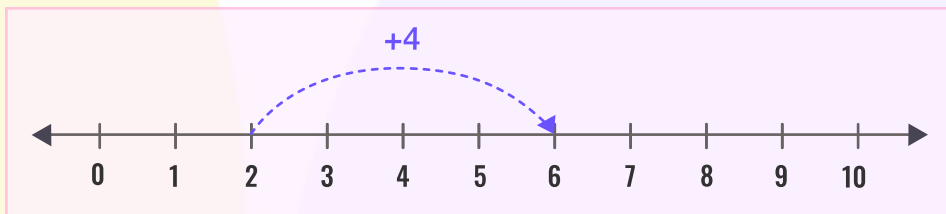
$$\underline{\quad} + 4 = 5$$



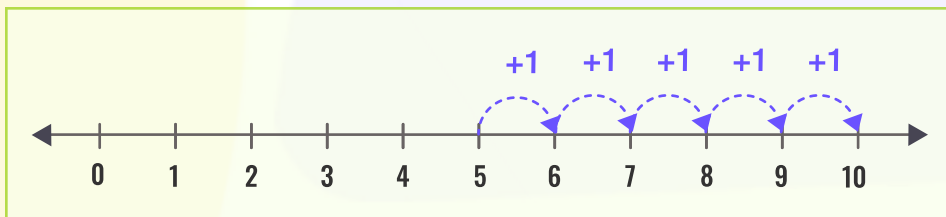
$$2 + 4 = \underline{\quad}$$



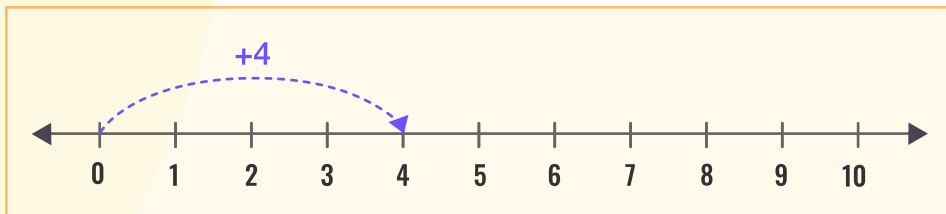
$$\underline{\quad} + 5 = 9$$



$$2 + \underline{\quad} = 6$$



$$5 + 5 = \underline{\quad}$$



$$0 + \underline{\quad} = 4$$



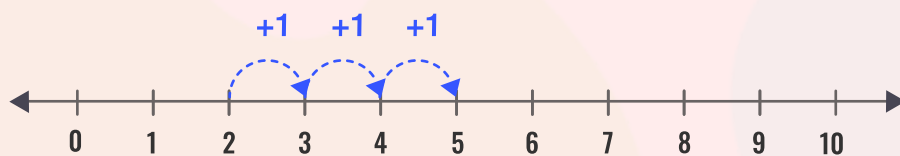
Name _____

Date _____

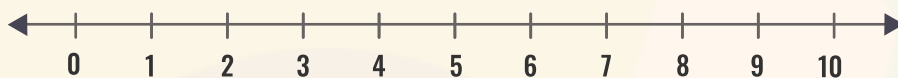
Add the numbers by using the number line.

(First one is done for you)

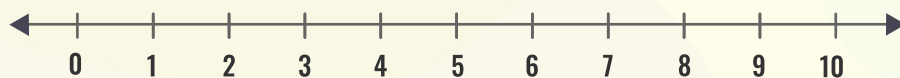
$$2 + 3 = \underline{5}$$



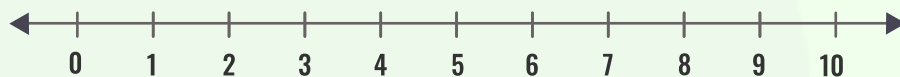
$$8 + 1 = \underline{\quad}$$



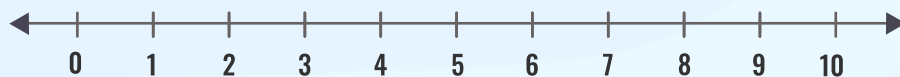
$$4 + 5 = \underline{\quad}$$



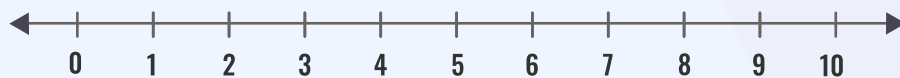
$$6 + 4 = \underline{\quad}$$



$$2 + 8 = \underline{\quad}$$



$$3 + 7 = \underline{\quad}$$





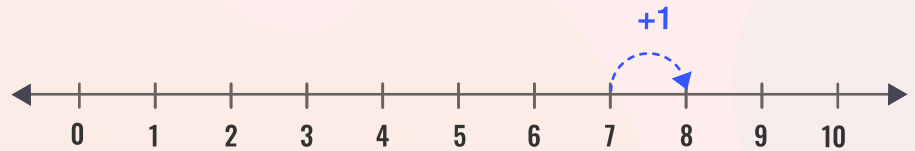
Name _____

Date _____


Add the numbers by using the number line.

(First one is done for you)

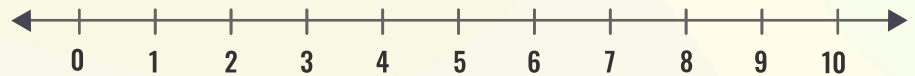
$$7 + 1 = \underline{8}$$



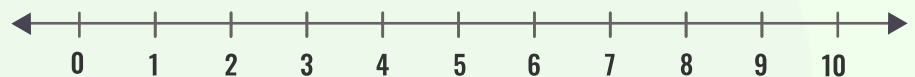
$$2 + 7 = \underline{\quad}$$



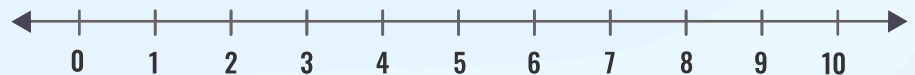
$$2 + 6 = \underline{\quad}$$



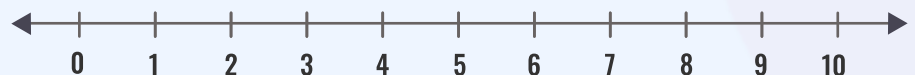
$$1 + 9 = \underline{\quad}$$



$$0 + 9 = \underline{\quad}$$



$$4 + 3 = \underline{\quad}$$





Name _____

Date _____

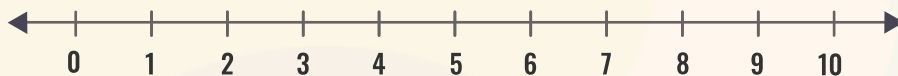
Add the numbers by using the number line.

(First one is done for you)

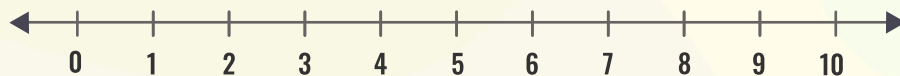
$$6 + 3 = \underline{9}$$



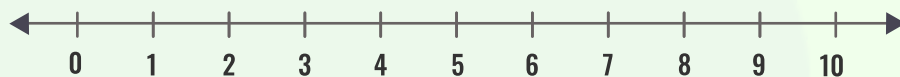
$$1 + 8 = \underline{\quad}$$



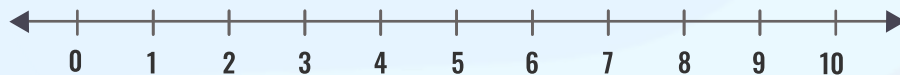
$$0 + 10 = \underline{\quad}$$



$$1 + 7 = \underline{\quad}$$



$$0 + 4 = \underline{\quad}$$



$$2 + 5 = \underline{\quad}$$

