

Add Single Digit Numbers - Adding with Pictures - Up To 10

Name \_\_\_\_\_


Date \_\_\_\_\_

**How many monsters?**

Count the number of monsters for each group and write the sum.



1




$3 + 4 = \underline{\quad}$

2



$1 + 1 = \underline{\quad}$

3




$2 + 2 = \underline{\quad}$

4




$5 + 3 = \underline{\quad}$

5



$4 + 1 = \underline{\quad}$

6



$6 + 1 = \underline{\quad}$