







Name _____

Date _____

How many umbrellas? (Count the number of umbrellas for each group and write the sum.)

 +  = _____

 +  = _____

 +  = _____

 +  = _____

 +  = _____

 +  = _____

 +  = _____