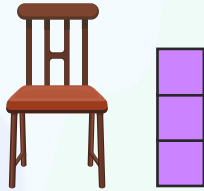




Name _____

Date _____


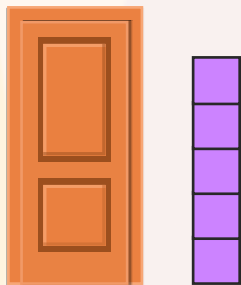
Compare and write the correct answer



The chair is taller than 3 cubes.

The table is shorter than 3 cubes.

The chair is _____ than the table.



The door is taller than 5 cubes.

The window is shorter than 5 cubes.

The window is _____ than the door.