

Grade 01

DOWNLOAD THE APP FROM THE APP STORE

MATH WORKBOOK

INFIQ



DOWNLOAD THE INFIQ APP FOR INFINITE QUIZZES

Because Math Needs Practice

More worksheets at www.getinfiq.education

Measurement Order By Length

Background filled with various math concepts and diagrams:

- $A = L \times b$
- $p = 24 \text{ cm}$
- $f(x)$
- x/y
- $\frac{x}{2} = \frac{2}{4}$
- $1 \text{ Mile} = 5,280 \text{ Feet}$
- $(a + b)c = (a + b) + (a + c)$
- $\pi = 3.14$
- $\sqrt{9} = \sqrt{3 \times 3} = 3$
- $a^2 + b^2 = c^2$
- $9678 > 8967 > 7896 > 6789$
- $(a+b)^2 = a^2 + b^2 + 2ab$
- $x = \frac{-b \pm \sqrt{b^2 - 4ac}}{2a}$
- $ax^2 + bx + c = 0$
- $V = \pi r^2 h$
- Area = $2(1+b)$
- One and Two Tens
- $3 + 2 = 5$





INFIQ GRADE 1 WORKSHEETS



Measurement - Order By Length



Name _____

Date _____

Circle the shorter item in each group

| | |
|---|---|
| <p>A</p>  | <p>B</p>  |
|---|---|

| | |
|---|---|
| <p>A</p>  | <p>B</p>  |
|---|---|

| | |
|---|---|
| <p>A</p>  | <p>B</p>  |
|---|---|

Download the Curriculum-based **INFIQ** Digital Workbook from the App Store for **UNLIMITED QUESTIONS**





INFIQ GRADE 1 WORKSHEETS



Measurement - Order By Length



Name _____

Date _____

Circle the taller item in each group

| | |
|---|---|
| <p>A</p>  | <p>B</p>  |
|---|---|

| | |
|---|---|
| <p>A</p>  | <p>B</p>  |
|---|---|

| | |
|---|---|
| <p>A</p>  | <p>B</p>  |
|---|---|

Download the Curriculum-based **INFIQ** Digital Workbook from the App Store for **UNLIMITED QUESTIONS**




INFIQ GRADE 1 WORKSHEETS


Measurement - Order By Length

Name _____

Date _____


Circle the shorter item in each group


A 


B 

A 

B 

A 


B 


A 

B 

A 

B 

A 

B 

Download the Curriculum-based **INFIQ** Digital Workbook from the App Store for **UNLIMITED QUESTIONS**



INFIQ GRADE 1 WORKSHEETS

Measurement - Order By Length


Name _____

Date _____

Circle the longer item in each group

A 


B 


A 

B 

A 


B 


A 

B 

A 

B 

A 

B 

Download the Curriculum-based **INFIQ** Digital Workbook from the App Store for **UNLIMITED QUESTIONS**



INFIQ GRADE 1 WORKSHEETS




Measurement - Order By Length




Name _____




Date _____

Write A, B or C in each box to order the items from the shortest to the tallest.

Arrange from the shortest on the left to the tallest on the right

| | | |
|--|--|--|
| A  | B  | C  |
| <input type="text"/> < <input type="text"/> < <input type="text"/> | | |

| | | |
|--|---|--|
| A  | B  | C  |
| <input type="text"/> < <input type="text"/> < <input type="text"/> | | |

| | | |
|--|--|--|
| A  | B  | C  |
| <input type="text"/> < <input type="text"/> < <input type="text"/> | | |

Download the Curriculum-based **INFIQ** Digital Workbook from the App Store for **UNLIMITED QUESTIONS**



INFIQ GRADE 1 WORKSHEETS




Measurement - Order By Length




Name _____




Date _____

Write A, B or C in each box to order the items from the tallest to the shortest.

Arrange from the tallest on the left to the shortest on the right

| | | |
|---|---|---|
| <p>A</p>  <input type="text"/> | <p>B</p>  <input type="text"/> | <p>C</p>  <input type="text"/> |
|---|---|---|

| | | |
|---|---|---|
| <p>A</p>  <input type="text"/> | <p>B</p>  <input type="text"/> | <p>C</p>  <input type="text"/> |
|---|---|---|

| | | |
|---|---|---|
| <p>A</p>  <input type="text"/> | <p>B</p>  <input type="text"/> | <p>C</p>  <input type="text"/> |
|---|---|---|

Download the Curriculum-based **INFIQ** Digital Workbook from the App Store for **UNLIMITED QUESTIONS**



INFIQ GRADE 1 WORKSHEETS

Measurement - Order By Length

Name _____

Date _____

Write A, B or C in each circle to order the items from the shortest to the longest.

Arrange from the shortest on the left to the longest on the right

| | |
|---|--|
| A | |
| B | |
| C | |

| | | | | |
|--|---|--|---|--|
| | , | | , | |
|--|---|--|---|--|

| | |
|---|--|
| A | |
| B | |
| C | |

| | | | | |
|--|---|--|---|--|
| | , | | , | |
|--|---|--|---|--|

| | |
|---|--|
| A | |
| B | |
| C | |

| | | | | |
|--|---|--|---|--|
| | , | | , | |
|--|---|--|---|--|

Download the Curriculum-based **INFIQ** Digital Workbook from the App Store for **UNLIMITED QUESTIONS**



INFIQ GRADE 1 WORKSHEETS




Measurement - Order By Length

Name _____




Date _____

Write A, B or C in each circle to order the items from the longest to the shortest.




Arrange from the longest on the left to the shortest on the right

| | |
|----------|---|
| A |  |
| B |  |
| C |  |

○, ○, ○

| | |
|----------|---|
| A |  |
| B |  |
| C |  |

○, ○, ○

| | |
|----------|---|
| A |  |
| B |  |
| C |  |

○, ○, ○

Download the Curriculum-based **INFIQ** Digital Workbook from the App Store for **UNLIMITED QUESTIONS**



INFIQ GRADE 1 WORKSHEETS




Measurement - Order By Length




Name _____




Date _____

Write A, B or C in each box to order the items from the shortest to the tallest.

Arrange from the shortest on the left to the tallest on the right

| | | |
|--|--|--|
| A  | B  | C  |
| <input type="text"/> , <input type="text"/> , <input type="text"/> | | |

| | | |
|--|--|---|
| A  | B  | C  |
| <input type="text"/> , <input type="text"/> , <input type="text"/> | | |

| | | |
|--|--|--|
| A  | B  | C  |
| <input type="text"/> , <input type="text"/> , <input type="text"/> | | |

Download the Curriculum-based **INFIQ** Digital Workbook from the App Store for **UNLIMITED QUESTIONS**



INFIQ GRADE 1 WORKSHEETS

Measurement - Order By Length

Name _____

Date _____

Write A, B or C in each circle to order the items from the longest to the shortest.

Arrange from the longest on the left to the shortest on the right

| | | |
|----------|--|--|
| A | | |
| B | | |
| C | | |

| | | |
|----------|--|--|
| A | | |
| B | | |
| C | | |

| | | |
|----------|--|--|
| A | | |
| B | | |
| C | | |

Download the Curriculum-based **INFIQ** Digital Workbook from the App Store for **UNLIMITED QUESTIONS**