

Grade 01

DOWNLOAD THE APP FROM THE APP STORE

MATH WORKBOOK

INFIQ



DOWNLOAD THE INFIQ APP FOR INFINITE QUIZZES

Because Math Needs Practice

More worksheets at www.getinfiq.education

Place Value Convert Between Forms

Background filled with various math concepts and formulas:

- $A = L \times b$
- $p = 24 \text{ cm}$
- $f(x)$
- x/y
- $\frac{x}{2} = \frac{2}{4}$
- $1 \text{ Mile} = 5,280 \text{ Feet}$
- $(a + b)c = (a + b) + (a + c)$
- $\pi = 3.14$
- $\sqrt{9} = \sqrt{3 \times 3} = 3$
- $a^2 + b^2 = c^2$
- $9678 > 8967 > 7896 > 6789$
- $(a+b)^2 = a^2 + b^2 + 2ab$
- $x = \frac{-b \pm \sqrt{b^2 - 4ac}}{2a}$
- $ax^2 + bx + c = 0$
- $V = \pi r^2 h$
- $3 + 2 = 5$
- $5x + 5 \sin x$
- Area = $2(1+b)$
- Area = $3 \times 3 = 9$
- Area = $4m \times 3m = 12m^2$
- 23
- 2
- 5
- $+$



INFIQ GRADE 1 WORKSHEETS



Place Value - Convert Between Forms



Name _____



Date _____



Match tens and ones to its number form.



Draw a line to connect the same number in both the columns.



 
65



 
72



 
57



 
98



 
32



 
49



 
23



 
10 + 10 + 10 + 1 + 1



 
2 Tens + 3 Ones

 
10 + 10 + 10 + 10 + 10 + 10
+ 5

 
10 + 10 + 10 + 10 + 1 + 1 +
1 + 1 + 1 + 1 + 1 + 1 + 1

 
10 + 10 + 10 + 10 + 10 + 7

 
72 Ones

 
9 Tens + 8 Ones

Download the Curriculum-based **INFIQ** Digital Workbook from the App Store for **UNLIMITED QUESTIONS**



INFIQ GRADE 1 WORKSHEETS



Place Value - Convert Between Forms



Name _____



Date _____



Match tens and ones to its number form.



Draw a line to connect the same number in both the columns.



 
54



 
46



 
91



 
35



 
51



 
87



 
25



 
2 Tens + 5 Ones



 
 $10 + 10 + 10 + 10 + 10 + 4$

 
87 Ones

 
 $10 + 10 + 10 + 10 + 10 + 1$

 
 $10 + 10 + 10 + 10 + 1 + 1 + 1 + 1 + 1 + 1$

 
 $10 + 10 + 10 + 5$

 
9 Tens + 1 One

Download the Curriculum-based **INFIQ** Digital Workbook from the App Store for **UNLIMITED QUESTIONS**



INFIQ GRADE 1 WORKSHEETS



Place Value - Convert Between Forms



Name _____



Date _____



Match tens and ones to its number form.



Draw a line to connect the same number in both the columns.



 
79



 
21



 
38



 
41



 
24



 
69



 
55



 
4 Tens + 1 One



 
69 Ones

 
7 Tens + 9 Ones

 
10 + 10 + 10 + 10 + 10 +
1 + 1 + 1 + 1 + 1

 
10 + 10 + 1

 
10 + 10 + 10 + 1 + 1 + 1 +
1 + 1 + 1 + 1 + 1

 
10 + 10 + 4

Download the Curriculum-based **INFIQ** Digital Workbook from the App Store for **UNLIMITED QUESTIONS**





Name _____


Date _____

Match tens and ones to its number form.

Draw a line to connect the same number in both the columns.



34



88



26

73

92



41



63



8 Tens + 8 Ones

$10 + 10 + 10 + 10 + 10 + 10$
 $+ 10 + 10 + 10 + 1 + 1$

$10 + 10 + 10 + 1 + 1 + 1 + 1$



$10 + 10 + 10 + 10 + 10 + 10 +$
 3

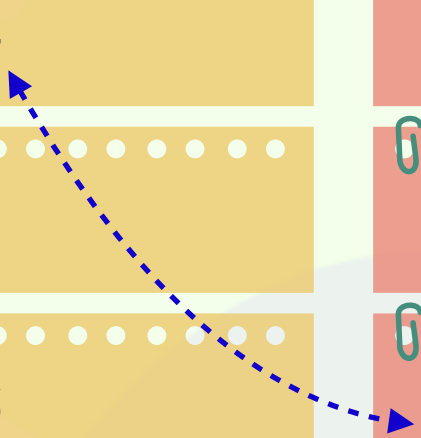
41 Ones

7 Tens + 3 Ones

$10 + 10 + 1 + 1 + 1 + 1 +$
 $1 + 1$





INFIQ GRADE 1 WORKSHEETS

Place Value - Convert Between Forms

Name _____

Date _____

Match tens and ones to its number form.

Draw a line to connect the same number in both the columns.

29

13

86

53

64

97

44

8 Tens + 6 Ones

$10 + 10 + 1 + 1 + 1 + 1 + 1 + 1 + 1 + 1 + 1 + 1$

44 Ones

$10 + 3$

$10 + 10 + 10 + 10 + 10 + 1 + 1 + 1$

$10 + 10 + 10 + 10 + 10 + 10 + 4$

9 Tens + 7 Ones

Download the Curriculum-based **INFIQ** Digital Workbook from the App Store for **UNLIMITED QUESTIONS**



INFIQ GRADE 1 WORKSHEETS

Place Value - Convert Between Forms

Name _____

Date _____

Circle the options that are same as the number.

For each case, circle all the correct answers.



64

A $10 + 10 + 10 + 10 + 10 + 1 + 1 + 1 + 1$

B 4 Tens + 6 Ones

C $10 + 10 + 10 + 10 + 10 + 10 + 1 + 1 + 1 + 1$



52

A $10 + 10 + 10 + 10 + 1 + 1$

B $50 + 2$

C $10 + 10 + 10 + 2$



71

A 71 Tens

B 7 Tens + 1 One

C $10 + 10 + 10 + 10 + 10 + 10 + 10 + 1$



15

A 15 Ones

B 5 Tens + 1 One

C $10 + 1 + 1 + 1 + 1$

Download the Curriculum-based **INFIQ** Digital Workbook from the App Store for **UNLIMITED QUESTIONS**



INFIQ GRADE 1 WORKSHEETS

Place Value - Convert Between Forms

Name _____

Date _____

Circle the options that are same as the number.

For each case, circle all the correct answers.



28

A 2 Tens + 8 Ones

B 28 Tens

C $10 + 10 + 1 + 1 + 1 + 1 + 1 + 1 + 1 + 1$



17

A 1 Ten + 7 Ones

B $10 + 1 + 1 + 1 + 1 + 1 + 1$

C $10 + 1 + 1 + 1 + 1 + 1 + 1 + 1 + 1$



82

A 2 Tens + 8 Ones

B $80 + 2$

C $10 + 10 + 10 + 10 + 10 + 10 + 10 + 1 + 1$



95

A 5 Tens + 9 Ones

B 9 Tens + 5 Ones

C $10 + 10 + 10 + 10 + 10 + 10 + 10 + 10 + 10 + 5$

Download the Curriculum-based **INFIQ** Digital Workbook from the App Store for **UNLIMITED QUESTIONS**



INFIQ GRADE 1 WORKSHEETS

Place Value - Convert Between Forms

Name _____

Date _____

Circle the options that are same as the number.

For each case, circle all the correct answers.


89

A 9 Tens + 8 Ones

B 89 Ones

C $10 + 10 + 10 + 10 + 10 + 10 + 10 + 10 + 9$


74

A 7 Tens + 4 Ones

B $10 + 10 + 10 + 10 + 10 + 10 + 10 + 10 + 4$

C $10 + 10 + 10 + 10 + 10 + 10 + 10 + 4$


27

A $10 + 10 + 1 + 1 + 1 + 1 + 1 + 1 + 1$

B 27 Tens

C $10 + 10 + 1 + 1 + 1 + 1 + 1 + 1 + 1 + 1$


48

A $40 + 8$

B 8 Tens + 4 Ones

C $10 + 10 + 10 + 8$

Download the Curriculum-based **INFIQ** Digital Workbook from the App Store for **UNLIMITED QUESTIONS**



INFIQ GRADE 1 WORKSHEETS

Place Value - Convert Between Forms

Name _____

Date _____

Circle the options that are same as the number.

For each case, circle all the correct answers.

62

A 62 Ones

B 6 Tens + 2 Ones

C $10 + 10 + 10 + 10 + 10 + 1 + 1$

25

A $10 + 10 + 1 + 1 + 1 + 1$

B 25 Tens

C $10 + 10 + 1 + 1 + 1 + 1 + 1$

53

A 3 Tens + 5 Ones

B $50 + 3$

C $10 + 10 + 10 + 10 + 10 + 1 + 1 + 1$

37

A $10 + 10 + 10 + 7$

B 7 Tens + 3 Ones

C $10 + 10 + 10 + 1 + 1 + 1 + 1 + 1 + 1$

Download the Curriculum-based **INFIQ** Digital Workbook from the App Store for **UNLIMITED QUESTIONS**



INFIQ GRADE 1 WORKSHEETS

Place Value - Convert Between Forms

Name _____

Date _____

Circle the options that are same as the number.

For each case, circle all the correct answers.

19

A 1 Ten + 9 Ones

B 19 Tens

C $10 + 1 + 1 + 1 + 1 + 1 + 1 + 1 + 1$

92

A 92 Tens

B 9 Tens + 2 Ones

C $10 + 10 + 10 + 10 + 10 + 10 + 10 + 10 + 1 + 1$

12

A 1 Ten + 2 Ones

B 12 Tens

C $10 + 2$

26

A $10 + 10 + 1 + 1 + 1 + 1 + 1 + 1 + 1$

B 6 Tens + 2 Ones

C $10 + 10 + 1 + 1 + 1 + 1 + 1 + 1 + 1$

Download the Curriculum-based **INFIQ** Digital Workbook from the App Store for **UNLIMITED QUESTIONS**