



Name _____


Date _____


Convert groups of ten to a number.


Complete the equation by writing the equivalent number.



2 Tens = _____



7 Tens = _____


9 Tens = _____



5 Tens = _____


6 Tens = _____


4 Tens = _____


8 Tens = _____


1 Ten = _____


3 Tens = _____

Complete the following sentences.**How many groups of ten are there in the number 70?**

The number 70 has _____ groups of ten.

How many groups of ten are there in the number 30?

The number 30 has _____ groups of ten.