

Grade 01

DOWNLOAD THE APP FROM THE APP STORE

MATH WORKBOOK

INFIQ



DOWNLOAD THE INFIQ APP FOR INFINITE QUIZZES

Because Math Needs Practice

More worksheets at www.getinfiq.education

Place Value Place Value Models

Background filled with various math concepts and diagrams:

- $A = L \times b$
- $p = 24 \text{ cm}$
- $f(x)$
- x/y
- $\frac{x}{2} = \frac{2}{4}$
- $1 \text{ Mile} = 5,280 \text{ Feet}$
- $(a+b)c = (a+b) + (a+o)$
- $\pi = 3.14$
- $\sqrt{9} = \sqrt{3 \times 3} = 3$
- $a^2 + b^2 = c^2$
- $9678 > 8967 > 7896 > 6789$
- $(a+b)^2 = a^2 + b^2 + 2ab$
- $x = \frac{-b \pm \sqrt{b^2 - 4ac}}{2a}$
- $ax^2 + bx + c = 0$
- $V = \pi r^2 h$
- Area = $2(1+b)$
- One and Two Tens
- $3 + 2 = 5$



INFIQ GRADE 1 WORKSHEETS

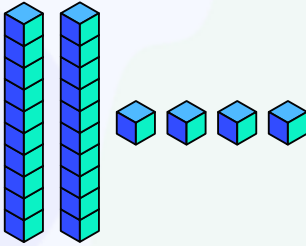
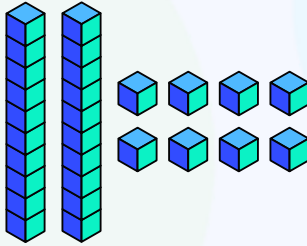
Place Value - Place Value Models

Name _____

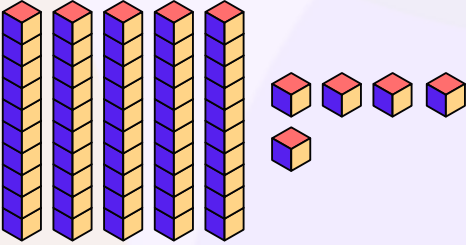
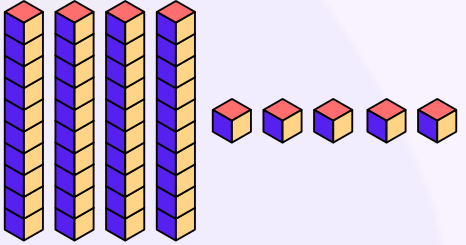
Date _____

Circle the correct answer

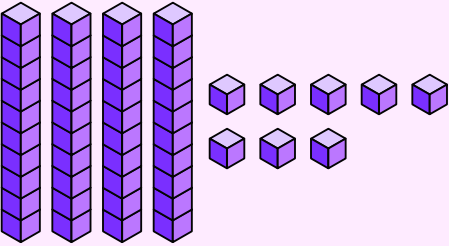
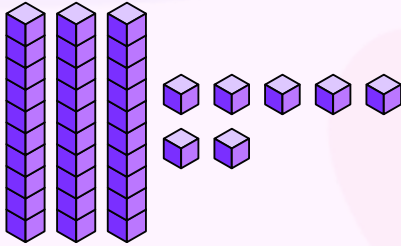
Which place value model shows **24**?

<p>A</p> 	<p>B</p> 
---	---

Which place value model shows **55**?

<p>A</p> 	<p>B</p> 
---	--

Which place value model shows **37**?

<p>A</p> 	<p>B</p> 
---	--

Download the Curriculum-based **INFIQ** Digital Workbook from the App Store for **UNLIMITED QUESTIONS**



INFIQ GRADE 1 WORKSHEETS

Place Value - Place Value Models

Name _____

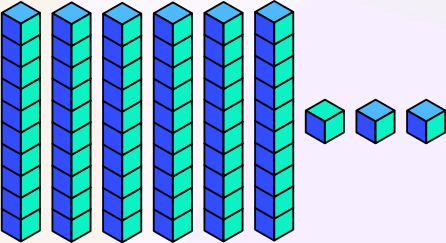
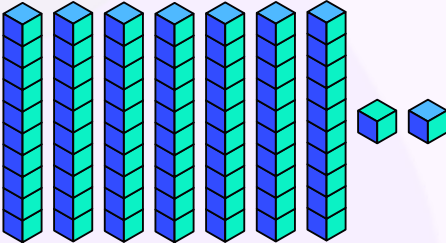
Date _____

Circle the correct answer

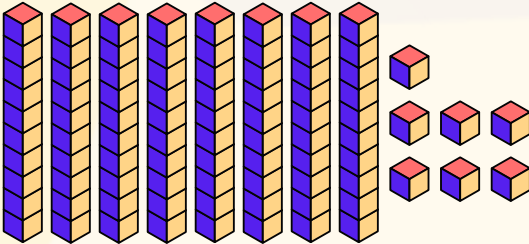
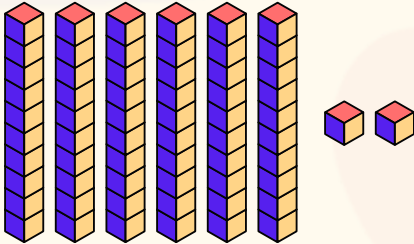
Which place value model shows **17**?

<p>A</p> 	<p>B</p> 
---	---

Which place value model shows **63**?

<p>A</p> 	<p>B</p> 
---	--

Which place value model shows **87**?

<p>A</p> 	<p>B</p> 
---	--

Download the Curriculum-based **INFIQ** Digital Workbook from the App Store for **UNLIMITED QUESTIONS**



INFIQ GRADE 1 WORKSHEETS

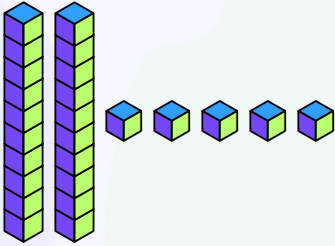
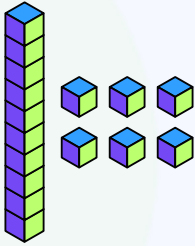
Place Value - Place Value Models

Name _____

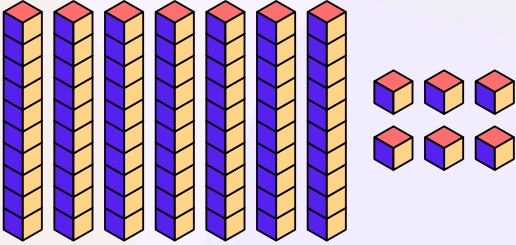

Date _____

Circle the correct answer

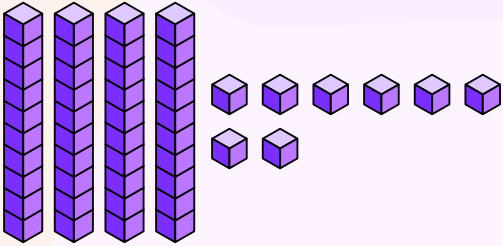
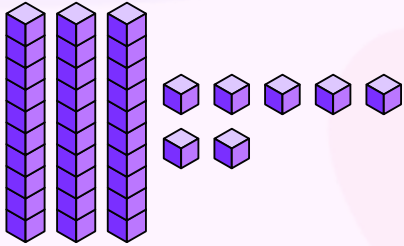
Which place value model shows **16**?

<p>A</p> 	<p>B</p> 
---	---

Which place value model shows **76**?

<p>A</p> 	<p>B</p> 
---	--

Which place value model shows **48**?

<p>A</p> 	<p>B</p> 
---	--

Download the Curriculum-based **INFIQ** Digital Workbook from the App Store for **UNLIMITED QUESTIONS**



Name _____

Date _____

Circle the correct answer

Which place value model shows **46**?

A

A place value model showing 4 tens rods (each with 10 purple cubes) and 6 ones units (purple cubes). There are 40 cubes in the tens rods and 6 cubes in the ones units, totaling 46 cubes.

B

A place value model showing 3 tens rods (each with 10 purple cubes) and 6 ones units (purple cubes). There are 30 cubes in the tens rods and 6 cubes in the ones units, totaling 36 cubes.

Which place value model shows **95**?

A

A place value model showing 9 tens rods (each with 10 cubes, 5 blue on top and 5 yellow on bottom) and 5 ones units (cubes, 3 blue and 2 yellow). There are 90 cubes in the tens rods and 5 cubes in the ones units, totaling 95 cubes.

B

A place value model showing 8 tens rods (each with 10 cubes, 5 blue on top and 5 yellow on bottom) and 5 ones units (cubes, 3 blue and 2 yellow). There are 80 cubes in the tens rods and 5 cubes in the ones units, totaling 85 cubes.

Which place value model shows **58**?

A

A place value model showing 5 tens rods (each with 10 purple cubes) and 8 ones units (purple cubes). There are 50 cubes in the tens rods and 8 cubes in the ones units, totaling 58 cubes.

B

A place value model showing 5 tens rods (each with 10 purple cubes) and 13 ones units (purple cubes). There are 50 cubes in the tens rods and 13 cubes in the ones units, totaling 63 cubes.

Download the Curriculum-based **INFIQ** Digital Workbook from the App Store for **UNLIMITED QUESTIONS**



INFIQ GRADE 1 WORKSHEETS

Place Value - Place Value Models

Name _____

Date _____

Circle the correct answer

Which place value model shows **34**?

A

A place value model showing 3 tens rods (each with 10 purple cubes) and 4 ones cubes (purple).

B

A place value model showing 3 tens rods (each with 10 purple cubes) and 4 ones cubes (purple).

Which place value model shows **74**?

A

A place value model showing 7 tens rods (each with 10 cubes, 7 blue and 3 yellow) and 4 ones cubes (2 blue and 2 yellow).

B

A place value model showing 7 tens rods (each with 10 cubes, 7 blue and 3 yellow) and 4 ones cubes (2 blue and 2 yellow).

Which place value model shows **33**?

A

A place value model showing 3 tens rods (each with 10 purple cubes) and 3 ones cubes (purple).

B

A place value model showing 4 tens rods (each with 10 purple cubes) and 4 ones cubes (purple).

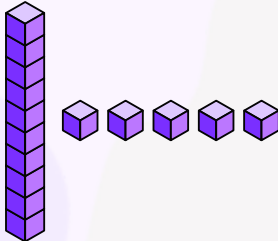
Download the Curriculum-based **INFIQ** Digital Workbook from the App Store for **UNLIMITED QUESTIONS**



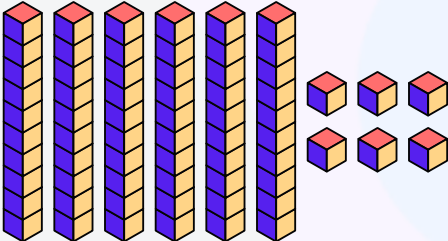
Name _____

Date _____

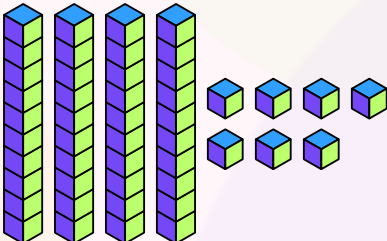
Complete




The place value model shows the number



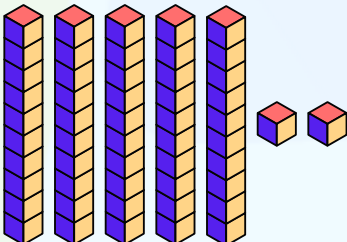
The place value model shows the number



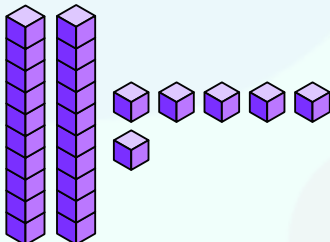
The place value model shows the number



The place value model shows the number



The place value model shows the number



The place value model shows the number



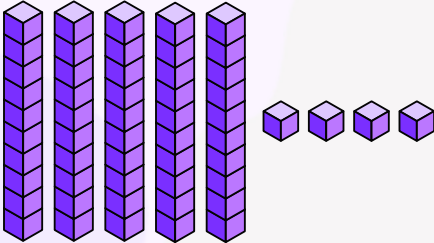
INFIQ GRADE 1 WORKSHEETS

Place Value - Place Value Models

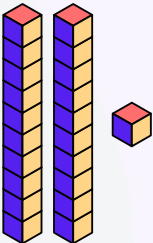
Name _____

Date _____

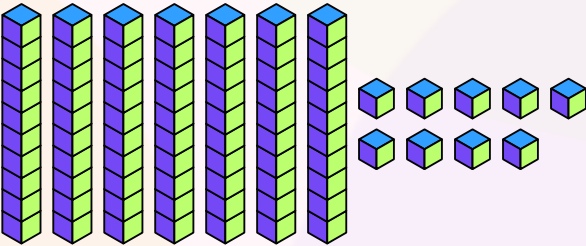
Complete



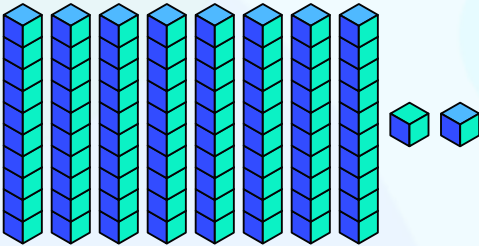
The place value model shows the number



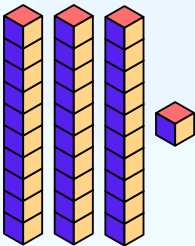
The place value model shows the number



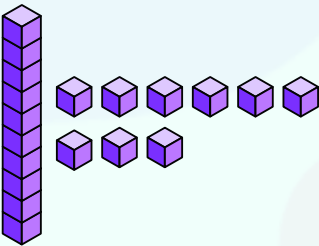
The place value model shows the number



The place value model shows the number



The place value model shows the number



The place value model shows the number

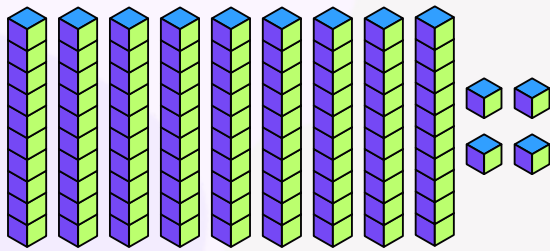
Download the Curriculum-based **INFIQ** Digital Workbook from the App Store for **UNLIMITED QUESTIONS**



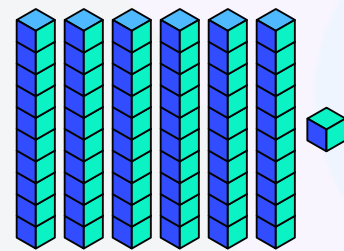
Name _____

Date _____

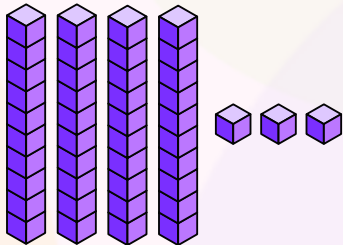
Complete



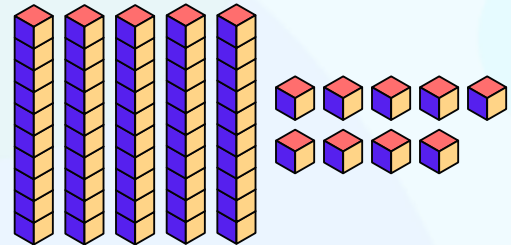
The place value model shows the number



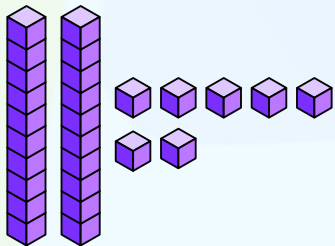
The place value model shows the number



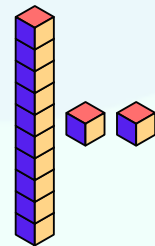
The place value model shows the number



The place value model shows the number



The place value model shows the number



The place value model shows the number



INFIQ GRADE 1 WORKSHEETS

Place Value - Place Value Models

Name _____

Date _____

Complete

The place value model shows the number

The place value model shows the number

The place value model shows the number

The place value model shows the number

The place value model shows the number

The place value model shows the number

Download the Curriculum-based **INFIQ** Digital Workbook from the App Store for **UNLIMITED QUESTIONS**




INFIQ GRADE 1 WORKSHEETS

Place Value - Place Value Models


Name _____

Date _____

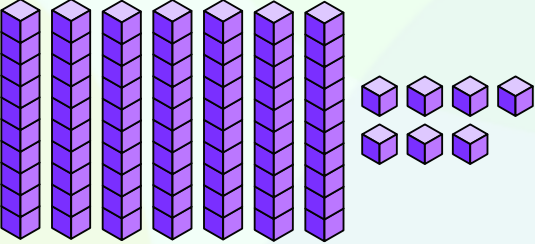
Complete



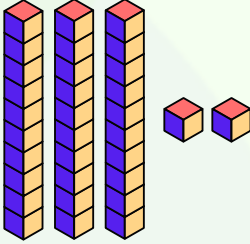
The place value model shows the number



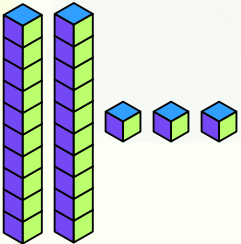
The place value model shows the number



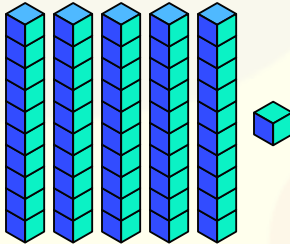
The place value model shows the number



The place value model shows the number



The place value model shows the number



The place value model shows the number

Download the Curriculum-based **INFIQ** Digital Workbook from the App Store for **UNLIMITED QUESTIONS**