

Grade 01

DOWNLOAD THE APP FROM THE APP STORE

MATH WORKBOOK

INFIQ



DOWNLOAD THE INFIQ APP FOR INFINITE QUIZZES

Because Math Needs Practice

More worksheets at www.getinfiq.education

Time Analog Clock

Background filled with various math concepts and formulas:


- $A = L \times b$
- $p = 24 \text{ cm}$
- $f(x)$
- x/y
- $\frac{x}{2} = \frac{2}{4}$
- $1 \text{ Mile} = 5,280 \text{ Feet}$
- $(a + b)c = (a + b) + (a + c)$
- $\pi = 3.14$
- $\sqrt{9} = \sqrt{3 \times 3} = 3$
- $a^2 + b^2 = c^2$
- $9678 > 8967 > 7896 > 6789$
- $(a+b)^2 = a^2 + b^2 + 2ab$
- $x = \frac{-b \pm \sqrt{b^2 - 4ac}}{2a}$
- $a^2x^2 + bx + c = 0$
- $V = \pi r^2 h$
- $3 + 2 = 5$
- $3 + 2 = 5$
- 5
- $+$



Name _____

Date _____


Where is the hour hand?



The hour hand is at ____



The hour hand is at ____



The hour hand is at ____



The hour hand is at ____



The hour hand is at ____



The hour hand is at ____



Name _____

Date _____

Where is the hour hand?



The hour hand is at ____



The hour hand is at ____



The hour hand is at ____



The hour hand is at ____



The hour hand is at ____



The hour hand is at ____



Name _____

Date _____

Where is the minute hand?



The minute hand is at ___



The minute hand is at ___



The minute hand is at ___



The minute hand is at ___



The minute hand is at ___



The minute hand is at ___



Name _____

Date _____

Where is the minute hand?



The minute hand is at __



The minute hand is at __



The minute hand is at __



The minute hand is at __



The minute hand is at __



The minute hand is at __


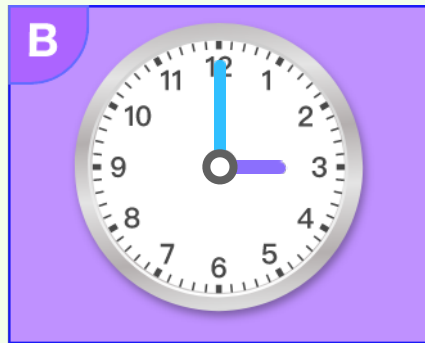



Name _____




Date _____

Circle the correct answer.

Which clock shows the minute hand at "3"?



Which clock shows the minute hand at "6"?



Which clock shows the minute hand at "9"?




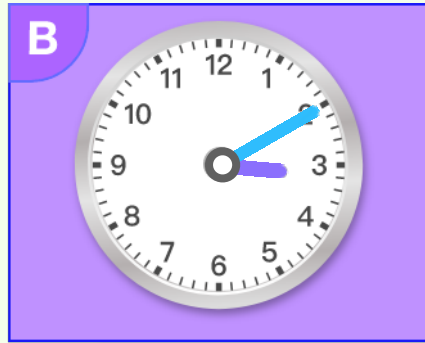



Name _____


Date _____

Circle the correct answer.


Which clock shows the minute hand at "1"?



Which clock shows the minute hand at "8"?



Which clock shows the minute hand at "10"?




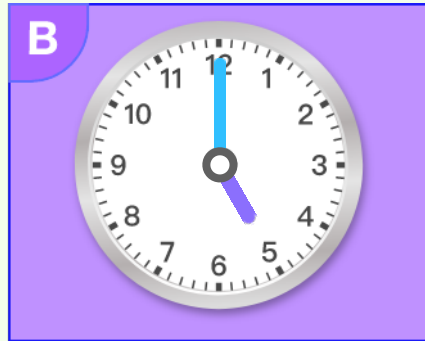



Name _____




Date _____

Circle the correct answer.



Which clock shows the hour hand at "5"?



Which clock shows the hour hand at "2"?



Which clock shows the hour hand at "11"?








Name _____


Date _____

Circle the correct answer.


Which clock shows the hour hand at "7"?



Which clock shows the hour hand at "4"?



Which clock shows the hour hand at "12"?





Name _____

Date _____

Circle the correct answer.

Which clock shows the hour hand at "9"?

A B C D

Which clock shows the hour hand at "1"?

A B C D

Which clock shows the hour hand at "3"?

A B C D



Name _____

Date _____

Circle the correct answer.

Which clock shows the minute hand at "10"?

A B C D

Which clock shows the minute hand at "8"?

A B C D

Which clock shows the minute hand at "6"?

A B C D