

Grade 01

DOWNLOAD THE APP FROM THE APP STORE

# MATH WORKBOOK

# INFIQ



DOWNLOAD THE INFIQ APP FOR INFINITE QUIZZES

Because Math Needs Practice

More worksheets at [www.getinfiq.education](http://www.getinfiq.education)

# Time

Relate Time to A.M. or P.M.

Background filled with various math concepts and formulas:

- $A = L \times b$
- $p = 24 \text{ cm}$
- $f(x)$
- $x/y$
- $\frac{x}{2} = \frac{2}{4}$
- $(a+b)c = (a+b) + (a+o)$
- $\pi = 3.14$
- $\sqrt{9} = \sqrt{3 \times 3} = 3$
- $a^2 + b^2 = c^2$
- $9678 > 8967 > 7896 > 6789$
- $(a+b)^2 = a^2 + b^2 + 2ab$
- $x = \frac{-b \pm \sqrt{b^2 - 4ac}}{2a}$
- $ax^2 + bx + c = 0$
- $V = \pi r^2 h$
- Area =  $2(1+b)$
- One and Two Tens
- $3 + 2 = 5$

# INFIQ GRADE 1 WORKSHEETS

## Time - Relate Time to A.M. or P.M.

Name \_\_\_\_\_

Date \_\_\_\_\_

Circle the correct answer.

Andrew is going to PE class, what time is it?

**A.** 10:15 p.m.

**B.** 10:15 a.m.



Justin is going to the market, what time is it?

**A.** 5:30 p.m.

**B.** 5:30 a.m.



Mike is late and got a tardy slip, what time is it?

**A.** 9:30 a.m.

**B.** 9:30 p.m.



Nick is playing Minecraft, what time is it?

**A.** 4:30 a.m.

**B.** 4:30 p.m.





# INFIQ GRADE 1 WORKSHEETS

## Time - Relate Time to A.M. or P.M.

Name \_\_\_\_\_

Date \_\_\_\_\_

Circle the correct answer.

Chris is getting ready for school, what time is it?

**A.** 7:00 a.m.

**B.** 7:00 p.m.



Bruce's mom is setting the dinner table, what time is it?

**A.** 7:30 a.m.

**B.** 7:30 p.m.



Jordan participates in after-school sports, what time is it?

**A.** 4:00 p.m.

**B.** 4:00 a.m.



Aaron is going for his morning jog, what time is it?

**A.** 8:00 p.m.

**B.** 8:00 a.m.





# INFIQ GRADE 1 WORKSHEETS

## Time - Relate Time to A.M. or P.M.

Name \_\_\_\_\_

Date \_\_\_\_\_

Circle the correct answer.

Jay is going to bed, what time is it?

**A.** 8:45 p.m.

**B.** 8:45 a.m.



David is reading a bedtime story, what time is it?

**A.** 8:30 a.m.

**B.** 8:30 p.m.



Aiden's dad is watching the morning news, what time is it?

**A.** 6:30 p.m.

**B.** 6:30 a.m.



Oliver is taking the school bus to school, what time is it?

**A.** 7:45 a.m.

**B.** 7:45 p.m.



Download the Curriculum-based **INFIQ** Digital Workbook from the App Store for **UNLIMITED QUESTIONS**

# INFIQ GRADE 1 WORKSHEETS

## Time - Relate Time to A.M. or P.M.

Name \_\_\_\_\_

Date \_\_\_\_\_

Circle the correct answer.

Trent is having dinner, what time is it?

**A.** 7:00 a.m.

**B.** 7:00 p.m.



Wyatt's parents are getting ready for work, what time is it?

**A.** 7:30 a.m.

**B.** 7:30 p.m.



Caden went for a playdate after school, what time is it?

**A.** 6:30 a.m.

**B.** 6:30 p.m.



Jaxon and his friends are having a campfire, what time is it?

**A.** 9:45 a.m.

**B.** 9:45 p.m.





# INFIQ GRADE 1 WORKSHEETS

## Time - Relate Time to A.M. or P.M.

Name \_\_\_\_\_

Date \_\_\_\_\_

Circle the correct answer.

William is brushing before school, what time is it?

**A.** 6:30 a.m.

**B.** 6:30 p.m.



Mason is eating cereal before school, what time is it?

**A.** 7:15 a.m.

**B.** 7:15 p.m.



Nolan is getting into his pajamas, what time is it?

**A.** 9:15 a.m.

**B.** 9:15 p.m.



Lucas is waking up for school, what time is it?

**A.** 6:00 a.m.

**B.** 6:00 p.m.





# INFIQ GRADE 1 WORKSHEETS

## Time - Relate Time to A.M. or P.M.

Name \_\_\_\_\_


Date \_\_\_\_\_

Do these activities typically take place in the a.m. or p.m.?

Riding a bicycle to school. 

a) 7:50 p.m.

b) 7:50 a.m.

Doing homework. 

a) 5:00 a.m.

b) 5:00 p.m.

Eating dessert after dinner. 


a) 8:00 p.m.

b) 8:00 a.m.

Someone says 'good morning'. 

a) 9:30 a.m.

b) 9:30 p.m.

The morning school bell goes off. 

a) 8:15 p.m.

b) 8:15 a.m.



# INFIQ GRADE 1 WORKSHEETS

## Time - Relate Time to A.M. or P.M.

Name \_\_\_\_\_


Date \_\_\_\_\_

Do these activities typically take place in the a.m. or p.m.?

Going to church in the morning 


a) 10:45 a.m.

b) 10:45 p.m.

Morning walk. 


a) 6:00 a.m.

b) 6:00 p.m.

Watching the morning news. 


a) 7:15 p.m.

b) 7:15 a.m.

Parents getting ready for work. 

a) 5:50 p.m.

b) 5:50 a.m.

Taking a nap after lunch. 

a) 2:00 a.m.

b) 2:00 p.m.





# INFIQ GRADE 1 WORKSHEETS

## Time - Relate Time to A.M. or P.M.

Name \_\_\_\_\_

Date \_\_\_\_\_

Do these activities typically take place in the a.m. or p.m.?

Library opens. 

a) 9:30 p.m.

b) 9:30 a.m.

Getting ready for school. 

a) 6:45 a.m.

b) 6:45 p.m.

Reading a bedtime story. 


a) 10:30 p.m.

b) 10:30 a.m.

Brushing before school. 

a) 6:15 a.m.

b) 6:15 p.m.

Taking the school bus to school. 

a) 8:00 p.m.

b) 8:00 a.m.



# INFIQ GRADE 1 WORKSHEETS

## Time - Relate Time to A.M. or P.M.

Name \_\_\_\_\_

Date \_\_\_\_\_

Do these activities typically take place in the a.m. or p.m.?

Doing homework.

a) 4:45 p.m.

b) 4:45 a.m.

Wearing a pajama.

a) 8:50 a.m.

b) 8:50 p.m.

The morning alarm goes off.

a) 7:00 p.m.

b) 7:00 a.m.

Playing Minecraft after school.

a) 6:15 p.m.

b) 6:15 a.m.

Waking up for school.

a) 5:50 a.m.

b) 5:50 p.m.

Seeing stars at night.

a) 9:30 a.m.

b) 9:30 p.m.



# INFIQ GRADE 1 WORKSHEETS

## Time - Relate Time to A.M. or P.M.

Name \_\_\_\_\_

Date \_\_\_\_\_

Do these activities typically take place in the a.m. or p.m.?

Eating cereal before school.

a) 7:45 p.m.

b) 7:45 a.m.

Playing in the pool.

a) 4:15 p.m.

b) 4:15 a.m.

Having dinner.

a) 8:00 a.m.

b) 8:00 p.m.

Attending piano lessons after school.

a) 5:40 p.m.

b) 5:40 a.m.

Sun set.

a) 6:30 p.m.

b) 6:30 a.m.

Going to bed.

a) 9:00 p.m.

b) 9:00 a.m.



# INFIQ GRADE 1 WORKSHEETS

## Time - Relate Time to A.M. or P.M.

Name \_\_\_\_\_

Date \_\_\_\_\_

Do these activities typically take place in the a.m. or p.m.?

Mall opens.

a) 10:30 p.m.

b) 10:00 a.m.

Having a campfire.

a) 8:55 a.m.

b) 8:55 p.m.

Morning jog.

a) 8:15 p.m.

b) 8:15 a.m.

After-school sports.

a) 5:00 p.m.

b) 5:00 a.m.

Setting the dinner table.

a) 7:45 a.m.

b) 7:45 p.m.

Watching TV after school.

a) 5:30 a.m.

b) 5:30 p.m.