



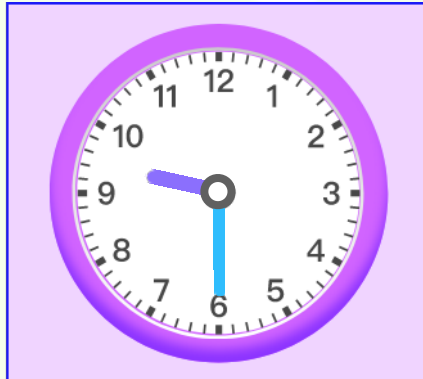
Name \_\_\_\_\_

Date \_\_\_\_\_

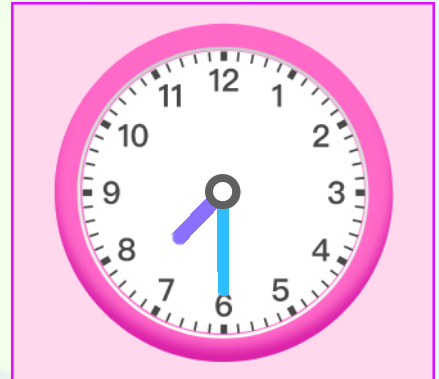
### Circle the time shown on the clock



- A** Half past Four
- B** Half past Five
- C** Five o'clock



- A** Nine o'clock
- B** Half past Nine
- C** Half past Ten



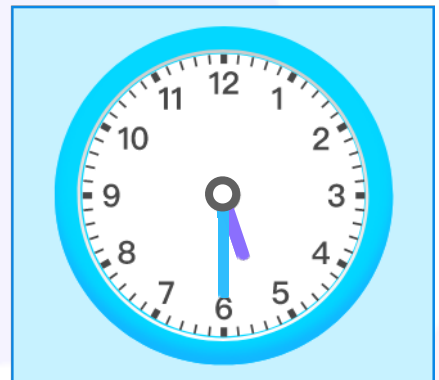
- A** 08:30 p.m.
- B** 08:00 p.m.
- C** 07:30 p.m.



- A** 11:30 a.m.
- B** 10:00 a.m.
- C** 10:30 a.m.



- A** Half past two
- B** Three o'clock
- C** Half past three



- A** 05:00 a.m.
- B** 05:30 a.m.
- C** 06:30 a.m.