

Grade 01

DOWNLOAD THE APP FROM THE APP STORE

MATH WORKBOOK

INFIQ



DOWNLOAD THE INFIQ APP FOR INFINITE QUIZZES

Because Math Needs Practice

More worksheets at www.getinfiq.education

Time

Tell Time to Half Hour

Background filled with math concepts:

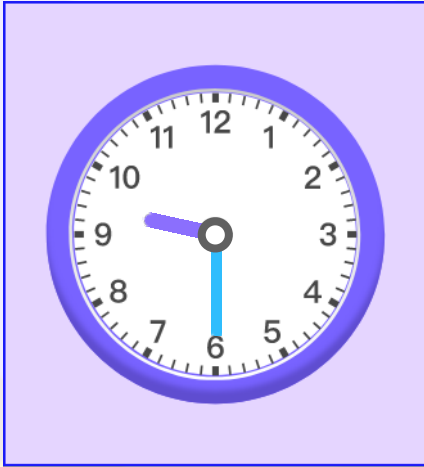
- Area: $A = L \times b$
- Perimeter: $p = 24 \text{ cm}$
- Volume: $V = \pi r^2 h$
- Algebra: $(a+b)c = (a+b) + (a+o)$, $x = \frac{-b \pm \sqrt{b^2 - 4ac}}{2a}$
- Geometry: $\pi = 3.14$, $\sqrt{9} = \sqrt{3 \times 3} = 3$, $a^2 + b^2 = c^2$
- Calculus: $f(x)$, x/y
- Statistics: Bar graphs, pie charts
- Other: $1 \text{ Mile} = 5,280 \text{ Feet}$, $9678 > 8967 > 7896 > 6789$



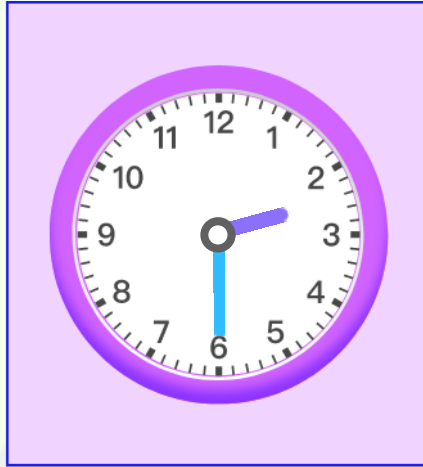
Name _____

Date _____


What time is shown on the clock?



: a.m.



: p.m.



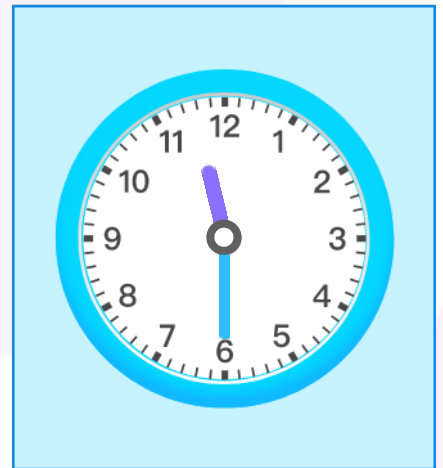
: p.m.



: a.m.



: a.m.



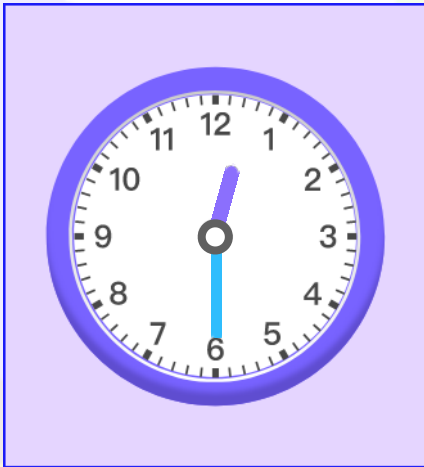
: p.m.



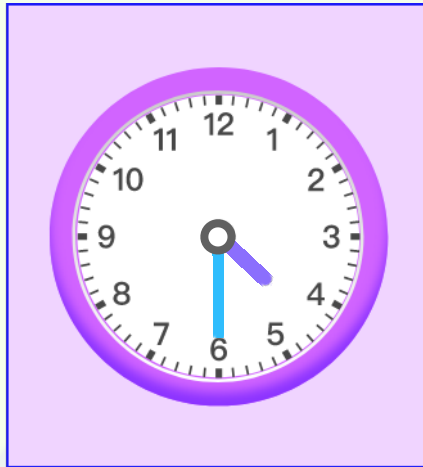
Name _____

Date _____


What time is shown on the clock?



: p.m.



: a.m.



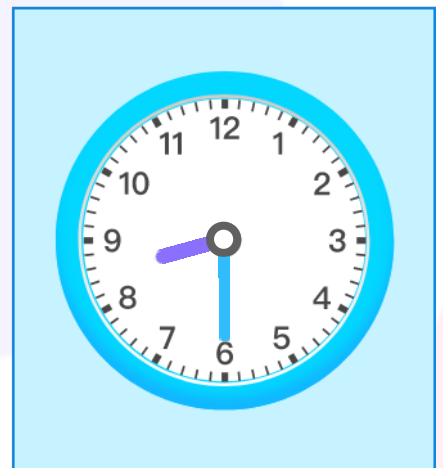
: p.m.



: a.m.



: p.m.



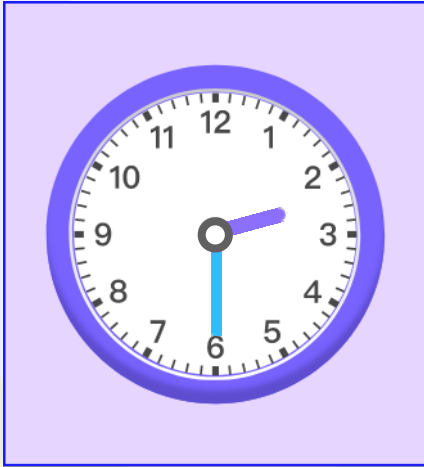
: a.m.



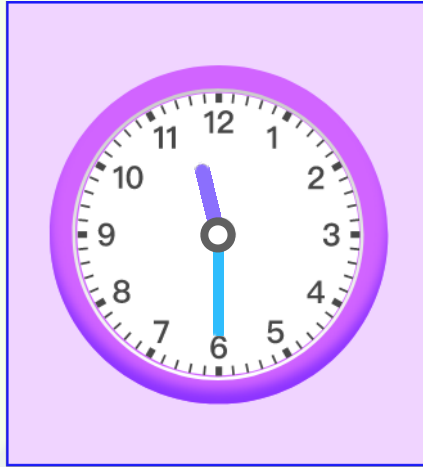
Name _____

Date _____


What time is shown on the clock?



: a.m.



: a.m.



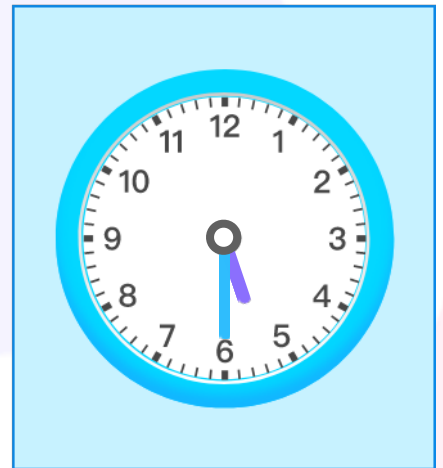
: p.m.



: p.m.



: p.m.



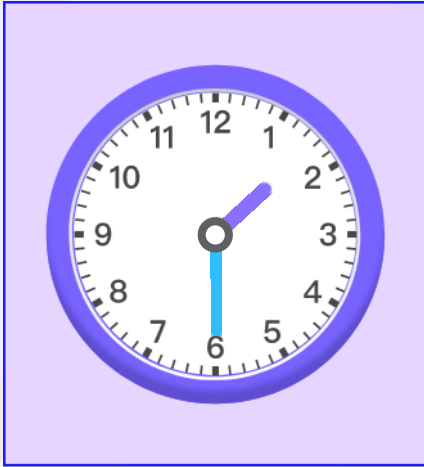
: a.m.



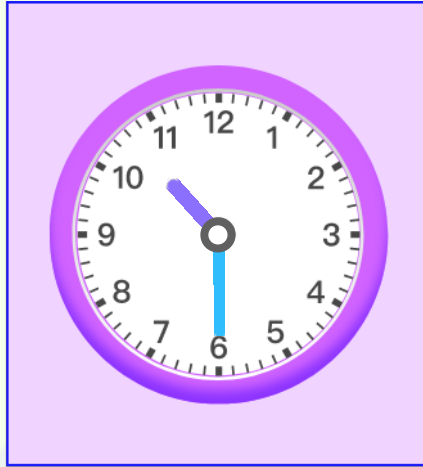
Name _____

Date _____

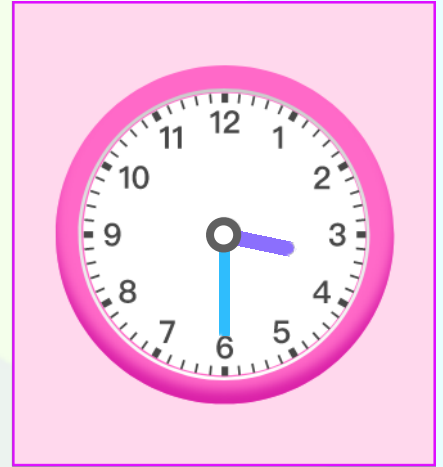
What time is shown on the clock?



: p.m.



: p.m.



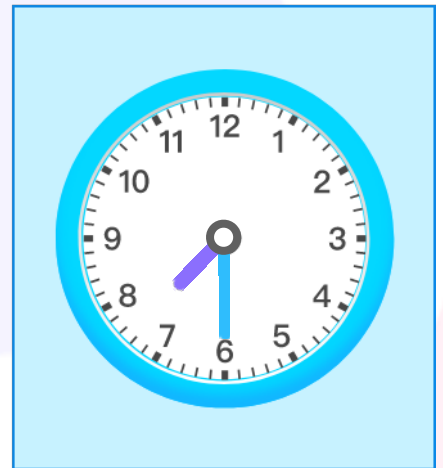
: p.m.



: a.m.



: a.m.



: a.m.



Name _____

Date _____

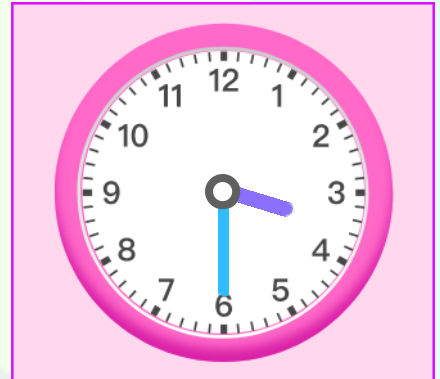
Circle the time shown on the clock



- A 10:30 a.m.
- B 12:30 a.m.
- C 11:30 a.m.



- A Half past Nine
- B Half past Eight
- C Eight o'clock



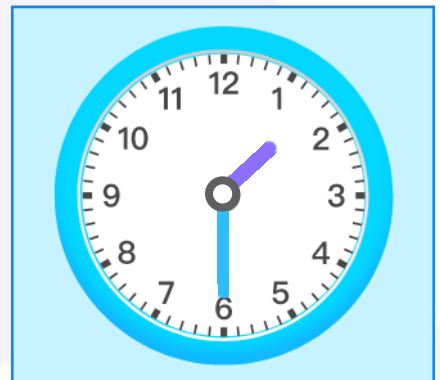
- A 03:30 a.m.
- B 04:00 a.m.
- C 04:30 a.m.



- A Half past Twelve
- B Half past One
- C One o'clock



- A 06:00 p.m.
- B 07:30 p.m.
- C 06:30 p.m.



- A Half past Two
- B Half past One
- C Two o'clock



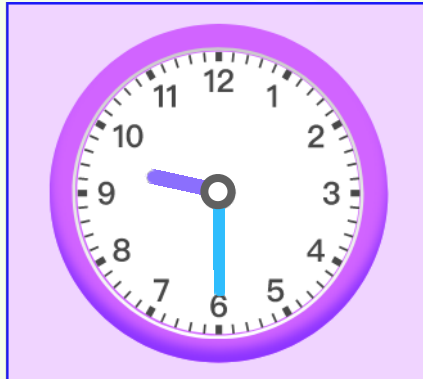
Name _____

Date _____

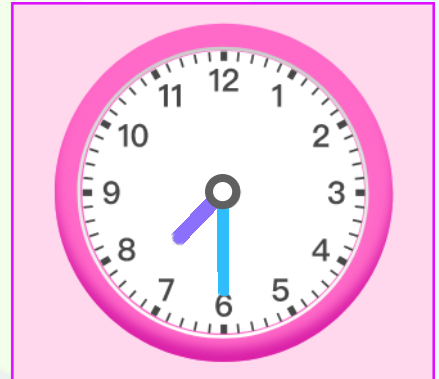
Circle the time shown on the clock



- A** Half past Four
- B** Half past Five
- C** Five o'clock



- A** Nine o'clock
- B** Half past Nine
- C** Half past Ten



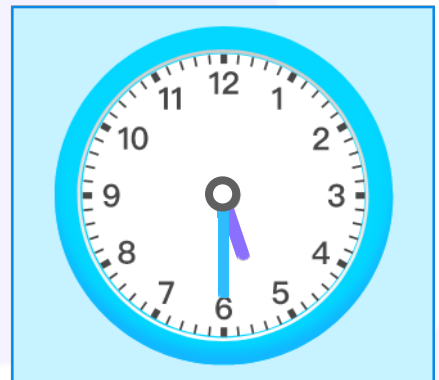
- A** 08:30 p.m.
- B** 08:00 p.m.
- C** 07:30 p.m.



- A** 11:30 a.m.
- B** 10:00 a.m.
- C** 10:30 a.m.



- A** Half past two
- B** Three o'clock
- C** Half past three



- A** 05:00 a.m.
- B** 05:30 a.m.
- C** 06:30 a.m.



Name _____

Date _____

Circle the correct answer.

Which clock shows "Half past Eleven"?

A B C D

Which clock shows "Half past Five"?

A B C D

Which clock shows "8:30"?

A B C D



Name _____

Date _____

Circle the correct answer.

Which clock shows "4:30"?

A B C D

Which clock shows "Half past Nine"?

A B C D

Which clock shows "Half past One"?

A B C D



INFIQ GRADE 1 WORKSHEETS

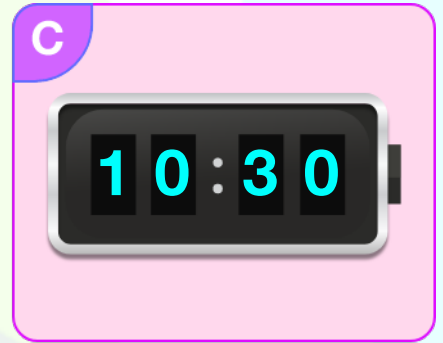
Time - Tell Time to Half Hour

Name _____

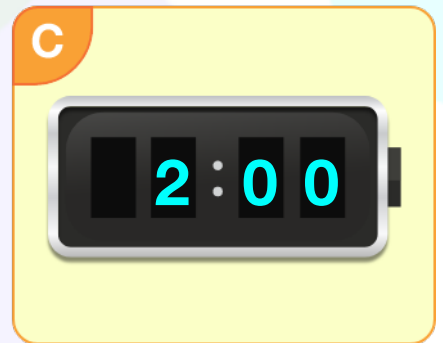

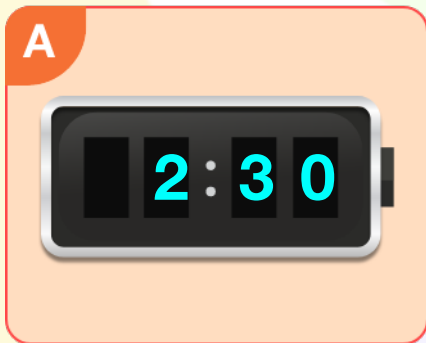
Date _____

Circle the correct answer.

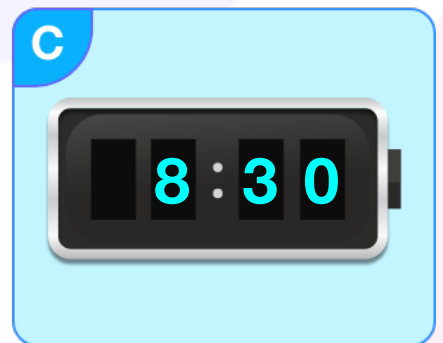
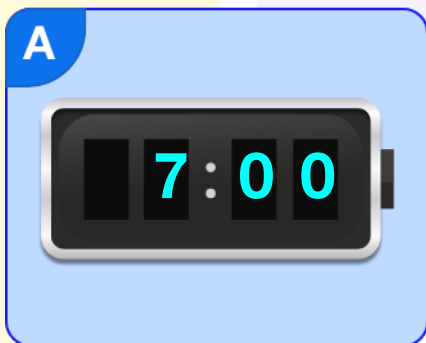
Which clock shows "Half past Ten"?



Which clock shows "Half past Two"?



Which clock shows "Half past Seven"?



Download the Curriculum-based **INFIQ** Digital Workbook from the App Store for **UNLIMITED QUESTIONS**



INFIQ GRADE 1 WORKSHEETS

Time - Tell Time to Half Hour

Name _____

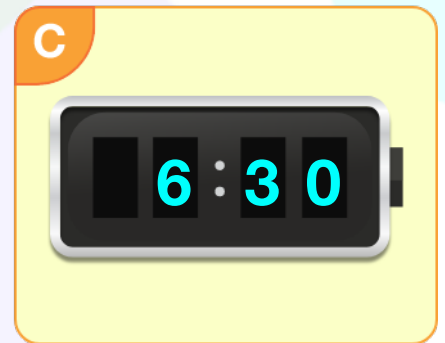

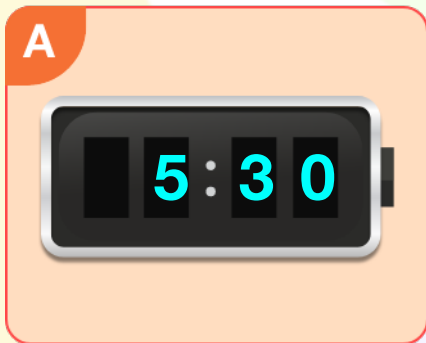
Date _____

Circle the correct answer.

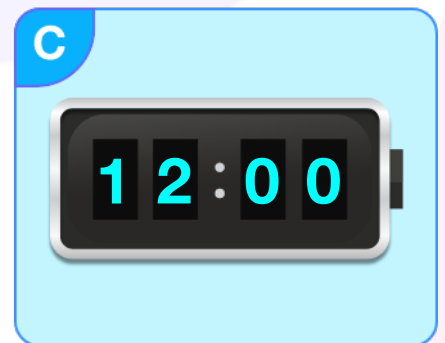
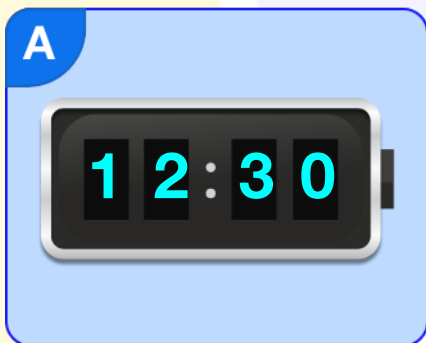
Which clock shows "Half past Three"?



Which clock shows "Half past Six"?



Which clock shows "Half past Twelve"?



Download the Curriculum-based **INFIQ** Digital Workbook from the App Store for **UNLIMITED QUESTIONS**