

Fun with Math

Complete by finding the value of each symbol

$$\text{Butterfly} + \text{Butterfly} = 4$$

$$\text{Bee} - \text{Butterfly} = 2$$

$$\text{Bee} + \text{Bee} = ?$$

$$\text{Butterfly} = \underline{\quad}$$

$$\text{Bee} = \underline{\quad}$$

$$\text{Green Butterfly} - \text{Bee} = 4$$

$$\text{Bee} + \text{Bee} = 6$$







$$\text{Green Butterfly} + \text{Green Butterfly} = ?$$


$$\text{Bee} = \underline{\quad}$$


$$\text{Green Butterfly} = \underline{\quad}$$


Answer Key

Complete by finding the value of each symbol

	+		=	4
	-		=	2
	+		=	8

 = 2

 = 4



	-		=	4
	+		=	6
	+		=	14

 = 3

 = 7

