

Fun With Math

Complete by finding the value of each symbol

$$\begin{array}{r} \text{Polyhedron} - \text{Crown} = 6 \\ \text{Polyhedron} + \text{Polyhedron} = 14 \\ \text{Polyhedron} + \text{Crown} = ? \end{array}$$

$$\text{Polyhedron} = \underline{\quad}$$

$$\text{Crown} = \underline{\quad}$$



$$\begin{array}{r} \text{Purple Umbrella} + \text{Pink Umbrella} = 12 \\ \text{Pink Umbrella} + \text{Pink Umbrella} = 4 \\ \text{Purple Umbrella} - \text{Pink Umbrella} = ? \end{array}$$

$$\text{Pink Umbrella} = \underline{\quad}$$

$$\text{Purple Umbrella} = \underline{\quad}$$



Answer Key







Complete by finding the value of each symbol


 7	-	 1	=	6
 7	+	 7	=	14
 7	+	 1	=	8


 = 7

 = 1



 10	+	 2	=	12
 2	+	 2	=	4
 10	-	 2	=	8

 = 2

 = 10

