

Fun With Math

Complete by finding the value of each symbol

$$\text{Flower} + \text{Flower} = 16$$

$$\text{Flower} - \text{Tree} = 4$$

$$\text{Tree} + \text{Tree} = ?$$

$$\text{Flower} = \underline{\quad}$$

$$\text{Tree} = \underline{\quad}$$




$$\text{Yellow Tree} - \text{Purple Flower} = 1$$

$$\text{Yellow Tree} + \text{Yellow Tree} = 2$$

$$\text{Purple Flower} + \text{Purple Flower} = ?$$







$$\text{Yellow Tree} = \underline{\quad}$$


$$\text{Purple Flower} = \underline{\quad}$$





Answer Key







Complete by finding the value of each symbol


 8	+	 8	=	16
 8	-	 4	=	4
 4	+	 4	=	8


 = 8

 = 4



 1	-	 0	=	1
 1	+	 1	=	2
 0	+	 0	=	0

 = 1

 = 0

