

Fun With Math

Complete by finding the value of each symbol

$$\text{Donut} + \text{Donut} = 18$$

$$\text{Donut} - \text{Cupcake} = 5$$

$$\text{Cupcake} + \text{Cupcake} = ?$$

$$\text{Cupcake} = \underline{\quad}$$

$$\text{Donut} = \underline{\quad}$$



$$\text{Full Moon} + \text{Full Moon} = 16$$

$$\text{Full Moon} - \text{Crescent Moon} = 5$$

$$\text{Crescent Moon} + \text{Crescent Moon} = ?$$


$$\text{Full Moon} = \underline{\quad}$$

$$\text{Crescent Moon} = \underline{\quad}$$







Answer Key


Complete by finding the value of each symbol

	9	+		9	=	18
	9	-		4	=	5
	4	+		4	=	8

	=	<u>4</u>
	=	<u>9</u>



	8	+		8	=	16
	8	-		3	=	5
	3	+		3	=	6

	=	<u>8</u>
	=	<u>3</u>

