

Fun with Math

Complete by finding the value of each symbol

$$\begin{array}{r} \text{Barn} + \text{Barn} = 6 \\ \text{Barn} - \text{Watering Can} = 3 \\ \text{Watering Can} + \text{Watering Can} = ? \end{array}$$

$$\begin{array}{r} \text{Barn} = \underline{\quad} \\ \text{Watering Can} = \underline{\quad} \end{array}$$



$$\begin{array}{r} \text{Armchair} + \text{Armchair} = 8 \\ \text{Teacup} - \text{Armchair} = 1 \\ \text{Teacup} + \text{Teacup} = ? \end{array}$$

$$\begin{array}{r} \text{Armchair} = \underline{\quad} \\ \text{Teacup} = \underline{\quad} \end{array}$$




Answer Key


Complete by finding the value of each symbol


3 + 3 = 6

3 - 0 = 3

0 + 0 = 0

 = 3


 = 0




4 + 4 = 8

5 - 4 = 1

5 + 5 = 10

 = 4

 = 5

