





Name \_\_\_\_\_

Date \_\_\_\_\_

**Which of the following circles is divided into fourths?** (Circle the correct answer)

1

2

3

4

5

6

7

8

Download the Curriculum-based **INFIQ** Digital Workbook from the App Store for **UNLIMITED QUESTIONS**



Name \_\_\_\_\_

Date \_\_\_\_\_

**Which of the following circles is divided into quarters?** (Circle the correct answer)

1

2

3

4

5

6

7

8

Download the Curriculum-based **INFIQ** Digital Workbook from the App Store for **UNLIMITED QUESTIONS**

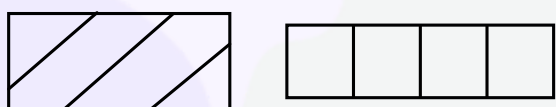


Name \_\_\_\_\_

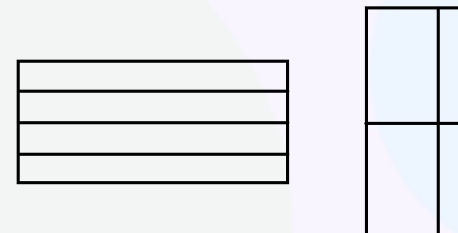
Date \_\_\_\_\_

**Which of the following rectangles is divided into fourths?** (Circle the correct answer)

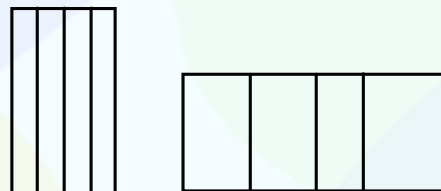
1



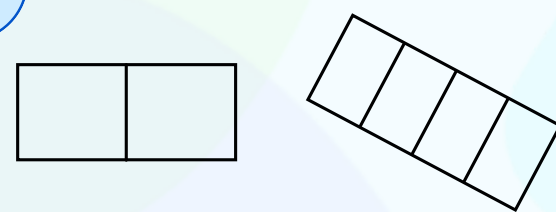
2



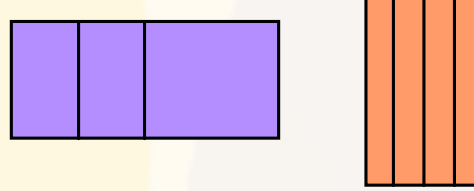
3



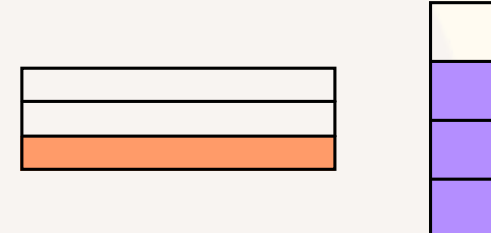
4



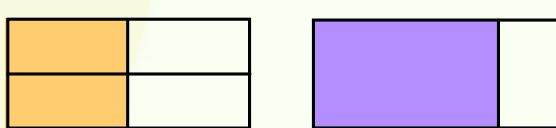
5



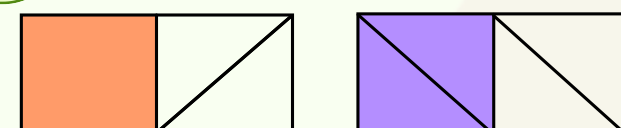
6



7



8



Download the Curriculum-based **INFIQ** Digital Workbook from the App Store for **UNLIMITED QUESTIONS**




Name \_\_\_\_\_

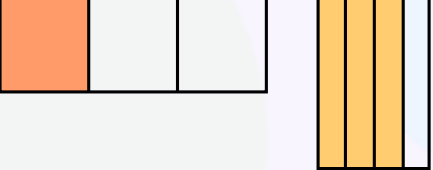
Date \_\_\_\_\_

**Which of the following rectangles is divided into quarters?** (Circle the correct answer)

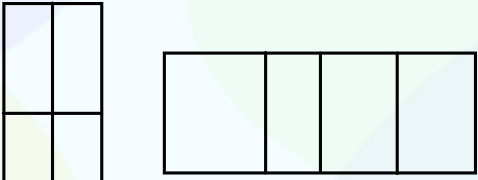
1



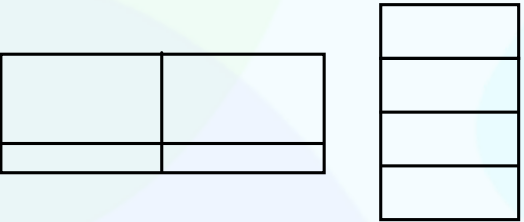
2



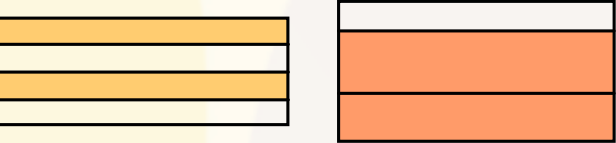
3



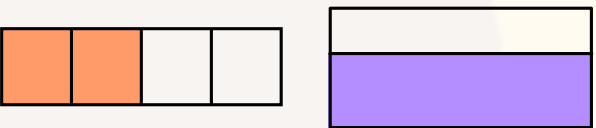
4



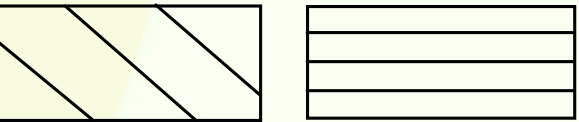
5



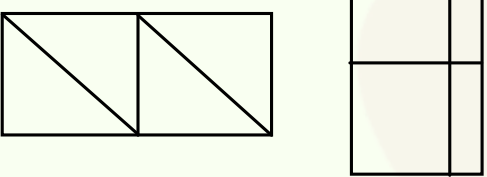
6



7



8



Download the Curriculum-based **INFIQ** Digital Workbook from the App Store for **UNLIMITED QUESTIONS**



Name \_\_\_\_\_

Date \_\_\_\_\_

Which of the following squares is divided into fourths? (Circle the correct answer)

1

The first square is divided into four triangles by two diagonals. The second square is divided into four smaller squares by a horizontal line and a vertical line.

2

The first square is divided into four horizontal strips. The second square is divided into four vertical strips.

3

The first square is divided into four horizontal strips. The second square is divided into four vertical strips.

4

The first square is divided into four smaller squares by a horizontal line and a vertical line. The second square is divided into four vertical strips.

5

The first square is divided into four triangles by two diagonals, with two opposite triangles shaded. The second square is divided into four triangles by two diagonals, with one triangle shaded.

6

The first square is divided into four triangles by two diagonals, with two opposite triangles shaded. The second square is divided into four smaller squares by a horizontal line and a vertical line, with two opposite squares shaded.

7

The first square is divided into four triangles by two diagonals. The second square is divided into four smaller squares by a horizontal line and a vertical line.

8

The first square is divided into four triangles by two diagonals, with one triangle shaded. The second square is divided into four vertical strips.

Download the Curriculum-based INFIQ Digital Workbook from the App Store for UNLIMITED QUESTIONS

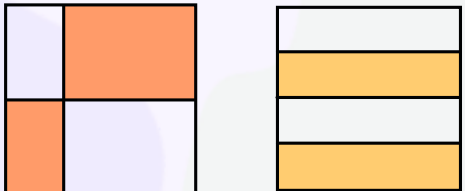


Name \_\_\_\_\_

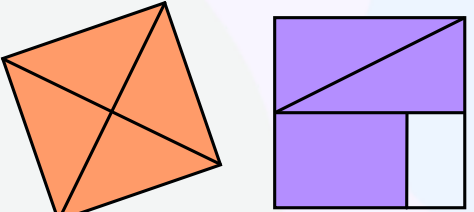
Date \_\_\_\_\_

**Which of the following squares is divided into quarters?** (Circle the correct answer)


1



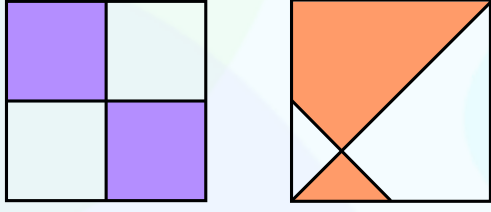
2



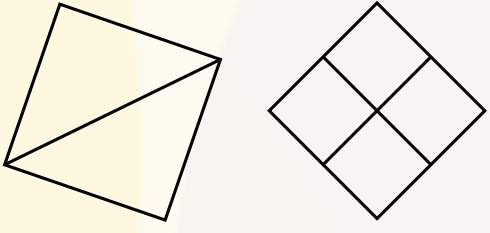
3



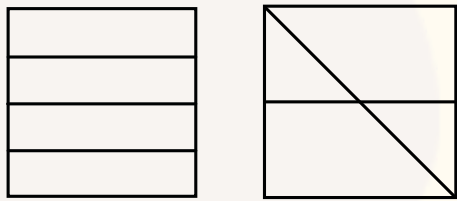
4



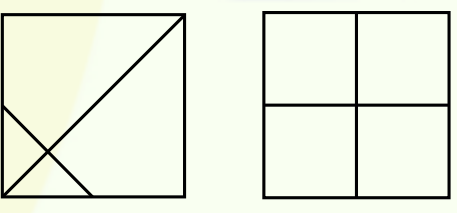
5



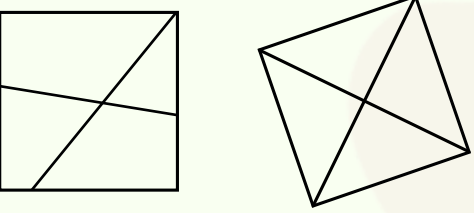
6



7



8

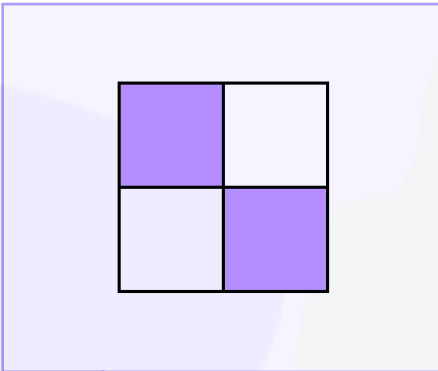




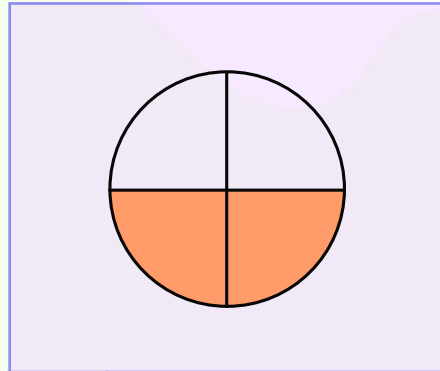
Name \_\_\_\_\_

Date \_\_\_\_\_


**How many fourths does a whole have?**



<b>A</b>	<b>3</b>
<b>B</b>	<b>2</b>
<b>C</b>	<b>4</b>

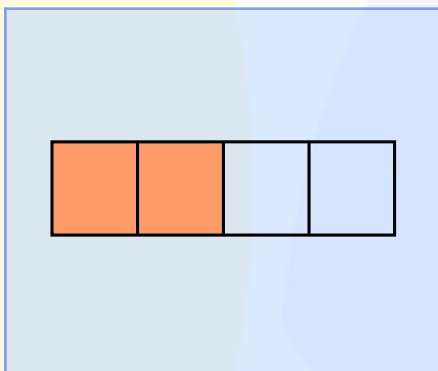


<b>A</b>	<b>2</b>
<b>B</b>	<b>4</b>
<b>C</b>	<b>3</b>

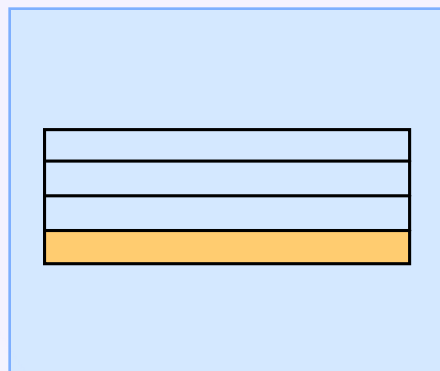


<b>A</b>	<b>1</b>
<b>B</b>	<b>3</b>
<b>C</b>	<b>4</b>

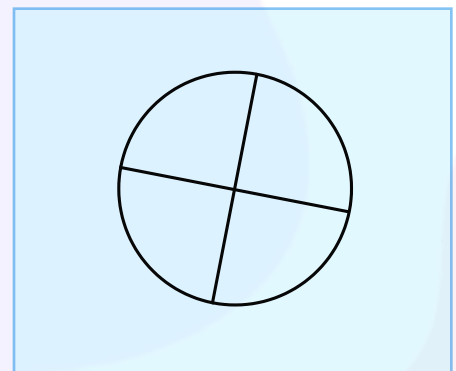
**How many quarters does a whole have?**



<b>A</b>	<b>4</b>
<b>B</b>	<b>3</b>
<b>C</b>	<b>1</b>



<b>A</b>	<b>3</b>
<b>B</b>	<b>2</b>
<b>C</b>	<b>4</b>



<b>A</b>	<b>1</b>
<b>B</b>	<b>4</b>
<b>C</b>	<b>3</b>

Download the Curriculum-based **INFIQ** Digital Workbook from the App Store for **UNLIMITED QUESTIONS**

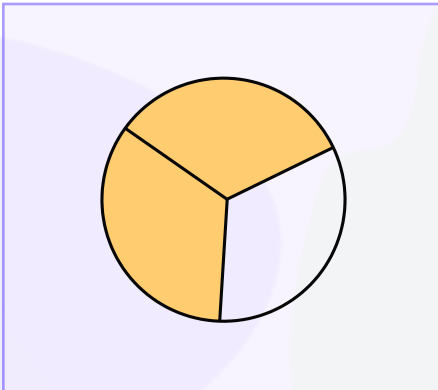




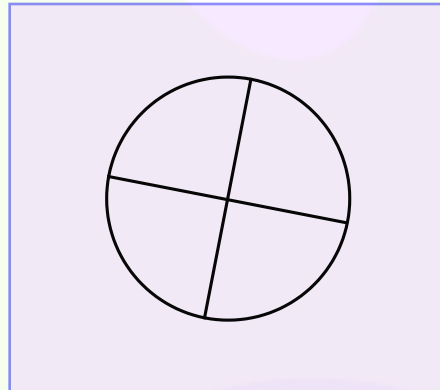
Name \_\_\_\_\_

Date \_\_\_\_\_


### Is the circle divided into fourths?



A	Yes
B	No

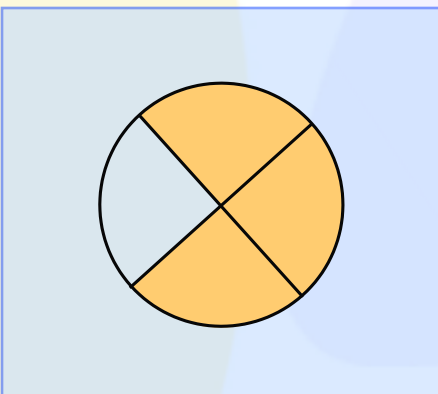


A	Yes
B	No

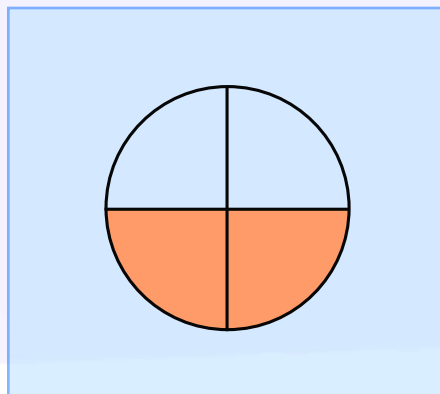


A	No
B	Yes

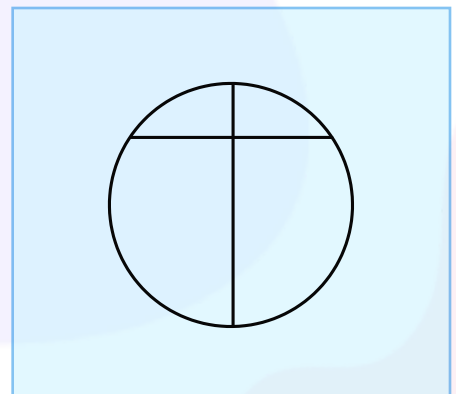
### Is the circle divided into quarters?



A	No
B	Yes



A	No
B	Yes



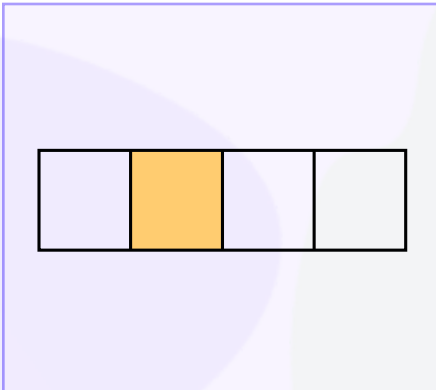
A	No
B	Yes



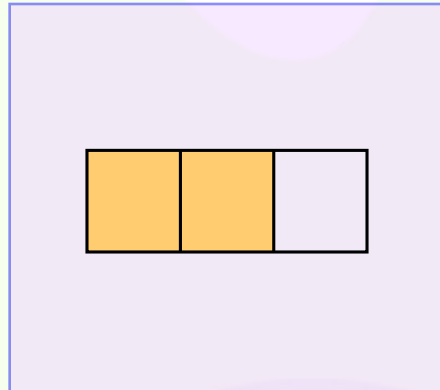
Name \_\_\_\_\_

Date \_\_\_\_\_

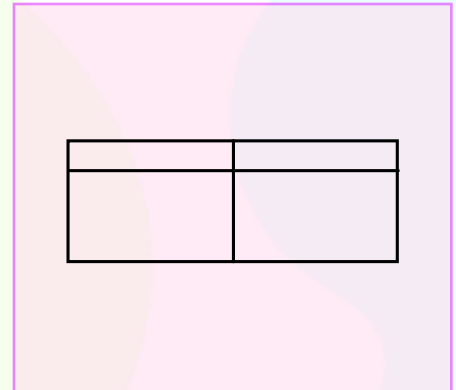
**Is the rectangle divided into fourths?**



<b>A</b>	Yes
<b>B</b>	No

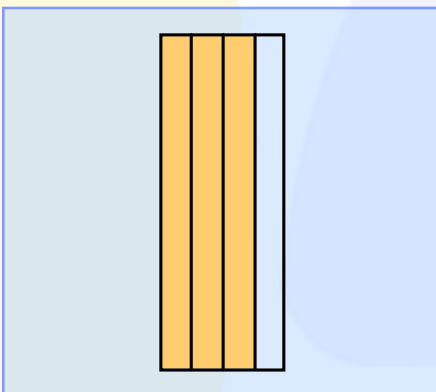


<b>A</b>	Yes
<b>B</b>	No

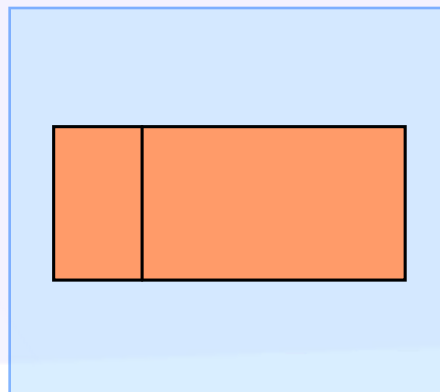


<b>A</b>	No
<b>B</b>	Yes

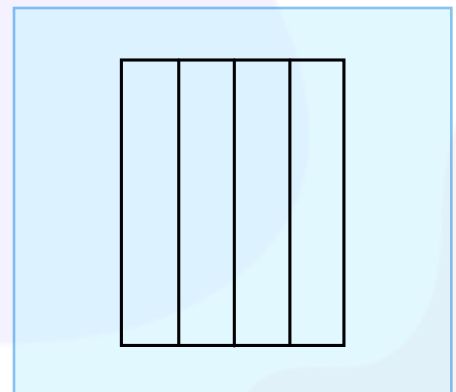
**Is the rectangle divided into quarters?**



<b>A</b>	No
<b>B</b>	Yes



<b>A</b>	Yes
<b>B</b>	No



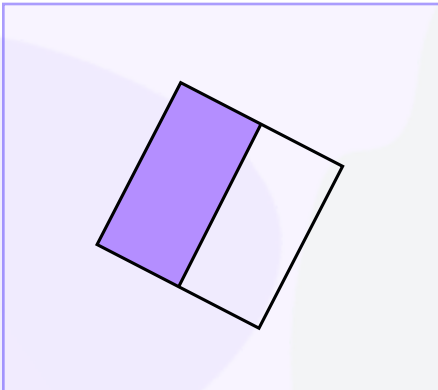
<b>A</b>	Yes
<b>B</b>	No



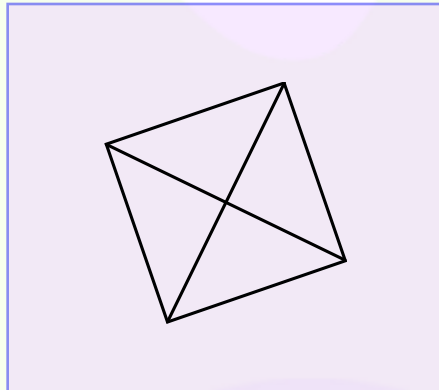
Name \_\_\_\_\_

Date \_\_\_\_\_

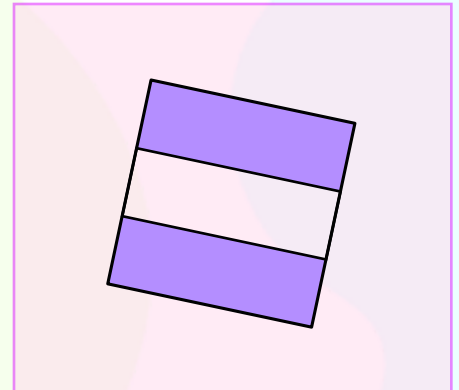
**Is the square divided into fourths?**



A	Yes
B	No

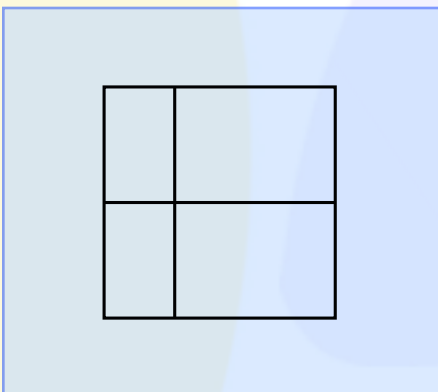


A	Yes
B	No

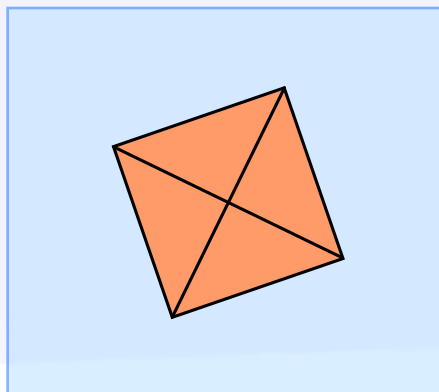


A	No
B	Yes

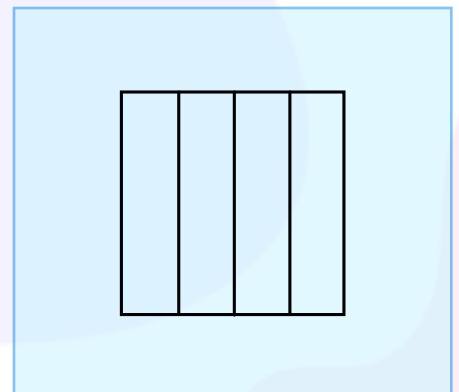
**Is the square divided into quarters?**



A	Yes
B	No



A	Yes
B	No



A	No
B	Yes

Download the Curriculum-based **INFIQ** Digital Workbook from the App Store for **UNLIMITED QUESTIONS**